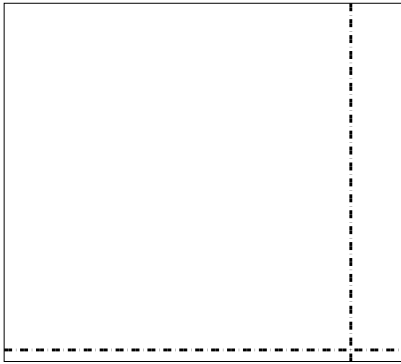





Dùng cách chia mảng để giải bài tính.


1)  $62 \times 69 =$



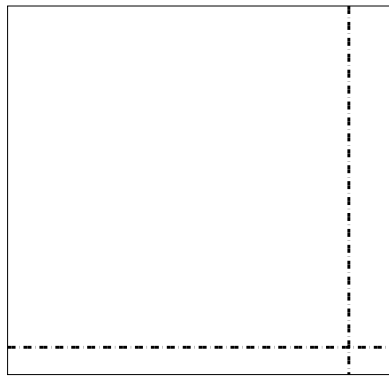
2)  $53 \times 39 =$



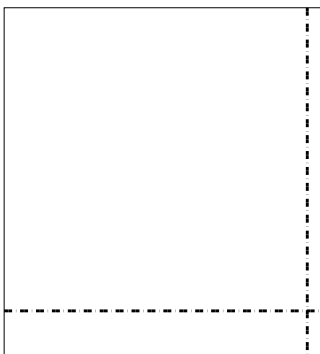
3)  $57 \times 66 =$




4)  $54 \times 57 =$



5)  $46 \times 42 =$



6)  $34 \times 27 =$



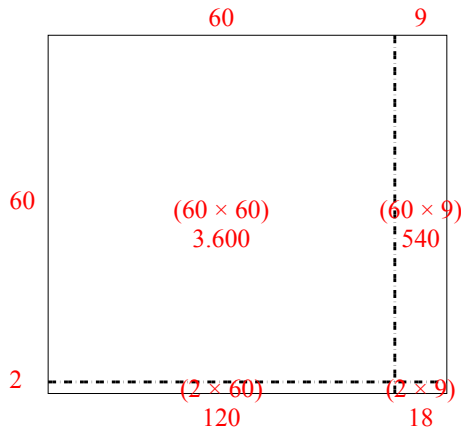
**Câu trả lời**

- 1. \_\_\_\_\_
- 2. \_\_\_\_\_
- 3. \_\_\_\_\_
- 4. \_\_\_\_\_
- 5. \_\_\_\_\_
- 6. \_\_\_\_\_

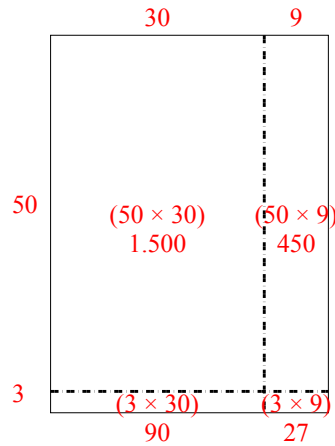


Dùng cách chia mảng để giải bài tính.

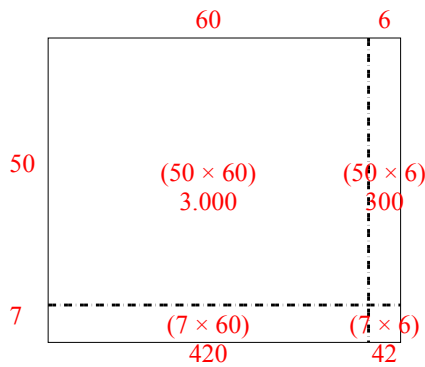
1)  $62 \times 69 =$



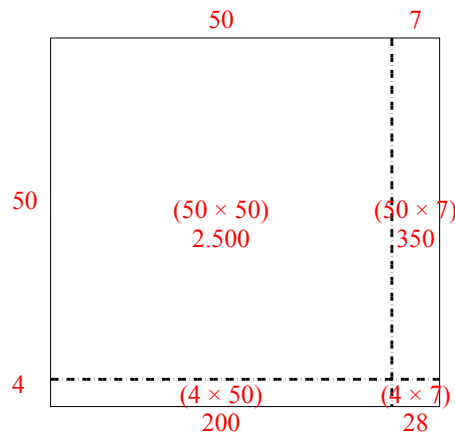
2)  $53 \times 39 =$



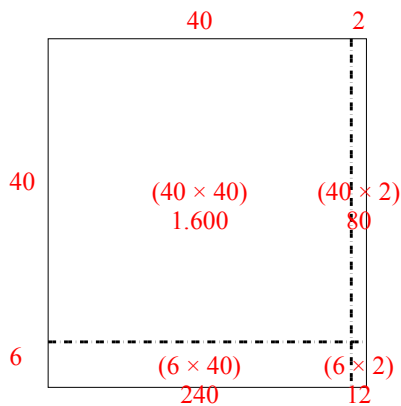
3)  $57 \times 66 =$



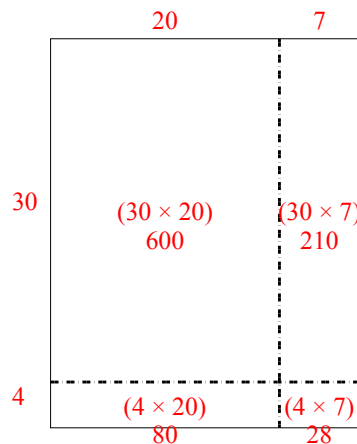
4)  $54 \times 57 =$



5)  $46 \times 42 =$



6)  $34 \times 27 =$



**Câu trả lời**

1. **4.278**

2. **2.067**

3. **3.762**

4. **3.078**

5. **1.932**

6. **918**