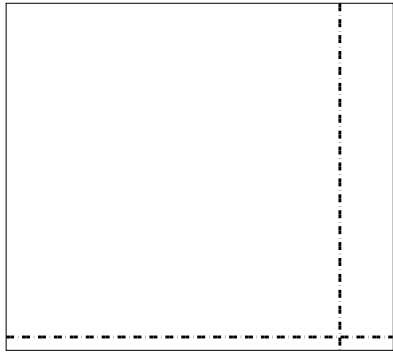





Dùng cách chia mảng để giải bài tính.

**Câu trả lời**

1)  $52 \times 58 =$




2)  $36 \times 33 =$




- 1. \_\_\_\_\_
- 2. \_\_\_\_\_
- 3. \_\_\_\_\_
- 4. \_\_\_\_\_
- 5. \_\_\_\_\_
- 6. \_\_\_\_\_

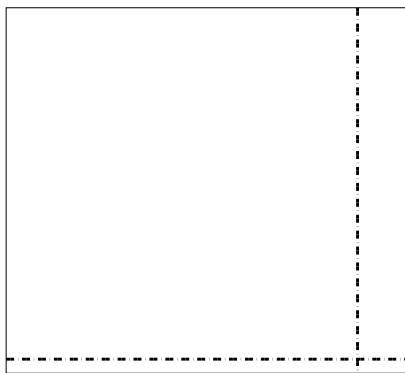
3)  $33 \times 46 =$




4)  $45 \times 68 =$



5)  $52 \times 57 =$



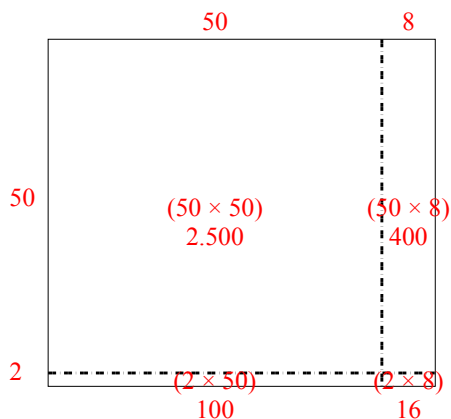
6)  $42 \times 37 =$



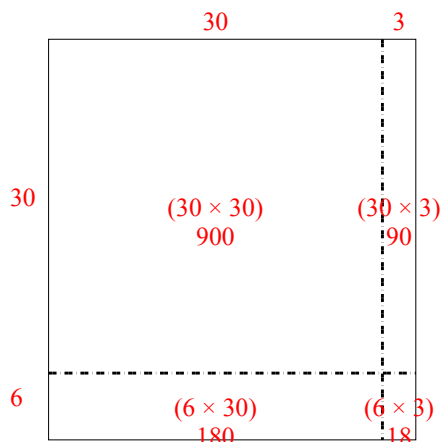


Dùng cách chia mảng để giải bài tính.

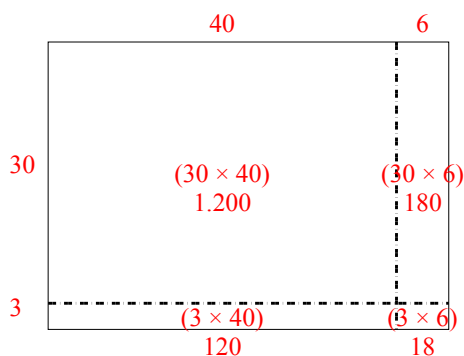
1)  $52 \times 58 =$



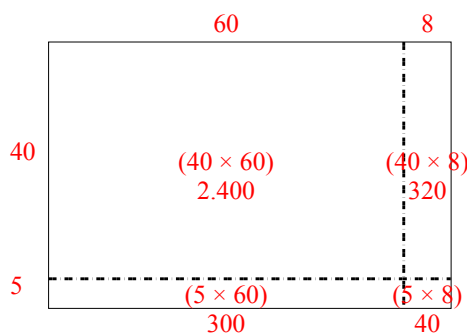
2)  $36 \times 33 =$



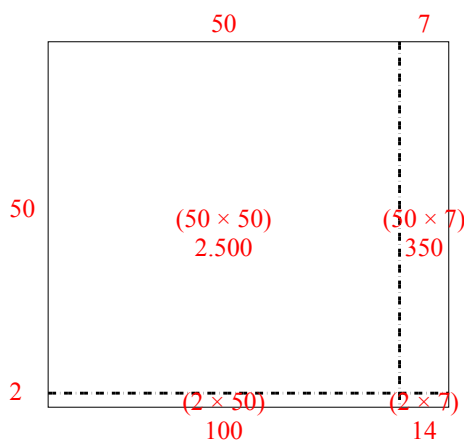
3)  $33 \times 46 =$



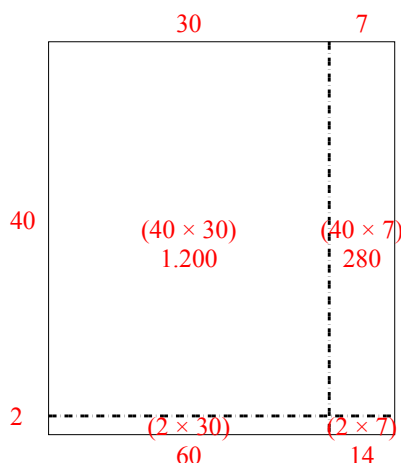
4)  $45 \times 68 =$



5)  $52 \times 57 =$



6)  $42 \times 37 =$



**Câu trả lời**

1. **3.016**

2. **1.188**

3. **1.518**

4. **3.060**

5. **2.964**

6. **1.554**