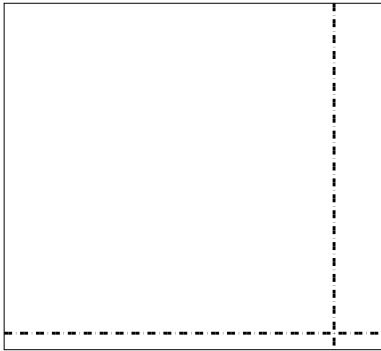





Dùng cách chia mảng để giải bài tính.


1) $63 \times 69 =$




2) $66 \times 53 =$




3) $42 \times 53 =$




4) $53 \times 72 =$



5) $62 \times 75 =$



6) $74 \times 88 =$



Câu trả lời

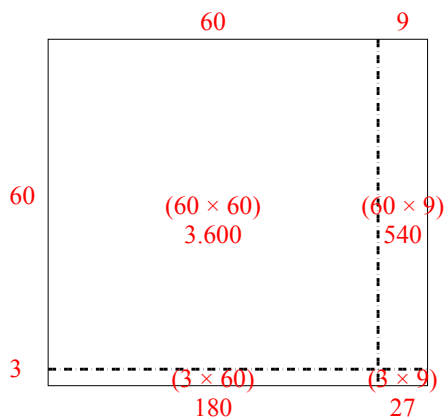
- 1. _____
- 2. _____
- 3. _____
- 4. _____
- 5. _____
- 6. _____



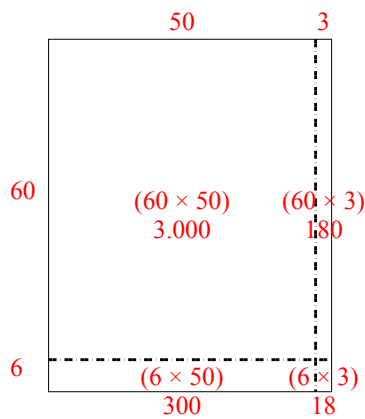
Dùng cách chia mảng để giải bài tính.

Câu trả lời

1) $63 \times 69 =$

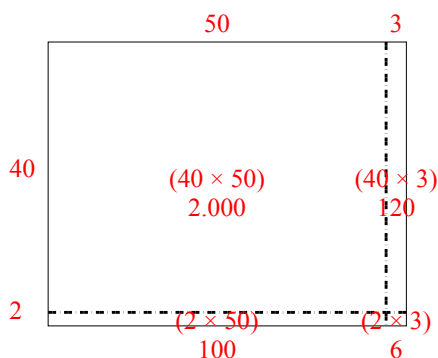


2) $66 \times 53 =$

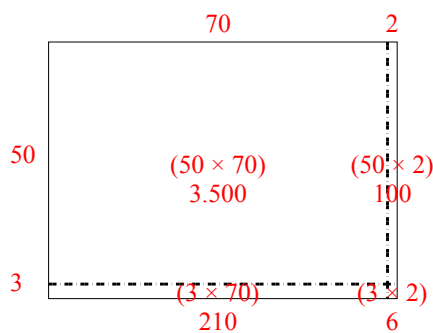


1. 4.347
2. 3.498
3. 2.226
4. 3.816
5. 4.650
6. 6.512

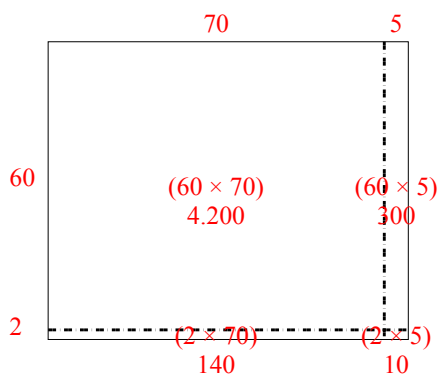
3) $42 \times 53 =$



4) $53 \times 72 =$



5) $62 \times 75 =$



6) $74 \times 88 =$

