





Dùng cách chia mảng để giải bài tính.


1) $59 \times 68 =$




2) $67 \times 75 =$




3) $53 \times 36 =$




4) $42 \times 55 =$



5) $43 \times 66 =$



6) $44 \times 28 =$



Câu trả lời

1. _____

2. _____

3. _____

4. _____

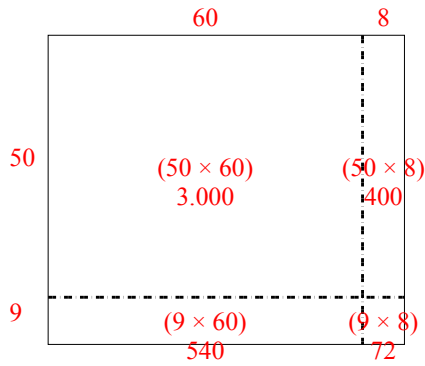
5. _____

6. _____

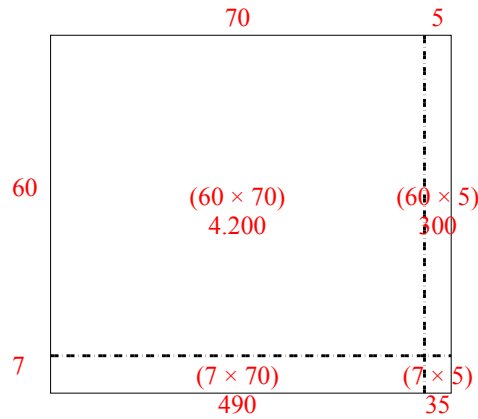


Dùng cách chia mảng để giải bài tính.

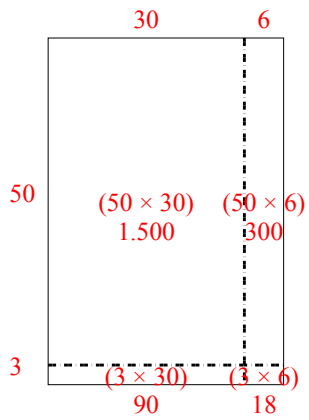
1) $59 \times 68 =$



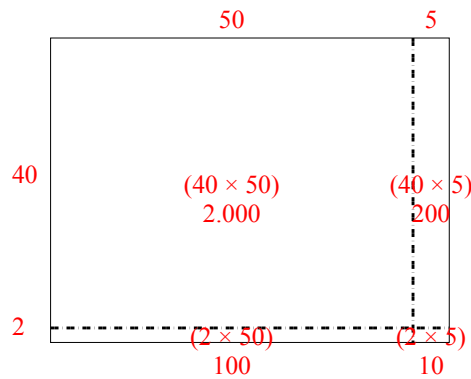
2) $67 \times 75 =$



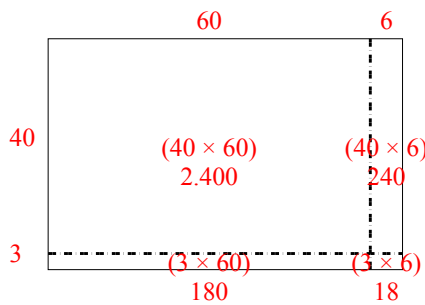
3) $53 \times 36 =$



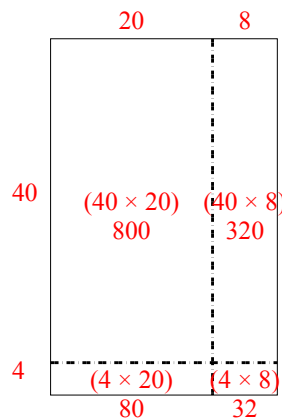
4) $42 \times 55 =$



5) $43 \times 66 =$



6) $44 \times 28 =$



Câu trả lời

1. **4.012**

2. **5.025**

3. **1.908**

4. **2.310**

5. **2.838**

6. **1.232**