





Dùng cách chia mảng để giải bài tính.


1)  $28 \times 10 =$



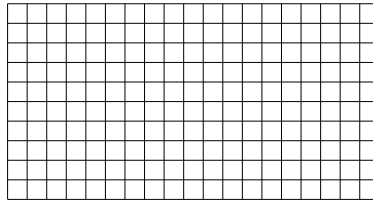
2)  $11 \times 10 =$




3)  $10 \times 18 =$




4)  $10 \times 19 =$



5)  $12 \times 10 =$



6)  $19 \times 10 =$



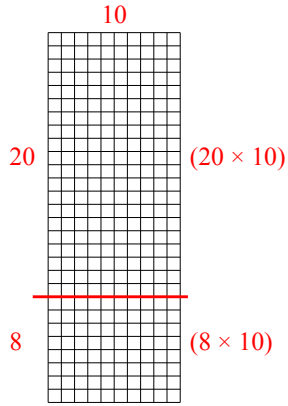
**Câu trả lời**

- 1. \_\_\_\_\_
- 2. \_\_\_\_\_
- 3. \_\_\_\_\_
- 4. \_\_\_\_\_
- 5. \_\_\_\_\_
- 6. \_\_\_\_\_

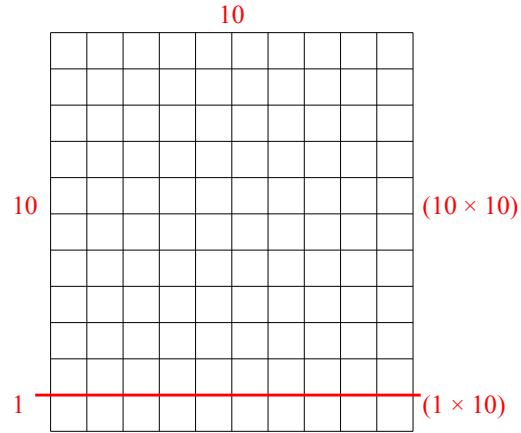


Dùng cách chia mảng để giải bài tính.

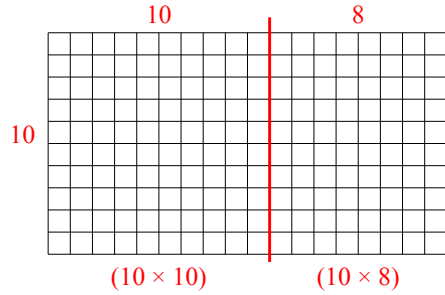
1)  $28 \times 10 =$



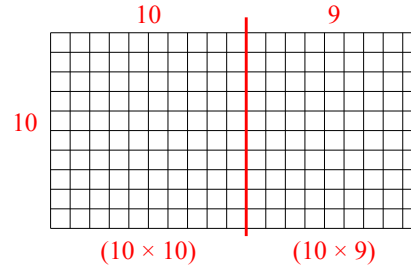
2)  $11 \times 10 =$



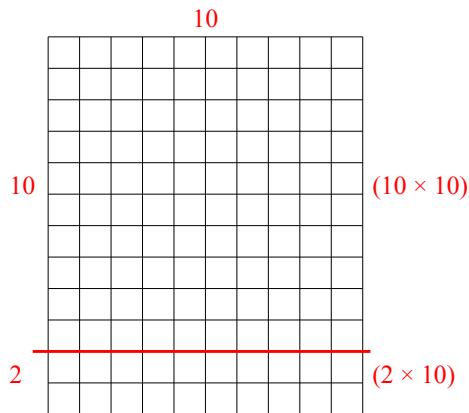
3)  $10 \times 18 =$



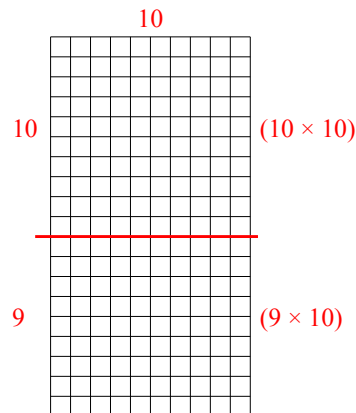
4)  $10 \times 19 =$



5)  $12 \times 10 =$



6)  $19 \times 10 =$



**Câu trả lời**

1. **280**

2. **110**

3. **180**

4. **190**

5. **120**

6. **190**