





Dùng cách chia mảng để giải bài tính.


1)  $22 \times 10 =$




2)  $20 \times 27 =$




3)  $10 \times 12 =$




4)  $10 \times 19 =$



5)  $13 \times 10 =$



6)  $18 \times 10 =$



**Câu trả lời**

1. \_\_\_\_\_

2. \_\_\_\_\_

3. \_\_\_\_\_

4. \_\_\_\_\_

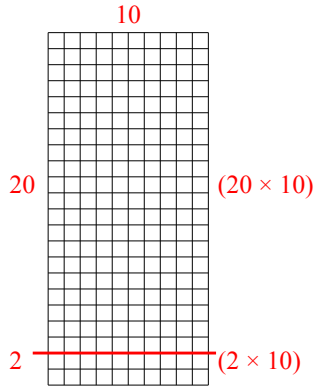
5. \_\_\_\_\_

6. \_\_\_\_\_

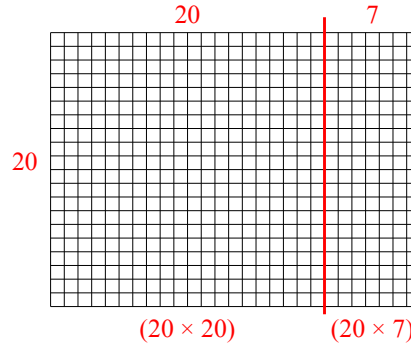


Dùng cách chia mảng để giải bài tính.

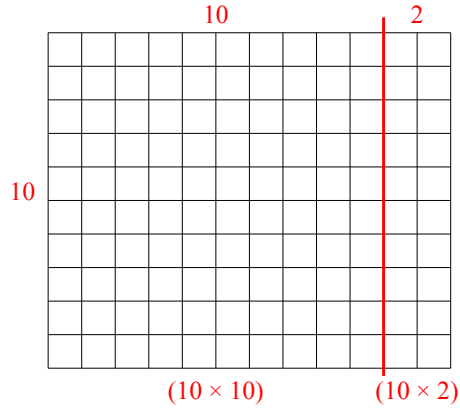
1)  $22 \times 10 =$



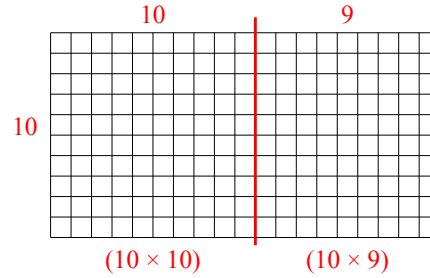
2)  $20 \times 27 =$



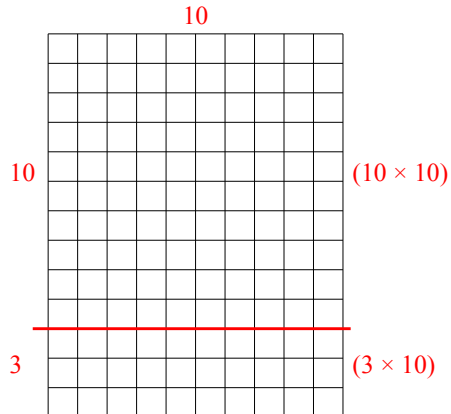
3)  $10 \times 12 =$



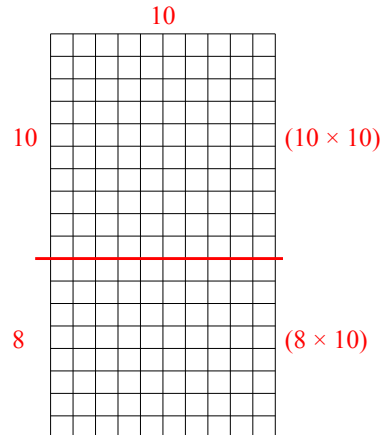
4)  $10 \times 19 =$



5)  $13 \times 10 =$



6)  $18 \times 10 =$



**Câu trả lời**

1. **220**

2. **540**

3. **120**

4. **190**

5. **130**

6. **180**