





Dùng cách chia mảng để giải bài tính.


1) $33 \times 20 =$




2) $22 \times 20 =$




3) $10 \times 13 =$




4) $15 \times 10 =$



5) $10 \times 14 =$



6) $12 \times 10 =$



Câu trả lời

1. _____

2. _____

3. _____

4. _____

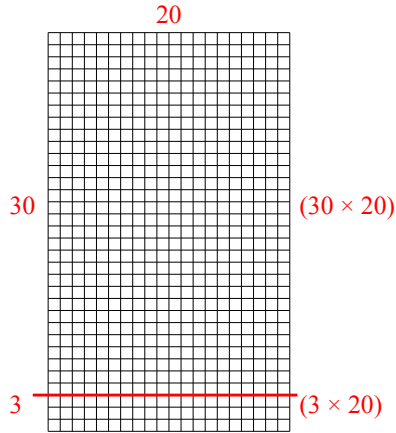
5. _____

6. _____

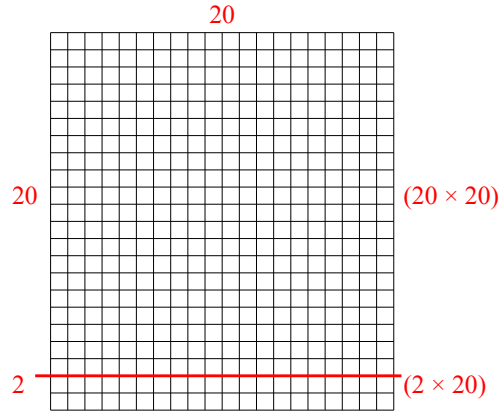


Dùng cách chia mảng để giải bài tính.

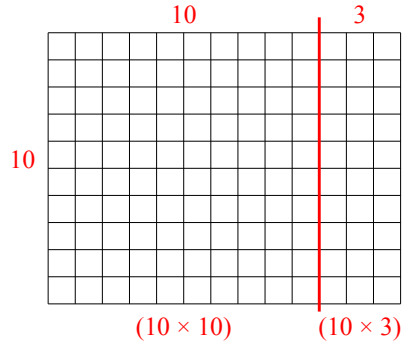
1) $33 \times 20 =$



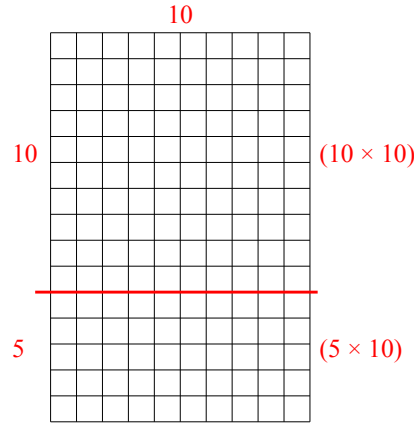
2) $22 \times 20 =$



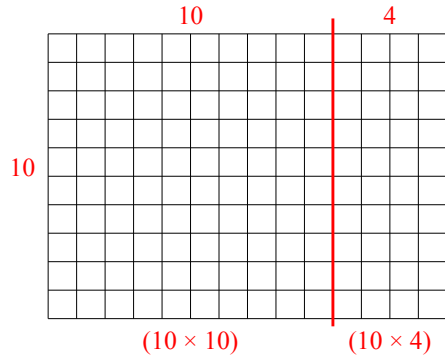
3) $10 \times 13 =$



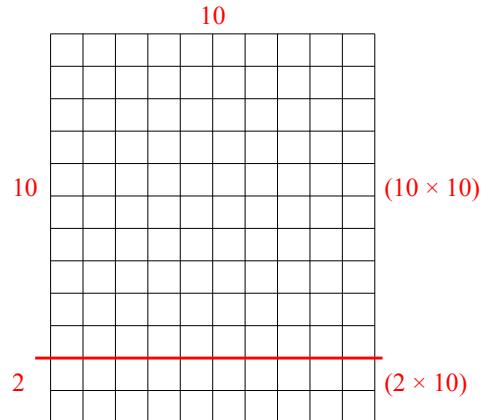
4) $15 \times 10 =$



5) $10 \times 14 =$



6) $12 \times 10 =$



Câu trả lời

1. **660**

2. **440**

3. **130**

4. **150**

5. **140**

6. **120**