





Dùng cách chia mảng để giải bài tính.


1) $11 \times 10 =$




2) $17 \times 10 =$




3) $10 \times 13 =$




4) $10 \times 17 =$



5) $10 \times 19 =$



6) $10 \times 15 =$



Câu trả lời

1. _____

2. _____

3. _____

4. _____

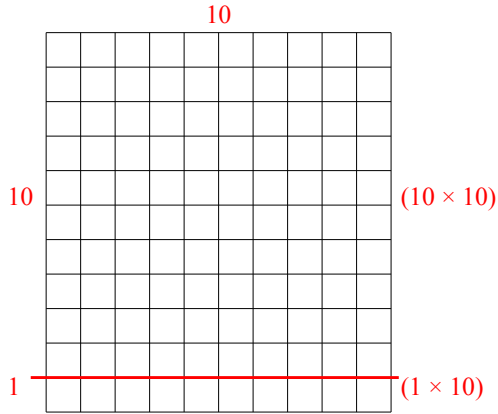
5. _____

6. _____

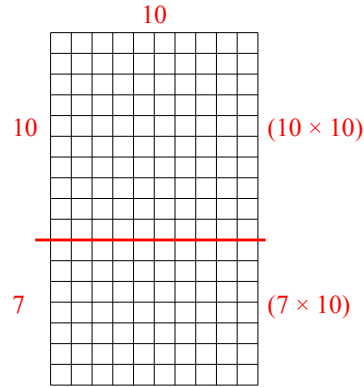


Dùng cách chia mảng để giải bài tính.

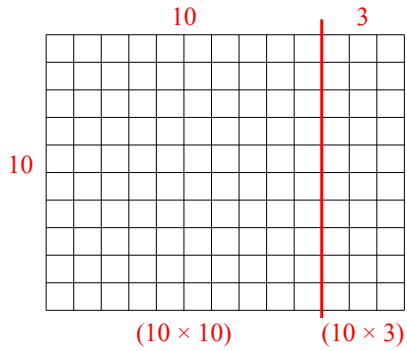
1) $11 \times 10 =$



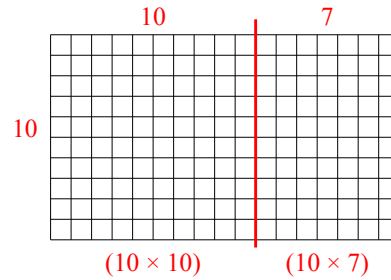
2) $17 \times 10 =$



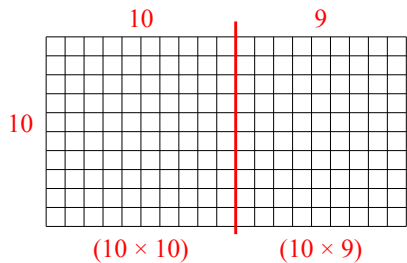
3) $10 \times 13 =$



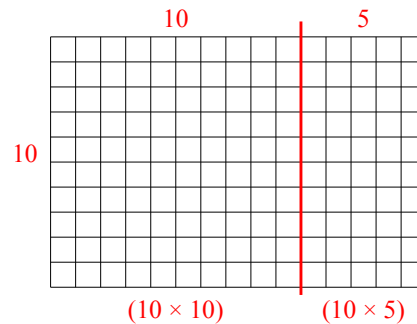
4) $10 \times 17 =$



5) $10 \times 19 =$



6) $10 \times 15 =$



Câu trả lời

1. 110
2. 170
3. 130
4. 170
5. 190
6. 150