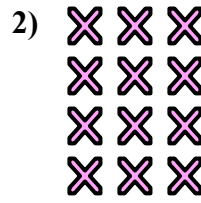





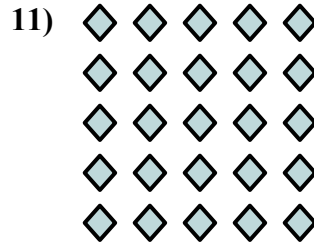
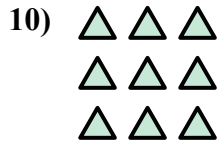
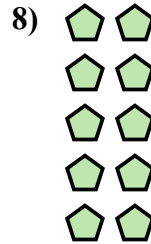




Viết một biểu thức để biểu diễn mảng hình và tìm số lượng hình.

Câu trả lời






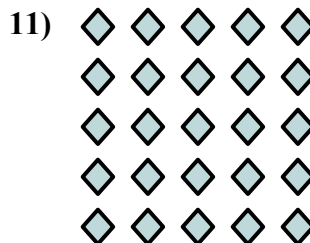
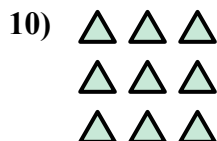
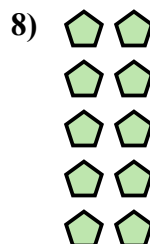



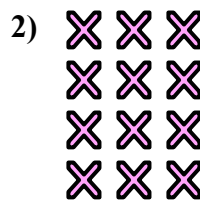

Vd. $3 \times 5 = 15$



1. _____
2. _____
3. _____
4. _____
5. _____
6. _____
7. _____
8. _____
9. _____
10. _____
11. _____
12. _____
13. _____
14. _____



Viết một biểu thức để biểu diễn mảng hình và tìm số lượng hình.

**Câu trả lời**

Vd. $3 \times 5 = 15$

1. $5 \times 4 = 20$

2. $4 \times 3 = 12$

3. $3 \times 4 = 12$

4. $4 \times 4 = 16$

5. $5 \times 3 = 15$

6. $2 \times 4 = 8$

7. $2 \times 3 = 6$

8. $5 \times 2 = 10$

9. $2 \times 5 = 10$

10. $3 \times 3 = 9$

11. $5 \times 5 = 25$

12. $4 \times 2 = 8$

13. $4 \times 5 = 20$

14. $3 \times 2 = 6$