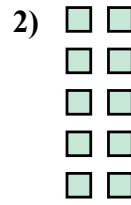
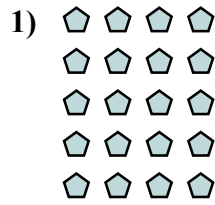
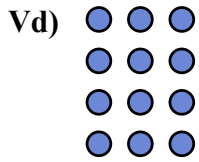




Viết mỗi mảng dưới dạng một bài toán cộng và giải quyết.

Câu trả lời



Vd. 3+3+3+3=12

1. _____

2. _____

3. _____

4. _____

5. _____

6. _____

7. _____

8. _____

9. _____

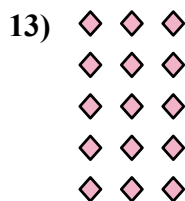
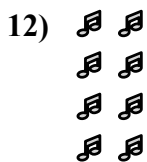
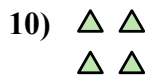

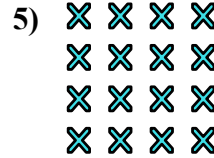
10. _____

11. _____

12. _____

13. _____

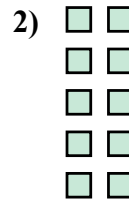
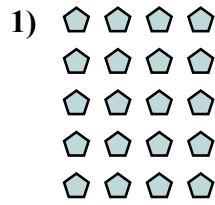
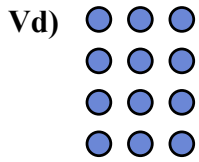
14. _____



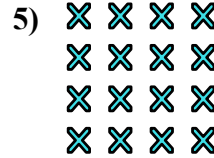


Viết mỗi mảng dưới dạng một bài toán cộng và giải quyết.

Câu trả lời



Vd. $3+3+3+3=12$



1. $4+4+4+4+4=20$

2. $2+2+2+2+2=10$


3. $3+3+3=9$

4. $2+2+2=6$

5. $4+4+4+4=16$

6. $4+4=8$

7. $5+5+5=15$




8. $5+5+5+5=20$

9. $5+5+5+5+5=25$

10. $2+2=4$

11. $3+3=6$



12. $2+2+2+2=8$

13. $3+3+3+3+3=15$

14. $5+5=10$

