




Viết mỗi mảng dưới dạng một bài toán cộng và giải quyết.

Câu trả lời

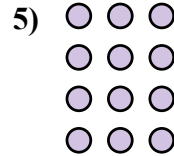



Vd. 3+3=6

1. _____

2. _____

3. _____





4. _____

5. _____

6. _____

7. _____

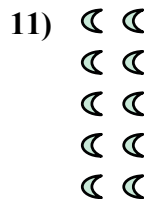




8. _____

9. _____

10. _____

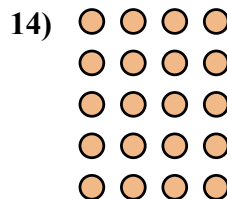
11. _____



12. _____


13. _____

14. _____





Viết mỗi mảng dưới dạng một bài toán cộng và giải quyết.



Câu trả lời

Vd. 3+3=6

1. 5+5+5=15

2. 3+3+3=9

3. 5+5=10

4. 2+2+2=6

5. 3+3+3+3=12

6. 4+4+4+4=16

7. 2+2+2+2=8

8. 4+4+4=12

9. 5+5+5+5+5=25

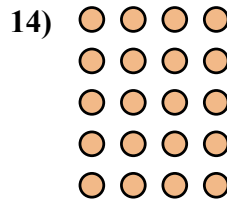
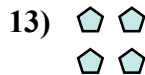
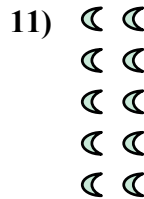




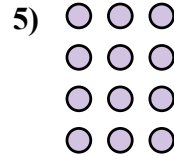

10. 5+5+5+5=20

11. 2+2+2+2+2=10

12. 4+4=8

13. 2+2=4

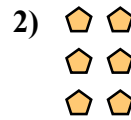
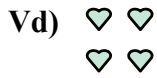
14. 4+4+4+4+4=20







Viết mỗi mảng dưới dạng một bài toán cộng và giải quyết.

Câu trả lời



Vd. 2+2=4



1. _____

2. _____


3. _____

4. _____

5. _____

6. _____

7. _____

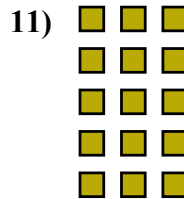



8. _____

9. _____

10. _____

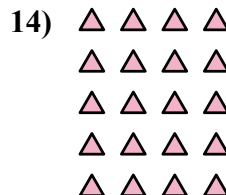
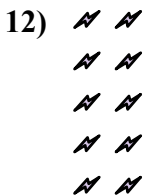
11. _____



12. _____

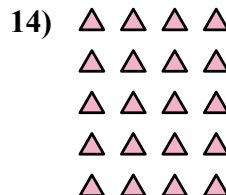
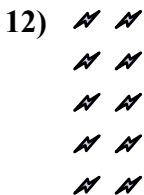
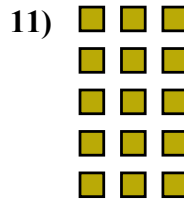
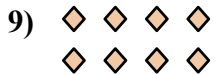




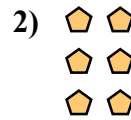
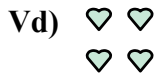
13. _____

14. _____





Viết mỗi mảng dưới dạng một bài toán cộng và giải quyết.



Câu trả lời

Vd. 2+2=4

1. 3+3+3=9

2. 2+2+2=6

3. 3+3+3+3=12

4. 4+4+4=12

5. 2+2+2+2=8

6. 4+4+4+4=16

7. 5+5+5=15

8. 5+5+5+5=20

9. 4+4=8

10. 3+3=6

11. 3+3+3+3+3=15

12. 2+2+2+2+2=10

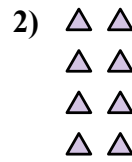
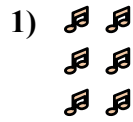
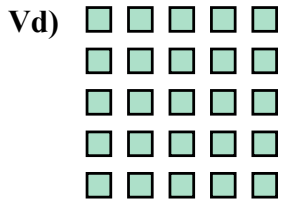
13. 5+5=10

14. 4+4+4+4+4=20



Viết mỗi mảng dưới dạng một bài toán cộng và giải quyết.

Câu trả lời





Vd. 5+5+5+5+5=25

1. _____

2. _____

3. _____



4. _____

5. _____

6. _____

7. _____

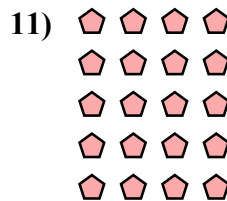


8. _____

9. _____

10. _____

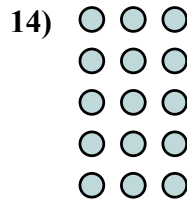
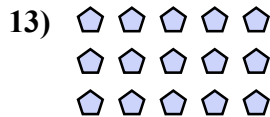
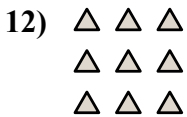
11. _____



12. _____

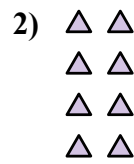
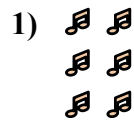
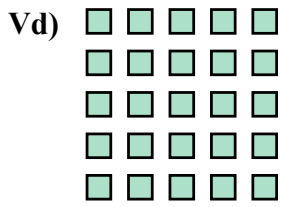
13. _____

14. _____





Viết mỗi mảng dưới dạng một bài toán cộng và giải quyết.

**Câu trả lời**

Vd. $5+5+5+5+5=25$

1. $2+2+2=6$

2. $2+2+2+2=8$

3. $3+3=6$

4. $5+5+5+5=20$

5. $2+2+2+2+2=10$

6. $2+2=4$

7. $4+4+4=12$

8. $5+5=10$

9. $3+3+3+3=12$

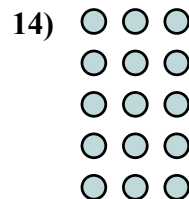
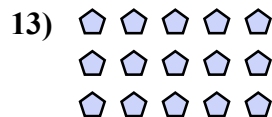
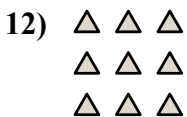
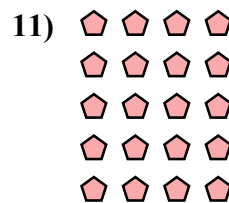
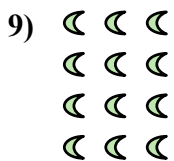


10. $4+4+4+4=16$

11. $4+4+4+4+4=20$

12. $3+3+3=9$

13. $5+5+5=15$

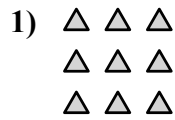
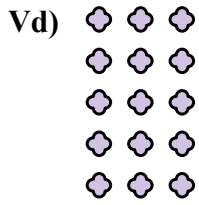
14. $3+3+3+3+3=15$





Viết mỗi mảng dưới dạng một bài toán cộng và giải quyết.

Câu trả lời

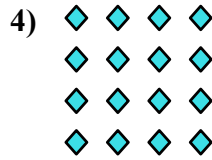



Vd. 3+3+3+3+3=15

1. _____

2. _____

3. _____




4. _____

5. _____

6. _____

7. _____


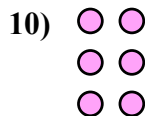
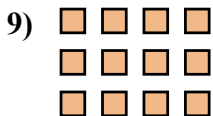


8. _____

9. _____

10. _____

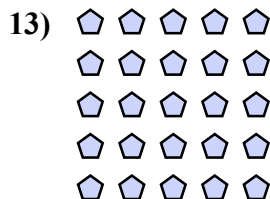
11. _____



12. _____

13. _____

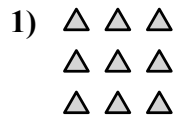
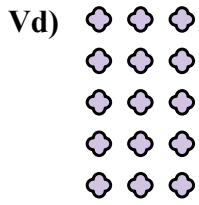
14. _____







Viết mỗi mảng dưới dạng một bài toán cộng và giải quyết.

Câu trả lời



Vd. $3+3+3+3+3=15$



1. $3+3+3=9$

2. $3+3=6$


3. $2+2+2+2=8$

4. $4+4+4+4=16$

5. $5+5=10$

6. $4+4=8$

7. $3+3+3+3=12$


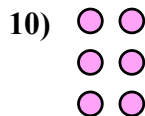
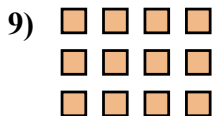


8. $4+4+4+4+4=20$

9. $4+4+4=12$

10. $2+2+2=6$

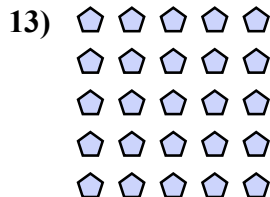
11. $5+5+5=15$



12. $5+5+5+5=20$

13. $5+5+5+5+5=25$

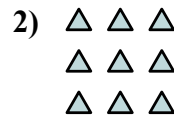

14. $2+2=4$





Viết mỗi mảng dưới dạng một bài toán cộng và giải quyết.

Câu trả lời

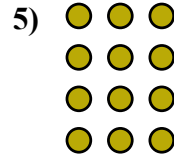
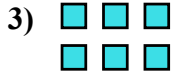


Vd. 2+2=4

1. _____

2. _____

3. _____

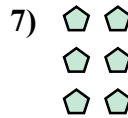



4. _____

5. _____

6. _____

7. _____




8. _____

9. _____

10. _____


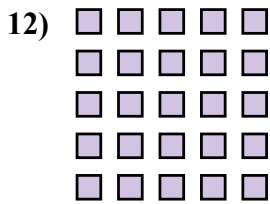
11. _____



12. _____

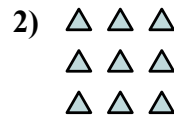

13. _____

14. _____





Viết mỗi mảng dưới dạng một bài toán cộng và giải quyết.



Câu trả lời

Vd. 2+2=4

1. 2+2+2+2+2=10

2. 3+3+3=9

3. 3+3=6

4. 4+4+4=12

5. 3+3+3+3=12

6. 4+4+4+4+4=20

7. 2+2+2=6

8. 3+3+3+3+3=15

9. 5+5=10


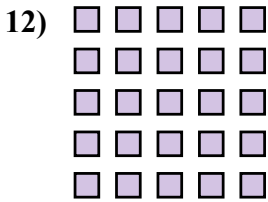
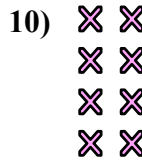
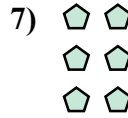
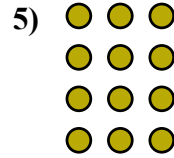
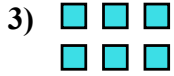
10. 2+2+2+2=8

11. 5+5+5=15

12. 5+5+5+5+5=25

13. 4+4=8


14. 4+4+4+4=16





Viết mỗi mảng dưới dạng một bài toán cộng và giải quyết.

Câu trả lời



Vd. 4+4+4+4=16

1. _____

2. _____

3. _____

4. _____

5. _____

6. _____

7. _____

8. _____

9. _____


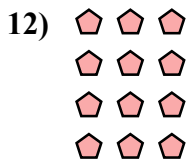

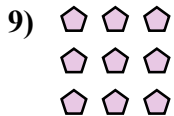
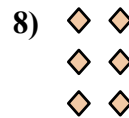

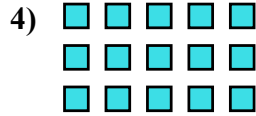
10. _____

11. _____

12. _____

13. _____


14. _____





Viết mỗi mảng dưới dạng một bài toán cộng và giải quyết.

Câu trả lời

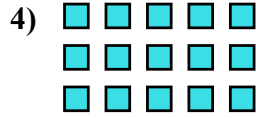


Vd. 4+4+4+4=16

1. 4+4=8

2. 2+2+2+2+2=10

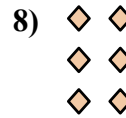

3. 4+4+4=12



4. 5+5+5=15

5. 3+3=6

6. 5+5+5+5=20

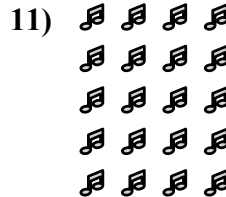

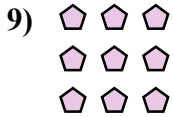


7. 3+3+3+3+3=15

8. 2+2+2=6

9. 3+3+3=9

10. 5+5+5+5+5=25

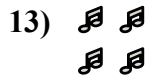
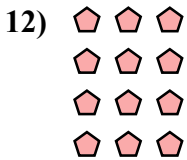


11. 4+4+4+4+4=20

12. 3+3+3+3=12

13. 2+2=4


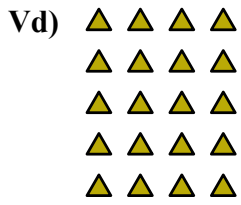
14. 5+5=10





Viết mỗi mảng dưới dạng một bài toán cộng và giải quyết.

Câu trả lời

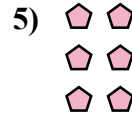


Vd. $4+4+4+4+4=20$

1. _____

2. _____

3. _____





4. _____

5. _____

6. _____

7. _____





8. _____

9. _____

10. _____

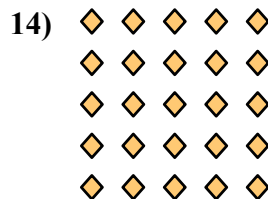
11. _____



12. _____


13. _____

14. _____





Viết mỗi mảng dưới dạng một bài toán cộng và giải quyết.

**Câu trả lời**

Vd. $4+4+4+4+4=20$

1. $2+2+2+2=8$

2. $2+2=4$

3. $3+3+3+3+3=15$

4. $4+4+4+4=16$

5. $2+2+2=6$

6. $3+3+3+3=12$

7. $2+2+2+2+2=10$

8. $3+3+3=9$

9. $3+3=6$

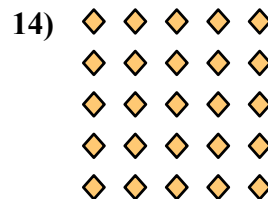





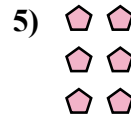
10. $4+4+4=12$

11. $5+5=10$

12. $4+4=8$

13. $5+5+5=15$

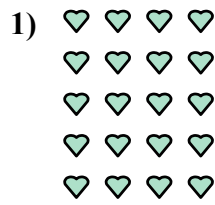

14. $5+5+5+5+5=25$





Viết mỗi mảng dưới dạng một bài toán cộng và giải quyết.

Câu trả lời

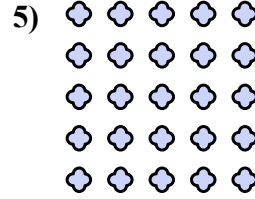



Vd. $4+4+4+4=16$

1. _____

2. _____

3. _____


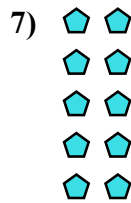


4. _____

5. _____

6. _____

7. _____


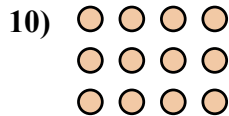
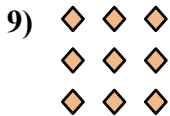


8. _____

9. _____

10. _____


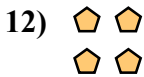
11. _____



12. _____

13. _____

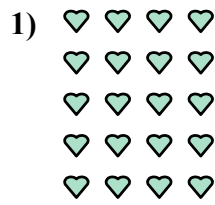

14. _____





Viết mỗi mảng dưới dạng một bài toán cộng và giải quyết.

Câu trả lời

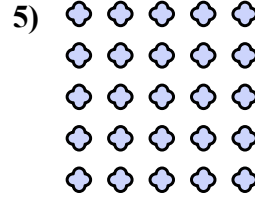


Vd. 4+4+4+4=16

1. 4+4+4+4+4=20

2. 5+5+5+5=20


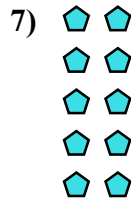
3. 3+3=6



4. 3+3+3+3=12

5. 5+5+5+5+5=25


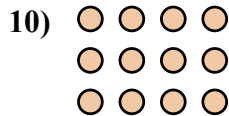
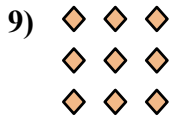
6. 5+5+5=15



7. 2+2+2+2+2=10

8. 5+5=10

9. 3+3+3=9



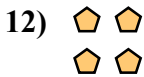


10. 4+4+4=12

11. 2+2+2+2=8

12. 2+2=4

13. 2+2+2=6

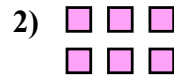
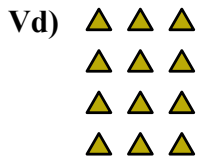


14. 4+4=8



Viết mỗi mảng dưới dạng một bài toán cộng và giải quyết.

Câu trả lời



Vd. 3+3+3+3=12

1. _____

2. _____

3. _____

4. _____

5. _____

6. _____

7. _____

8. _____

9. _____




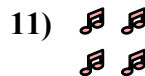
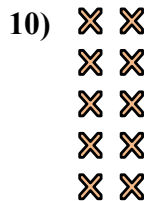
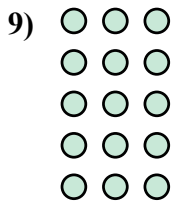
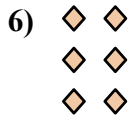
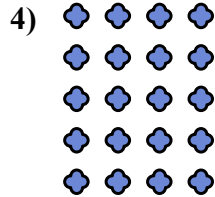

10. _____

11. _____

12. _____




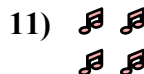
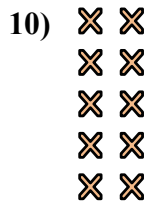
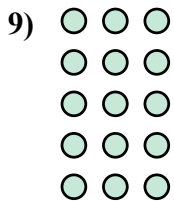
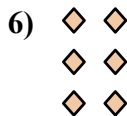

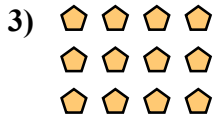
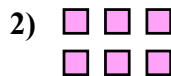
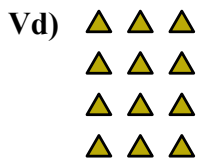
13. _____

14. _____





Viết mỗi mảng dưới dạng một bài toán cộng và giải quyết.

**Câu trả lời**

Vd. $3+3+3+3=12$

1. $3+3+3=9$

2. $3+3=6$

3. $4+4+4=12$

4. $4+4+4+4+4=20$

5. $5+5=10$

6. $2+2+2=6$

7. $4+4=8$

8. $4+4+4+4=16$

9. $3+3+3+3+3=15$

10. $2+2+2+2+2=10$

11. $2+2=4$

12. $5+5+5+5=20$


13. $5+5+5=15$

14. $2+2+2+2=8$

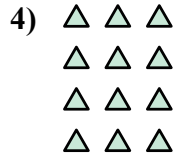



Viết mỗi mảng dưới dạng một bài toán cộng và giải quyết.

Câu trả lời



Vd. 4+4+4=12



1. _____

2. _____


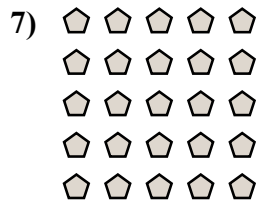
3. _____

4. _____

5. _____

6. _____

7. _____

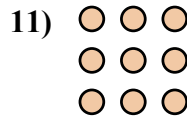

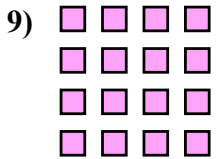


8. _____

9. _____

10. _____

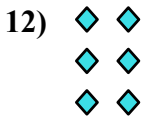
11. _____



12. _____



13. _____

14. _____





Viết mỗi mảng dưới dạng một bài toán cộng và giải quyết.



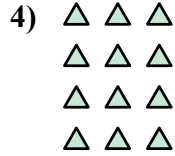

Câu trả lời

Vd. 4+4+4=12

1. 5+5=10

2. 5+5+5=15


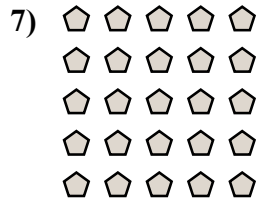
3. 5+5+5+5=20



4. 3+3+3+3=12

5. 3+3+3+3+3=15

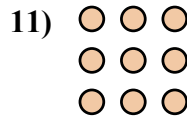

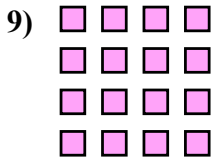
6. 3+3=6



7. 5+5+5+5+5=25

8. 2+2=4

9. 4+4+4+4=16

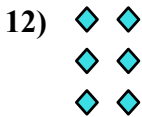


10. 2+2+2+2=8

11. 3+3+3=9

12. 2+2+2=6

13. 4+4=8



14. 2+2+2+2+2=10