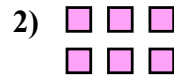
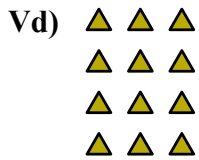




Viết mỗi mảng dưới dạng một bài toán cộng và giải quyết.

Câu trả lời



Vd. 3+3+3+3=12

1. _____

2. _____

3. _____

4. _____

5. _____

6. _____

7. _____

8. _____

9. _____




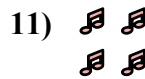
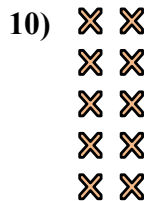
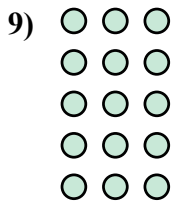
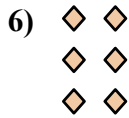

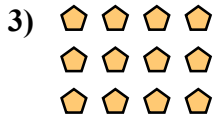
10. _____

11. _____

12. _____

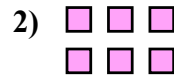
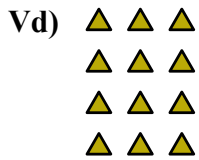
13. _____

14. _____





Viết mỗi mảng dưới dạng một bài toán cộng và giải quyết.

**Câu trả lời**

Vd. $3+3+3+3=12$

1. $3+3+3=9$

2. $3+3=6$

3. $4+4+4=12$

4. $4+4+4+4+4=20$

5. $5+5=10$

6. $2+2+2=6$

7. $4+4=8$

8. $4+4+4+4=16$

9. $3+3+3+3+3=15$

10. $2+2+2+2+2=10$

11. $2+2=4$

12. $5+5+5+5=20$

13. $5+5+5=15$

14. $2+2+2+2=8$

