
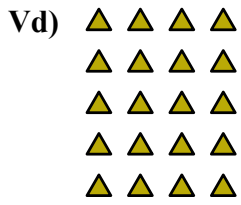




Viết mỗi mảng dưới dạng một bài toán cộng và giải quyết.

Câu trả lời

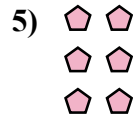


Vd. $4+4+4+4+4=20$

1. _____

2. _____

3. _____





4. _____

5. _____

6. _____

7. _____





8. _____

9. _____

10. _____

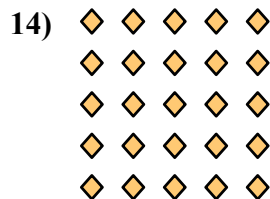
11. _____



12. _____



13. _____

14. _____





Viết mỗi mảng dưới dạng một bài toán cộng và giải quyết.

**Câu trả lời**

Vd. $4+4+4+4+4=20$

1. $2+2+2+2=8$

2. $2+2=4$

3. $3+3+3+3+3=15$

4. $4+4+4+4=16$

5. $2+2+2=6$

6. $3+3+3+3=12$

7. $2+2+2+2+2=10$

8. $3+3+3=9$

9. $3+3=6$

10. $4+4+4=12$

11. $5+5=10$

12. $4+4=8$

13. $5+5+5=15$

14. $5+5+5+5+5=25$

