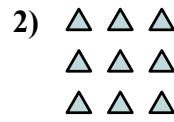





Viết mỗi mảng dưới dạng một bài toán cộng và giải quyết.

Câu trả lời

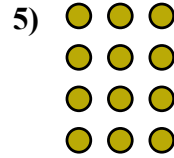
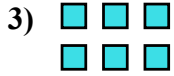


Vd. 2+2=4

1. _____

2. _____

3. _____

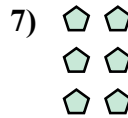



4. _____

5. _____

6. _____

7. _____

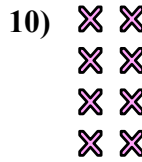


8. _____

9. _____

10. _____


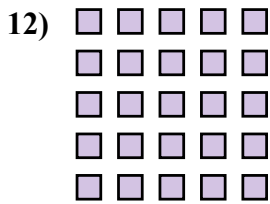
11. _____



12. _____

13. _____

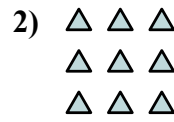

14. _____



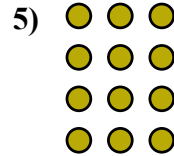
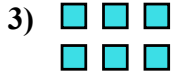


Viết mỗi mảng dưới dạng một bài toán cộng và giải quyết.

Câu trả lời



Vd. 2+2=4



1. 2+2+2+2+2=10

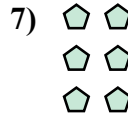
2. 3+3+3=9

3. 3+3=6

4. 4+4+4=12

5. 3+3+3+3=12

6. 4+4+4+4+4=20



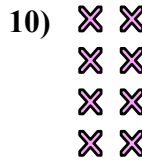
7. 2+2+2=6

8. 3+3+3+3+3=15

9. 5+5=10

10. 2+2+2+2=8

11. 5+5+5=15



12. 5+5+5+5+5=25

13. 4+4=8

14. 4+4+4+4=16

