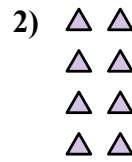
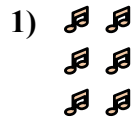
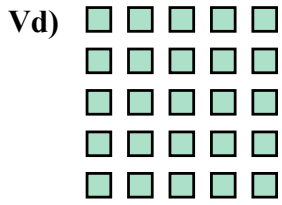




Viết mỗi mảng dưới dạng một bài toán cộng và giải quyết.

**Câu trả lời**





Vd. 5+5+5+5+5=25

1. \_\_\_\_\_

2. \_\_\_\_\_

3. \_\_\_\_\_



4. \_\_\_\_\_

5. \_\_\_\_\_

6. \_\_\_\_\_

7. \_\_\_\_\_

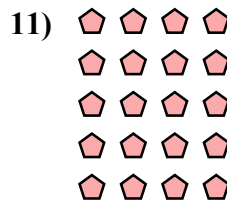
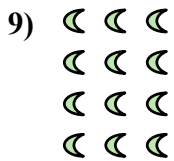


8. \_\_\_\_\_

9. \_\_\_\_\_

10. \_\_\_\_\_

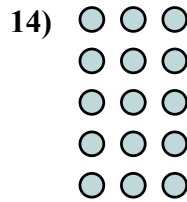
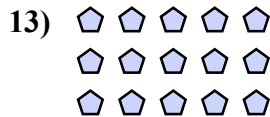
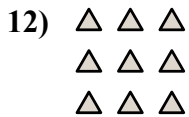
11. \_\_\_\_\_



12. \_\_\_\_\_

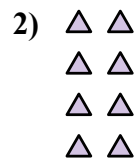
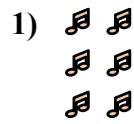
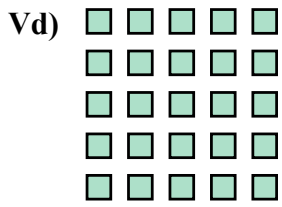
13. \_\_\_\_\_

14. \_\_\_\_\_





Viết mỗi mảng dưới dạng một bài toán cộng và giải quyết.

**Câu trả lời**

Vd.  $5+5+5+5+5=25$

1.  $2+2+2=6$

2.  $2+2+2+2=8$

3.  $3+3=6$

4.  $5+5+5+5=20$

5.  $2+2+2+2+2=10$

6.  $2+2=4$

7.  $4+4+4=12$

8.  $5+5=10$

9.  $3+3+3+3=12$

10.  $4+4+4+4=16$

11.  $4+4+4+4+4=20$

12.  $3+3+3=9$

13.  $5+5+5=15$

14.  $3+3+3+3+3=15$

