



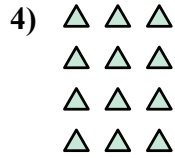



Viết mỗi mảng dưới dạng một bài toán cộng và giải quyết.

Câu trả lời



Vd. 4+4+4=12



1. _____

2. _____


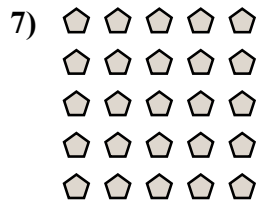
3. _____

4. _____

5. _____

6. _____

7. _____

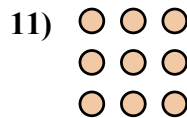

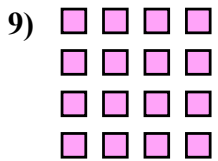


8. _____

9. _____

10. _____

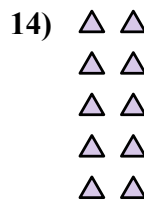
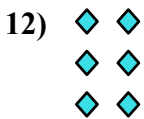
11. _____



12. _____



13. _____

14. _____





Viết mỗi mảng dưới dạng một bài toán cộng và giải quyết.



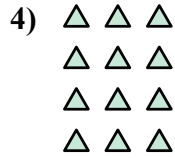

Câu trả lời

Vd. 4+4+4=12

1. 5+5=10

2. 5+5+5=15


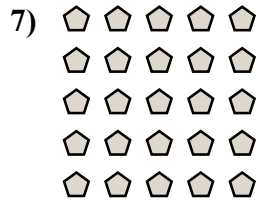
3. 5+5+5+5=20



4. 3+3+3+3=12

5. 3+3+3+3+3=15

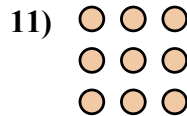

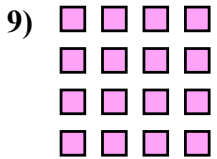
6. 3+3=6



7. 5+5+5+5+5=25

8. 2+2=4

9. 4+4+4+4=16

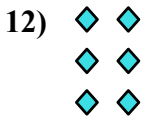


10. 2+2+2+2=8

11. 3+3+3=9

12. 2+2+2=6

13. 4+4=8



14. 2+2+2+2+2=10