



Vẽ một vòng tròn tại các tọa độ được liệt kê.

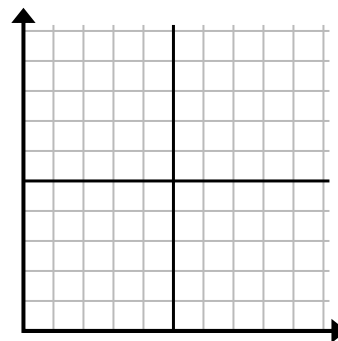
1) (4 . 5)



2) (8 . 10)



3) (6 . 0)



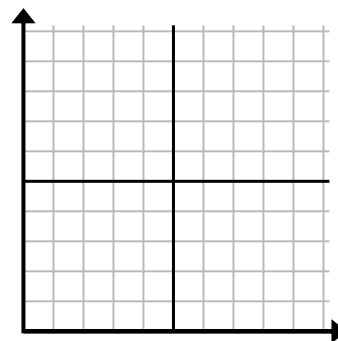
4) (0 . 1)



5) (0 . 6)



6) (3 . 8)



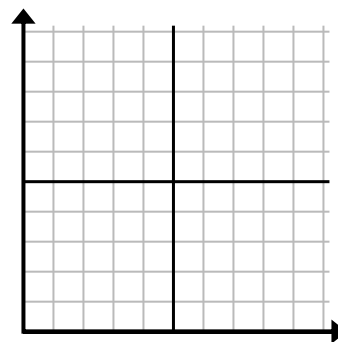
7) (2 . 3)



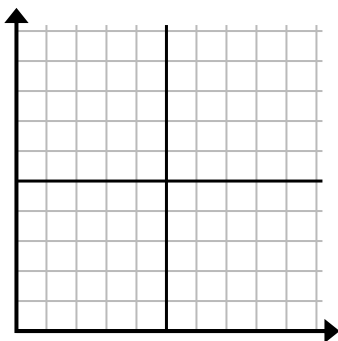
8) (9 . 9)



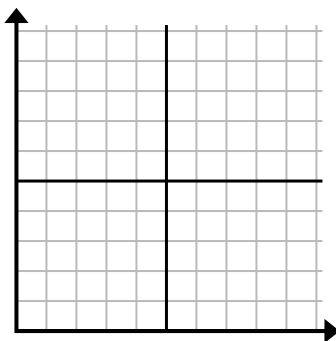
9) (1 . 9)



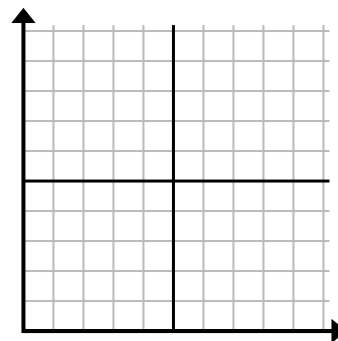
10) (3 . 0)



11) (0 . 0)



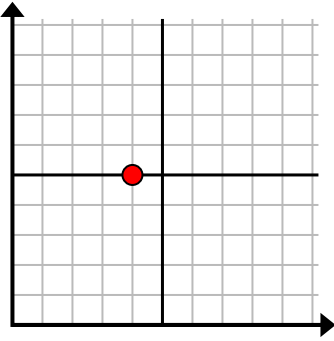
12) (0 . 10)



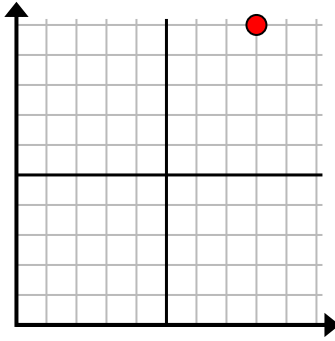


Vẽ một vòng tròn tại các tọa độ được liệt kê.

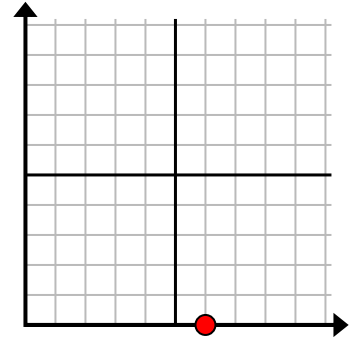
1) (4 . 5)



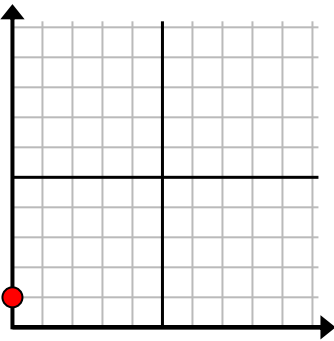
2) (8 . 10)



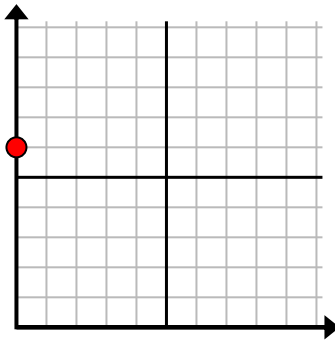
3) (6 . 0)



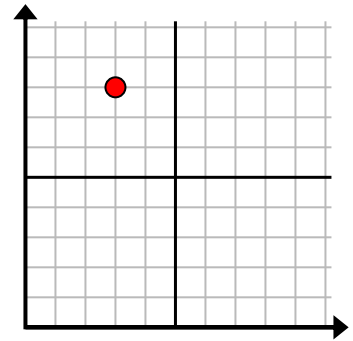
4) (0 . 1)



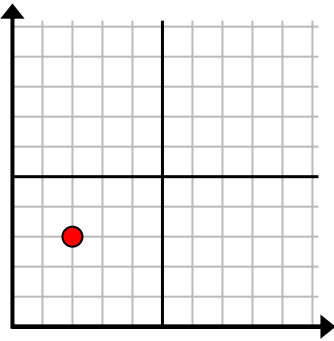
5) (0 . 6)



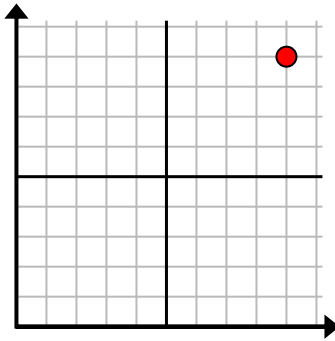
6) (3 . 8)



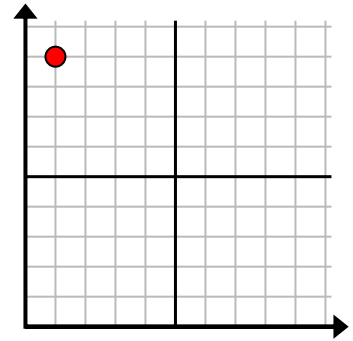
7) (2 . 3)



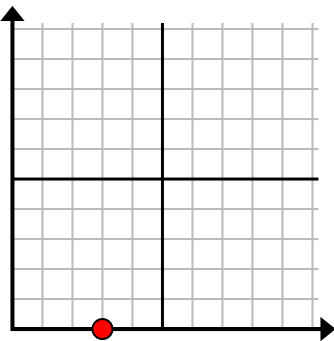
8) (9 . 9)



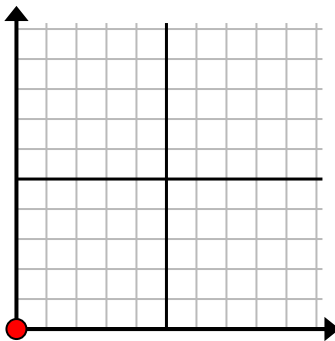
9) (1 . 9)



10) (3 . 0)



11) (0 . 0)



12) (0 . 10)

