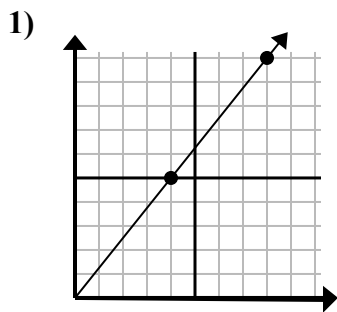


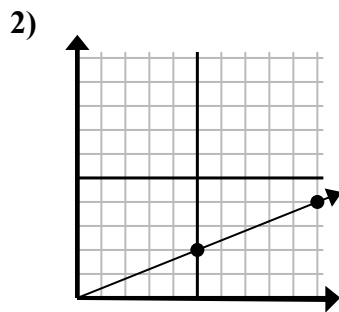


Xác định lựa chọn đại diện cho một điểm trên đường thẳng nếu nó được tiếp tục.

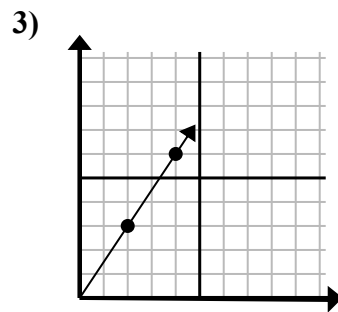
Câu trả lời



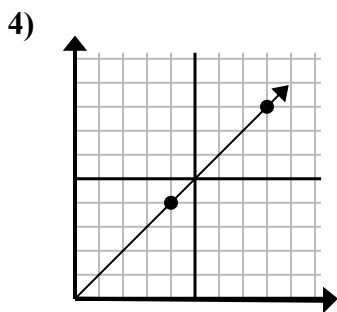
- A. (11 . 10)
- B. (10 . 7)
- C. (12 . 15)
- D. (16 . 20)



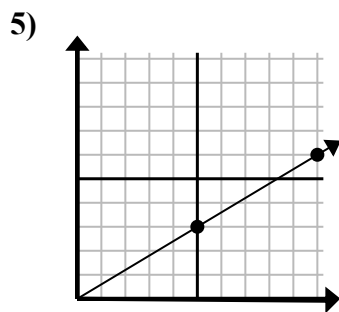
- A. (30 . 12)
- B. (11 . 6)
- C. (25 . 10)
- D. (15 . 6)



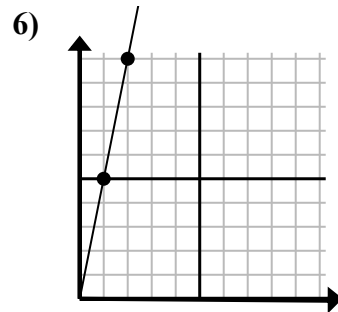
- A. (8 . 12)
- B. (10 . 15)
- C. (6 . 9)
- D. (12 . 18)



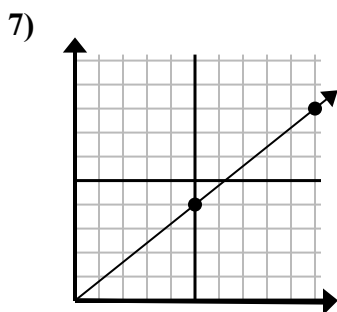
- A. (13 . 8)
- B. (28 . 28)
- C. (12 . 12)
- D. (11 . 6)



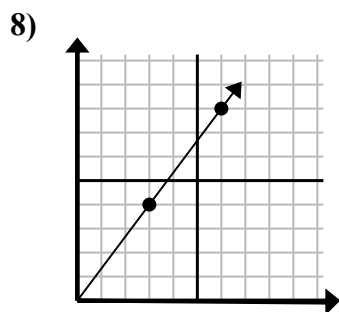
- A. (11 . 6)
- B. (25 . 15)
- C. (15 . 9)
- D. (30 . 18)



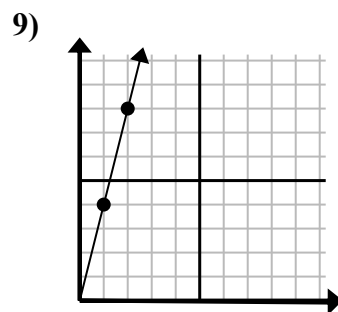
- A. (7 . 35)
- B. (4 . 20)
- C. (5 . 9)
- D. (3 . 15)



- A. (15 . 12)
- B. (35 . 28)
- C. (25 . 20)
- D. (11 . 7)



- A. (10 . 6)
- B. (9 . 12)
- C. (21 . 28)
- D. (15 . 20)



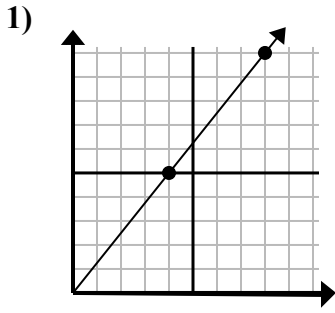
- A. (3 . 12)
- B. (6 . 24)
- C. (4 . 16)
- D. (4 . 7)

1. _____
2. _____
3. _____
4. _____
5. _____
6. _____
7. _____
8. _____
9. _____

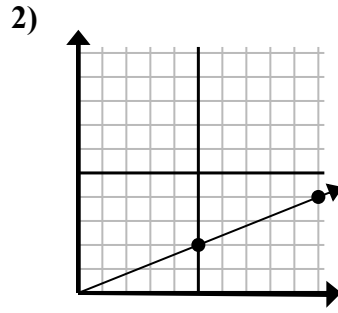


Xác định lựa chọn đại diện cho một điểm trên đường thẳng nếu nó được tiếp tục.

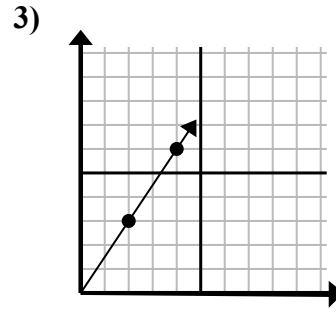
Câu trả lời



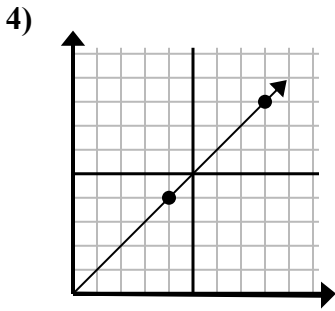
- A. (11 . 10)
- B. (10 . 7)
- C. (12 . 15)
- D. (16 . 20)



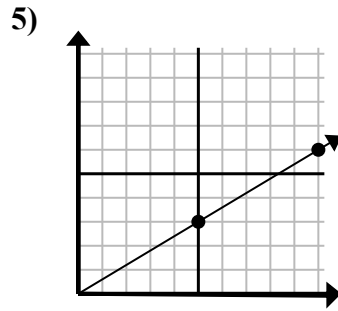
- A. (30 . 12)
- B. (11 . 6)
- C. (25 . 10)
- D. (15 . 6)



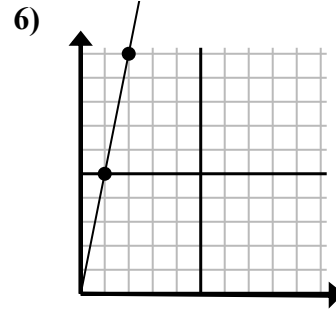
- A. (8 . 12)
- B. (10 . 15)
- C. (6 . 9)
- D. (12 . 18)



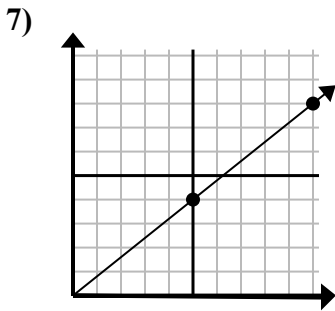
- A. (13 . 8)
- B. (28 . 28)
- C. (12 . 12)
- D. (11 . 6)



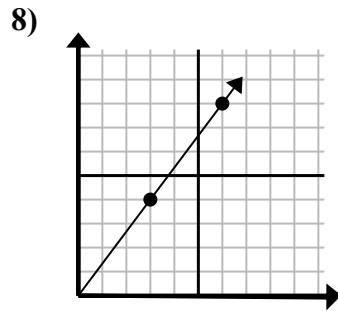
- A. (11 . 6)
- B. (25 . 15)
- C. (15 . 9)
- D. (30 . 18)



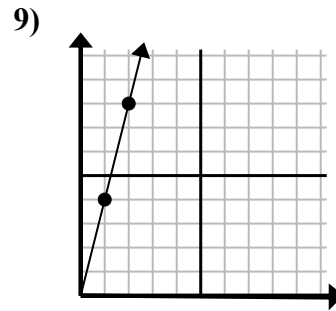
- A. (7 . 35)
- B. (4 . 20)
- C. (5 . 9)
- D. (3 . 15)



- A. (15 . 12)
- B. (35 . 28)
- C. (25 . 20)
- D. (11 . 7)



- A. (10 . 6)
- B. (9 . 12)
- C. (21 . 28)
- D. (15 . 20)



- A. (3 . 12)
- B. (6 . 24)
- C. (4 . 16)
- D. (4 . 7)

- 1. **C**
- 2. **D**
- 3. **C**
- 4. **C**
- 5. **C**
- 6. **D**
- 7. **A**
- 8. **B**
- 9. **A**