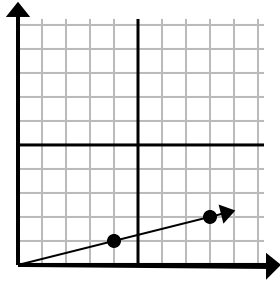




Xác định lựa chọn đại diện cho một điểm trên đường thẳng nếu nó được tiếp tục.

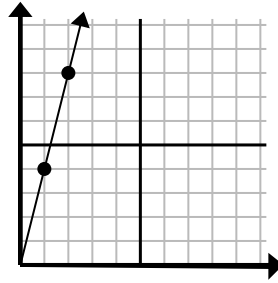
Câu trả lời

1)



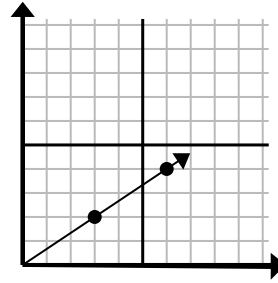
- A. (10 . 4)
B. (13 . 5)
C. (12 . 3)
D. (9 . 3)

2)



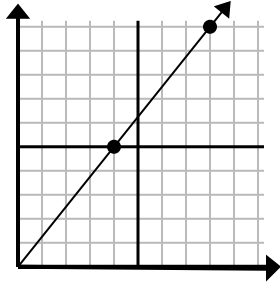
- A. (3 . 9)
B. (7 . 8)
C. (5 . 5)
D. (3 . 12)

3)



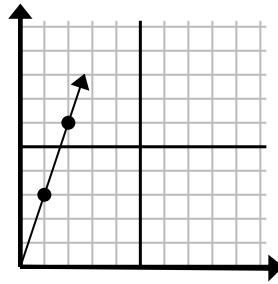
- A. (12 . 8)
B. (9 . 6)
C. (18 . 12)
D. (11 . 3)

4)



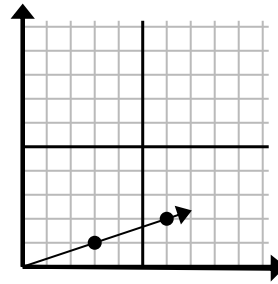
- A. (9 . 9)
B. (12 . 15)
C. (12 . 7)
D. (28 . 35)

5)



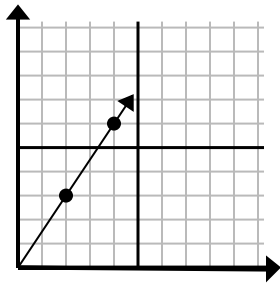
- A. (3 . 9)
B. (4 . 12)
C. (3 . 5)
D. (7 . 4)

6)



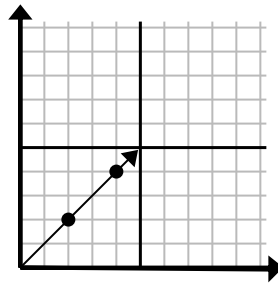
- A. (9 . 3)
B. (11 . 4)
C. (11 . 5)
D. (15 . 5)

7)



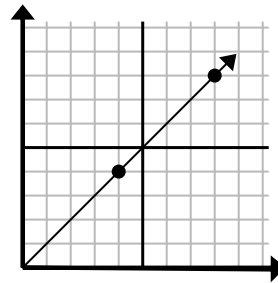
- A. (8 . 7)
B. (6 . 4)
C. (6 . 9)
D. (12 . 18)

8)



- A. (6 . 6)
B. (8 . 8)
C. (10 . 10)
D. (14 . 14)

9)



- A. (24 . 24)
B. (12 . 12)
C. (28 . 28)
D. (20 . 20)

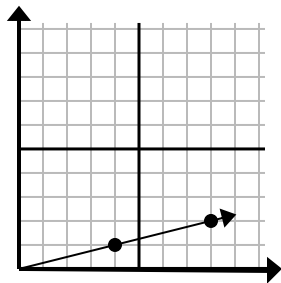
1. _____
2. _____
3. _____
4. _____
5. _____
6. _____
7. _____
8. _____
9. _____



Xác định lựa chọn đại diện cho một điểm trên đường thẳng nếu nó được tiếp tục.

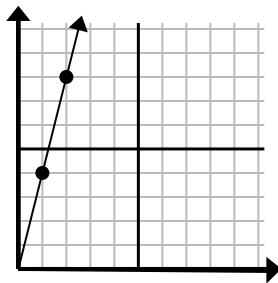
Câu trả lời

1)



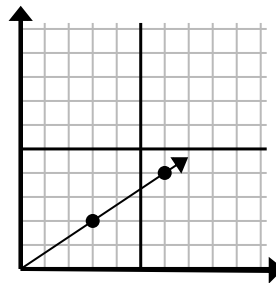
- A. (10 . 4)
B. (13 . 5)
C. (12 . 3)
D. (9 . 3)

2)



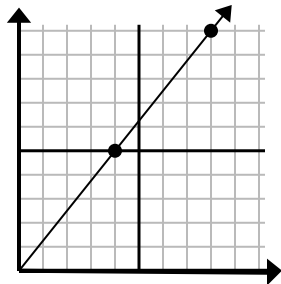
- A. (3 . 9)
B. (7 . 8)
C. (5 . 5)
D. (3 . 12)

3)



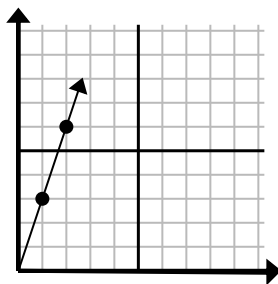
- A. (12 . 8)
B. (9 . 6)
C. (18 . 12)
D. (11 . 3)

4)



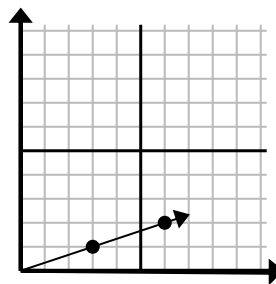
- A. (9 . 9)
B. (12 . 15)
C. (12 . 7)
D. (28 . 35)

5)



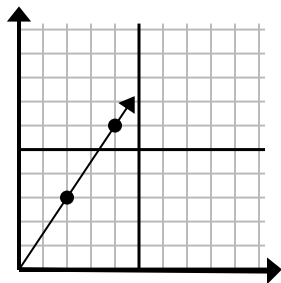
- A. (3 . 9)
B. (4 . 12)
C. (3 . 5)
D. (7 . 4)

6)



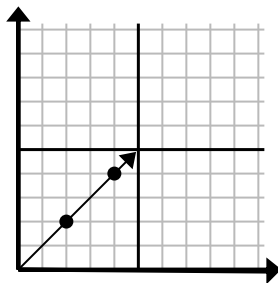
- A. (9 . 3)
B. (11 . 4)
C. (11 . 5)
D. (15 . 5)

7)



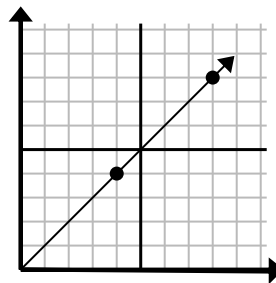
- A. (8 . 7)
B. (6 . 4)
C. (6 . 9)
D. (12 . 18)

8)



- A. (6 . 6)
B. (8 . 8)
C. (10 . 10)
D. (14 . 14)

9)



- A. (24 . 24)
B. (12 . 12)
C. (28 . 28)
D. (20 . 20)

1. **C**
2. **D**
3. **B**
4. **B**
5. **A**
6. **A**
7. **C**
8. **A**
9. **B**