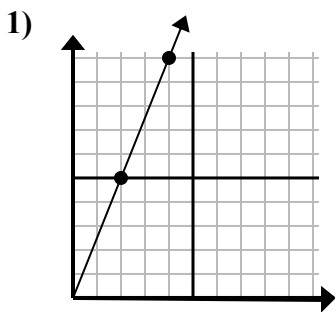


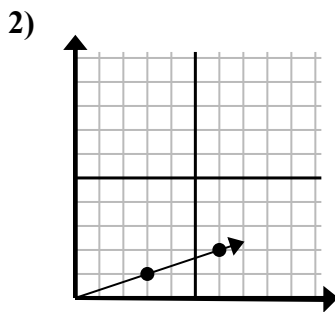


Xác định lựa chọn đại diện cho một điểm trên đường thẳng nếu nó được tiếp tục.

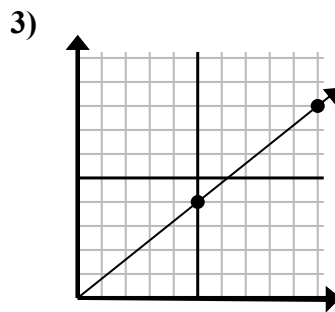
Câu trả lời



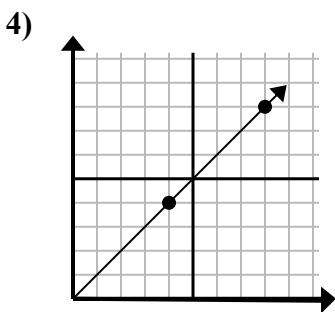
- A. (12 . 30)
- B. (8 . 20)
- C. (8 . 10)
- D. (6 . 15)



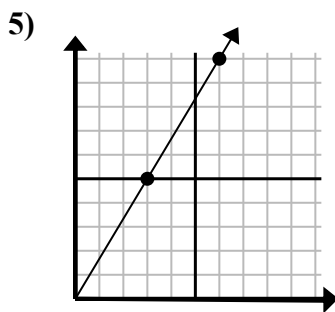
- A. (9 . 3)
- B. (10 . 6)
- C. (15 . 5)
- D. (18 . 6)



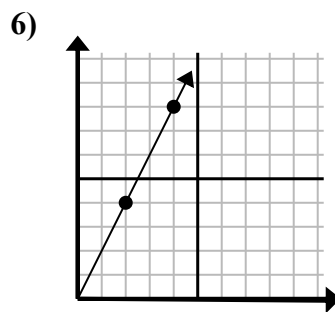
- A. (11 . 9)
- B. (15 . 12)
- C. (20 . 16)
- D. (25 . 20)



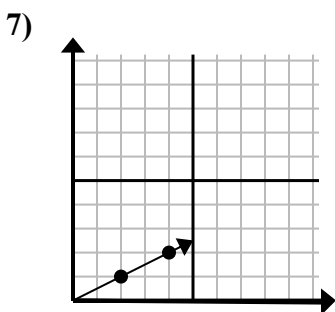
- A. (16 . 16)
- B. (12 . 12)
- C. (13 . 5)
- D. (28 . 28)



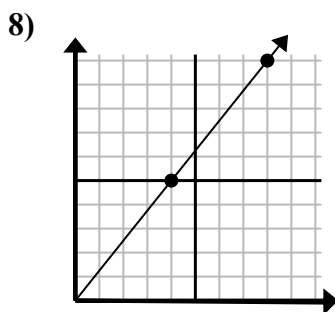
- A. (8 . 10)
- B. (15 . 25)
- C. (7 . 6)
- D. (9 . 15)



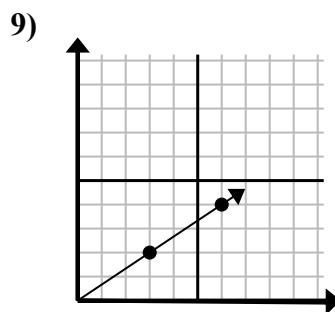
- A. (6 . 5)
- B. (6 . 12)
- C. (12 . 24)
- D. (8 . 16)



- A. (9 . 2)
- B. (6 . 3)
- C. (14 . 7)
- D. (7 . 4)



- A. (9 . 10)
- B. (12 . 15)
- C. (20 . 25)
- D. (24 . 30)



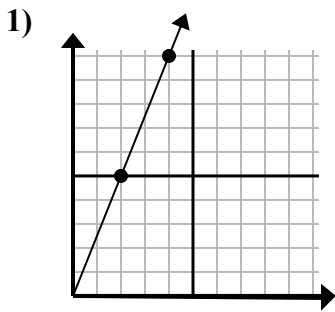
- A. (18 . 12)
- B. (8 . 7)
- C. (11 . 5)
- D. (9 . 6)

1. _____
2. _____
3. _____
4. _____
5. _____
6. _____
7. _____
8. _____
9. _____

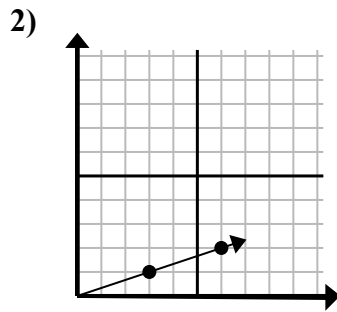


Xác định lựa chọn đại diện cho một điểm trên đường thẳng nếu nó được tiếp tục.

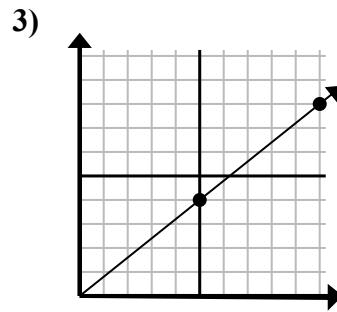
Câu trả lời



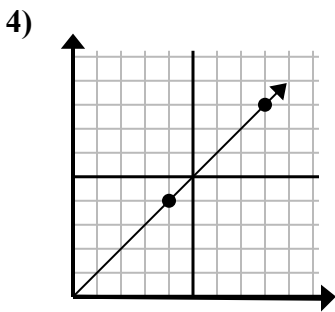
- A. (12 . 30)
- B. (8 . 20)
- C. (8 . 10)
- D. (6 . 15)



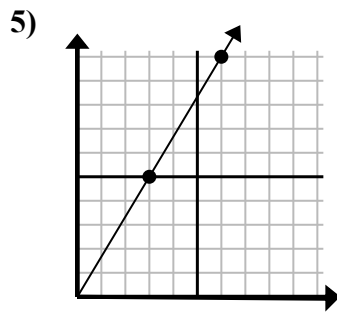
- A. (9 . 3)
- B. (10 . 6)
- C. (15 . 5)
- D. (18 . 6)



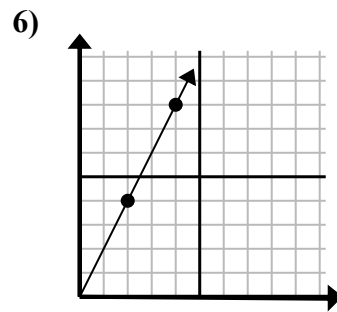
- A. (11 . 9)
- B. (15 . 12)
- C. (20 . 16)
- D. (25 . 20)



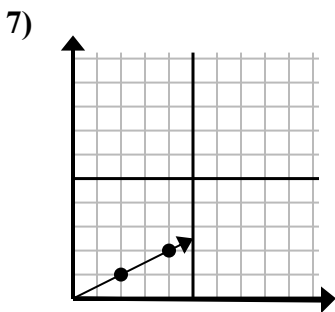
- A. (16 . 16)
- B. (12 . 12)
- C. (13 . 5)
- D. (28 . 28)



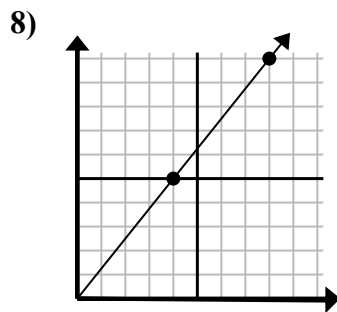
- A. (8 . 10)
- B. (15 . 25)
- C. (7 . 6)
- D. (9 . 15)



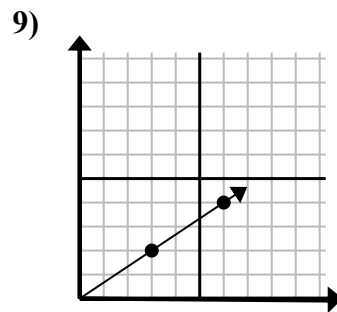
- A. (6 . 5)
- B. (6 . 12)
- C. (12 . 24)
- D. (8 . 16)



- A. (9 . 2)
- B. (6 . 3)
- C. (14 . 7)
- D. (7 . 4)



- A. (9 . 10)
- B. (12 . 15)
- C. (20 . 25)
- D. (24 . 30)



- A. (18 . 12)
- B. (8 . 7)
- C. (11 . 5)
- D. (9 . 6)

- 1. **D**
- 2. **A**
- 3. **B**
- 4. **B**
- 5. **D**
- 6. **B**
- 7. **B**
- 8. **B**
- 9. **D**