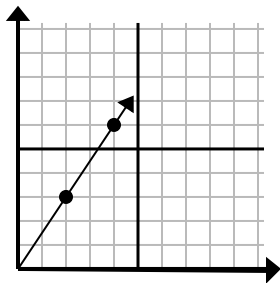




Xác định lựa chọn đại diện cho một điểm trên đường thẳng nếu nó được tiếp tục.

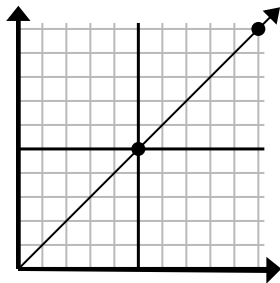
**Câu trả lời**

1)



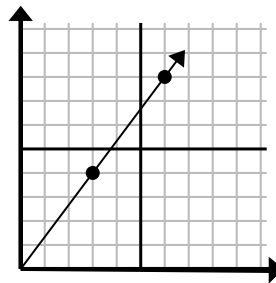
- A. (6 . 9)
- B. (5 . 4)
- C. (12 . 18)
- D. (14 . 21)

2)



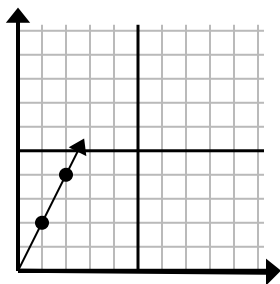
- A. (30 . 30)
- B. (15 . 15)
- C. (15 . 7)
- D. (20 . 20)

3)



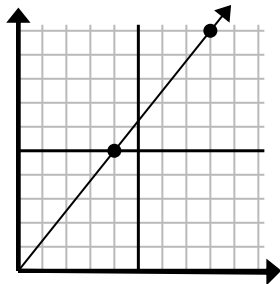
- A. (8 . 5)
- B. (12 . 16)
- C. (9 . 12)
- D. (11 . 6)

4)



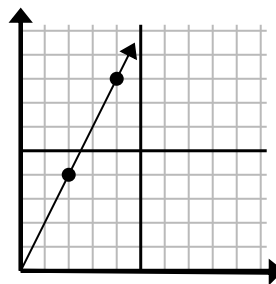
- A. (3 . 6)
- B. (4 . 8)
- C. (6 . 12)
- D. (7 . 14)

5)



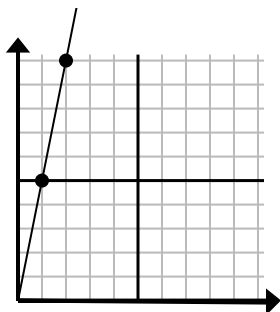
- A. (16 . 20)
- B. (13 . 10)
- C. (28 . 35)
- D. (12 . 15)

6)



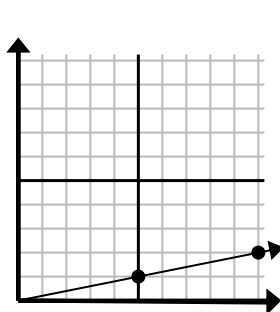
- A. (14 . 28)
- B. (7 . 8)
- C. (10 . 20)
- D. (6 . 12)

7)



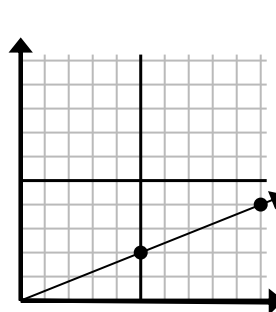
- A. (5 . 8)
- B. (7 . 35)
- C. (3 . 15)
- D. (6 . 30)

8)



- A. (25 . 5)
- B. (15 . 3)
- C. (35 . 7)
- D. (11 . 4)

9)



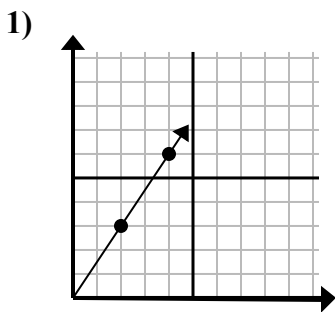
- A. (20 . 8)
- B. (14 . 6)
- C. (15 . 6)
- D. (25 . 10)

1. \_\_\_\_\_
2. \_\_\_\_\_
3. \_\_\_\_\_
4. \_\_\_\_\_
5. \_\_\_\_\_
6. \_\_\_\_\_
7. \_\_\_\_\_
8. \_\_\_\_\_
9. \_\_\_\_\_

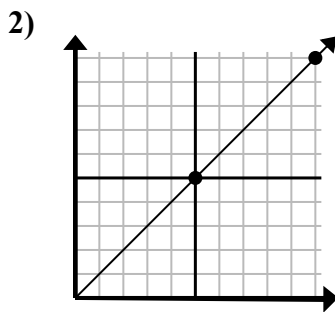


Xác định lựa chọn đại diện cho một điểm trên đường thẳng nếu nó được tiếp tục.

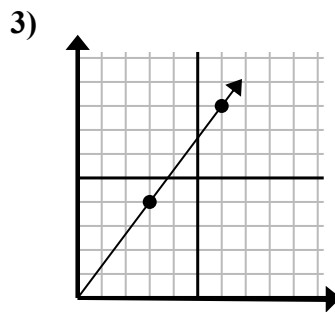
**Câu trả lời**



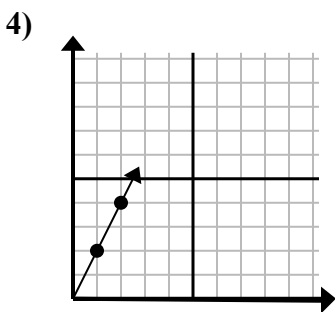
- A. (6 . 9)
- B. (5 . 4)
- C. (12 . 18)
- D. (14 . 21)



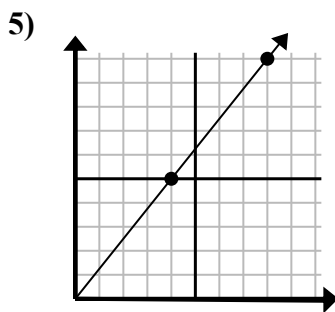
- A. (30 . 30)
- B. (15 . 15)
- C. (15 . 7)
- D. (20 . 20)



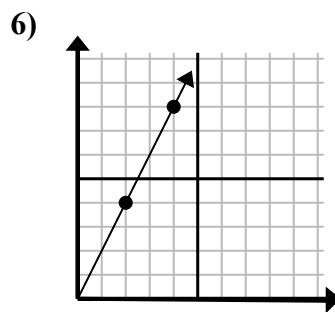
- A. (8 . 5)
- B. (12 . 16)
- C. (9 . 12)
- D. (11 . 6)



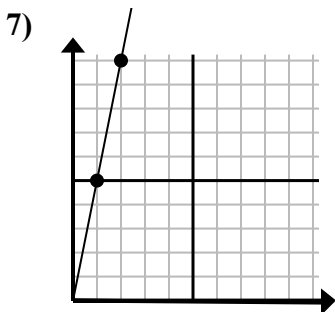
- A. (3 . 6)
- B. (4 . 8)
- C. (6 . 12)
- D. (7 . 14)



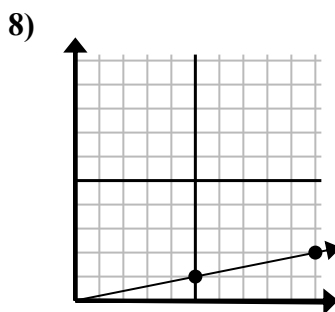
- A. (16 . 20)
- B. (13 . 10)
- C. (28 . 35)
- D. (12 . 15)



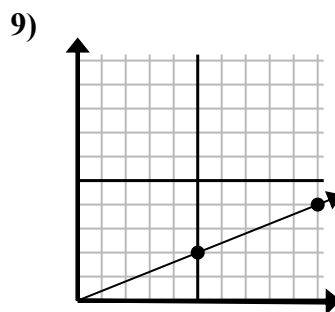
- A. (14 . 28)
- B. (7 . 8)
- C. (10 . 20)
- D. (6 . 12)



- A. (5 . 8)
- B. (7 . 35)
- C. (3 . 15)
- D. (6 . 30)



- A. (25 . 5)
- B. (15 . 3)
- C. (35 . 7)
- D. (11 . 4)



- A. (20 . 8)
- B. (14 . 6)
- C. (15 . 6)
- D. (25 . 10)

- 1. **A**
- 2. **B**
- 3. **C**
- 4. **A**
- 5. **D**
- 6. **D**
- 7. **C**
- 8. **B**
- 9. **C**