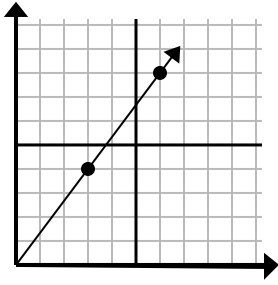




Xác định lựa chọn đại diện cho một điểm trên đường thẳng nếu nó được tiếp tục.

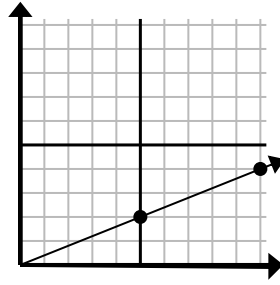
Câu trả lời

1)



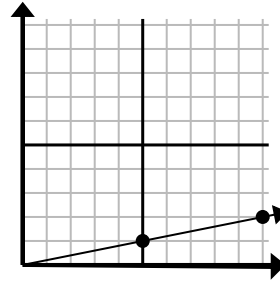
- A. (18 . 24)
- B. (15 . 20)
- C. (9 . 12)
- D. (9 . 5)

2)



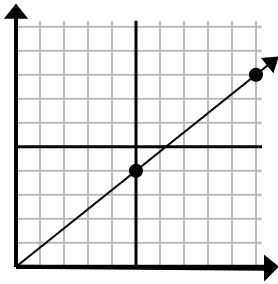
- A. (11 . 7)
- B. (25 . 10)
- C. (30 . 12)
- D. (15 . 6)

3)



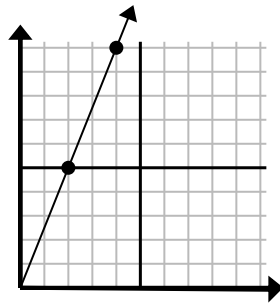
- A. (15 . 3)
- B. (20 . 4)
- C. (30 . 6)
- D. (12 . 6)

4)



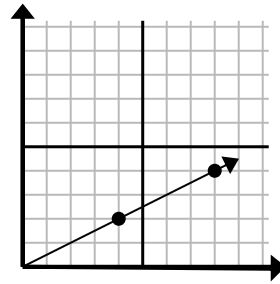
- A. (13 . 5)
- B. (15 . 12)
- C. (30 . 24)
- D. (11 . 6)

5)



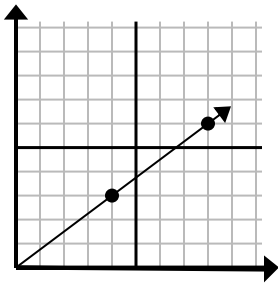
- A. (8 . 20)
- B. (7 . 6)
- C. (6 . 15)
- D. (10 . 25)

6)



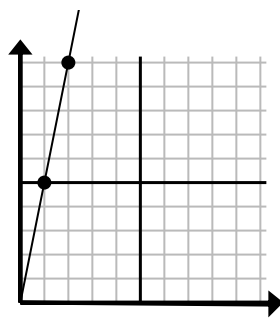
- A. (24 . 12)
- B. (28 . 14)
- C. (12 . 6)
- D. (10 . 4)

7)



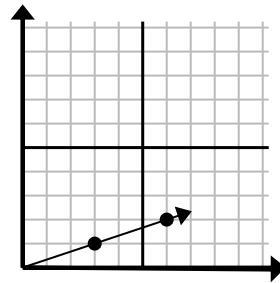
- A. (12 . 9)
- B. (24 . 18)
- C. (12 . 4)
- D. (16 . 12)

8)



- A. (6 . 8)
- B. (3 . 15)
- C. (7 . 7)
- D. (6 . 30)

9)



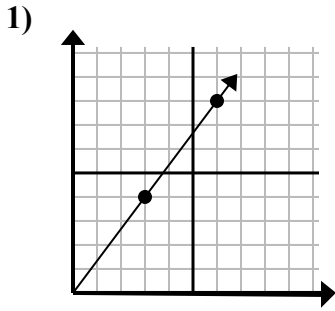
- A. (9 . 3)
- B. (8 . 6)
- C. (7 . 2)
- D. (18 . 6)

1. _____
2. _____
3. _____
4. _____
5. _____
6. _____
7. _____
8. _____
9. _____

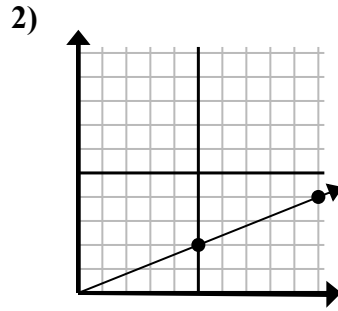


Xác định lựa chọn đại diện cho một điểm trên đường thẳng nếu nó được tiếp tục.

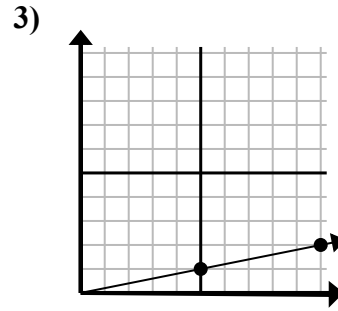
Câu trả lời



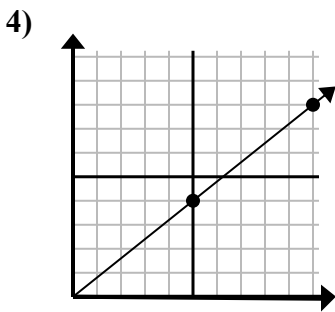
- A. (18 . 24)
- B. (15 . 20)
- C. (9 . 12)
- D. (9 . 5)



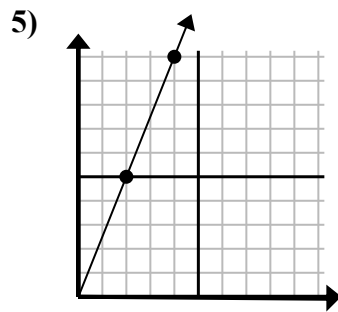
- A. (11 . 7)
- B. (25 . 10)
- C. (30 . 12)
- D. (15 . 6)



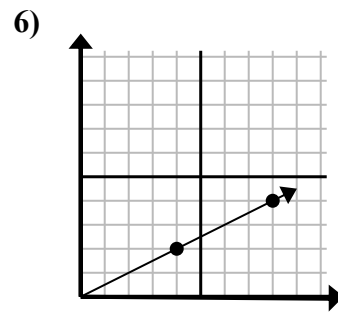
- A. (15 . 3)
- B. (20 . 4)
- C. (30 . 6)
- D. (12 . 6)



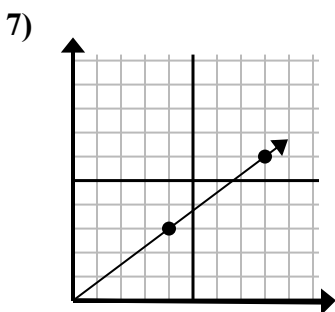
- A. (13 . 5)
- B. (15 . 12)
- C. (30 . 24)
- D. (11 . 6)



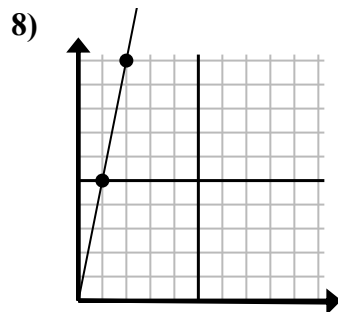
- A. (8 . 20)
- B. (7 . 6)
- C. (6 . 15)
- D. (10 . 25)



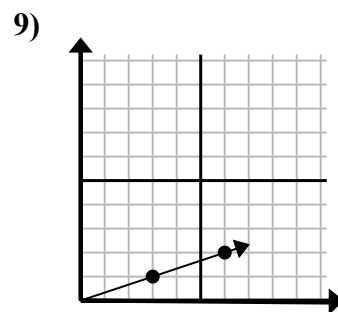
- A. (24 . 12)
- B. (28 . 14)
- C. (12 . 6)
- D. (10 . 4)



- A. (12 . 9)
- B. (24 . 18)
- C. (12 . 4)
- D. (16 . 12)



- A. (6 . 8)
- B. (3 . 15)
- C. (7 . 7)
- D. (6 . 30)



- A. (9 . 3)
- B. (8 . 6)
- C. (7 . 2)
- D. (18 . 6)

- 1. **C**
- 2. **D**
- 3. **A**
- 4. **B**
- 5. **C**
- 6. **C**
- 7. **A**
- 8. **B**
- 9. **A**