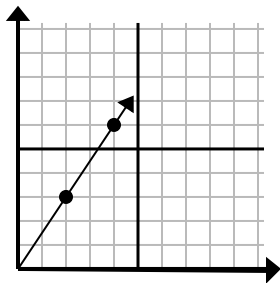




Xác định lựa chọn đại diện cho một điểm trên đường thẳng nếu nó được tiếp tục.

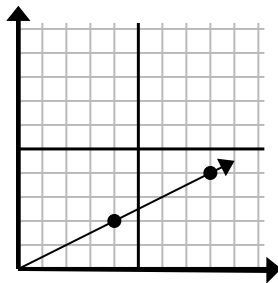
Câu trả lời

1)



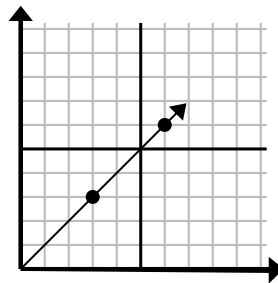
- A. (6 . 9)
- B. (8 . 6)
- C. (5 . 8)
- D. (5 . 5)

2)



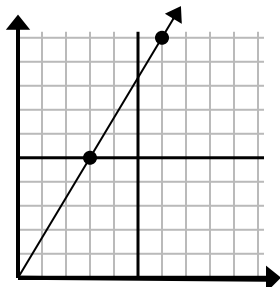
- A. (12 . 7)
- B. (12 . 6)
- C. (24 . 12)
- D. (20 . 10)

3)



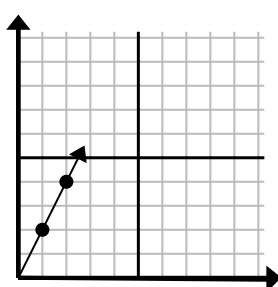
- A. (11 . 5)
- B. (9 . 9)
- C. (18 . 18)
- D. (11 . 8)

4)



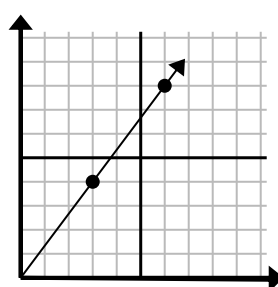
- A. (8 . 9)
- B. (12 . 20)
- C. (9 . 15)
- D. (11 . 6)

5)



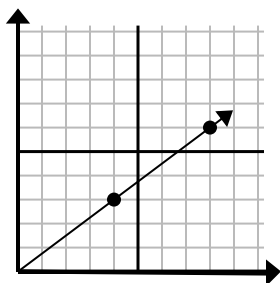
- A. (7 . 14)
- B. (7 . 7)
- C. (3 . 6)
- D. (6 . 12)

6)



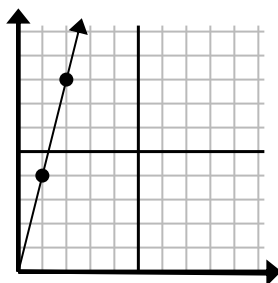
- A. (18 . 24)
- B. (21 . 28)
- C. (9 . 12)
- D. (11 . 9)

7)



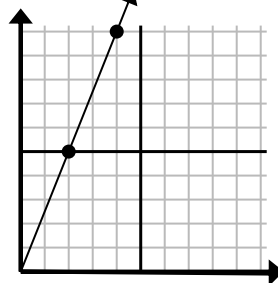
- A. (12 . 9)
- B. (28 . 21)
- C. (24 . 18)
- D. (11 . 8)

8)



- A. (3 . 12)
- B. (4 . 6)
- C. (4 . 16)
- D. (7 . 28)

9)



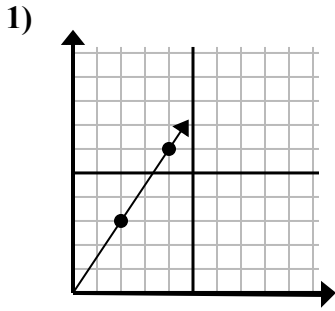
- A. (8 . 20)
- B. (14 . 35)
- C. (5 . 9)
- D. (6 . 15)

1. _____
2. _____
3. _____
4. _____
5. _____
6. _____
7. _____
8. _____
9. _____

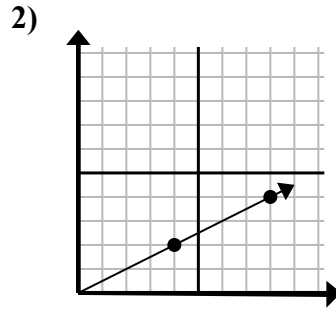


Xác định lựa chọn đại diện cho một điểm trên đường thẳng nếu nó được tiếp tục.

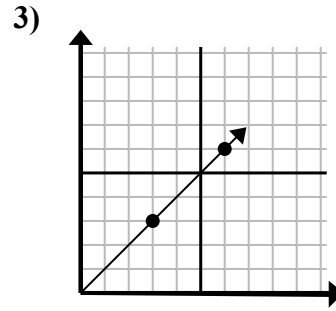
Câu trả lời



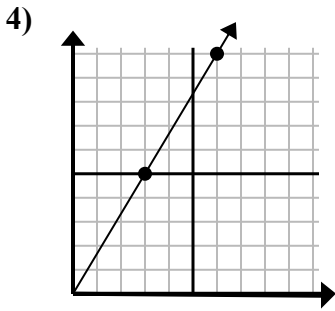
- A. (6 . 9)
- B. (8 . 6)
- C. (5 . 8)
- D. (5 . 5)



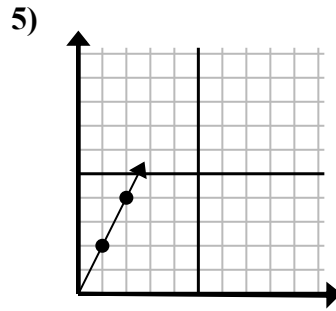
- A. (12 . 7)
- B. (12 . 6)
- C. (24 . 12)
- D. (20 . 10)



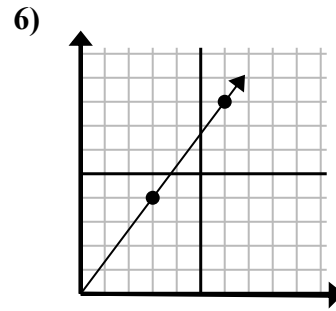
- A. (11 . 5)
- B. (9 . 9)
- C. (18 . 18)
- D. (11 . 8)



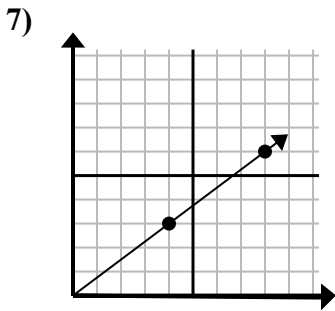
- A. (8 . 9)
- B. (12 . 20)
- C. (9 . 15)
- D. (11 . 6)



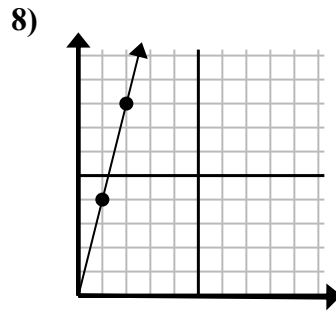
- A. (7 . 14)
- B. (7 . 7)
- C. (3 . 6)
- D. (6 . 12)



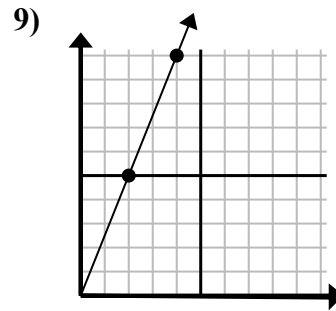
- A. (18 . 24)
- B. (21 . 28)
- C. (9 . 12)
- D. (11 . 9)



- A. (12 . 9)
- B. (28 . 21)
- C. (24 . 18)
- D. (11 . 8)



- A. (3 . 12)
- B. (4 . 6)
- C. (4 . 16)
- D. (7 . 28)



- A. (8 . 20)
- B. (14 . 35)
- C. (5 . 9)
- D. (6 . 15)

1. **A**
2. **B**
3. **B**
4. **C**
5. **C**
6. **C**
7. **A**
8. **A**
9. **D**