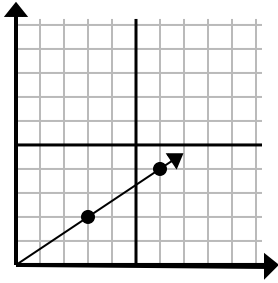




Xác định lựa chọn đại diện cho một điểm trên đường thẳng nếu nó được tiếp tục.

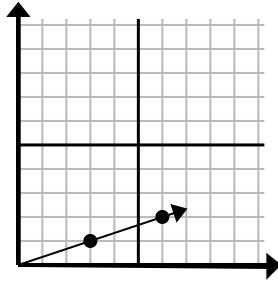
Câu trả lời

1)



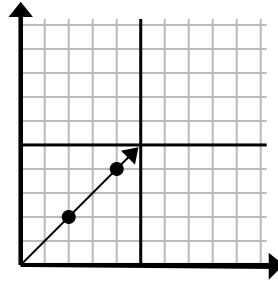
- A. (21 . 14)
- B. (12 . 8)
- C. (9 . 6)
- D. (15 . 10)

2)



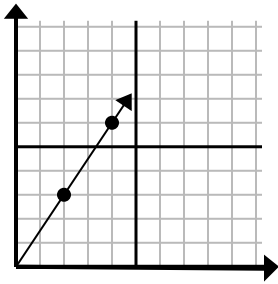
- A. (18 . 6)
- B. (12 . 4)
- C. (9 . 3)
- D. (10 . 3)

3)



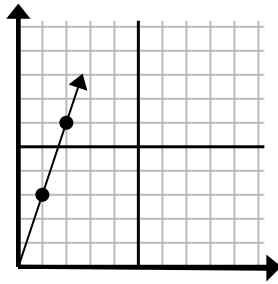
- A. (6 . 6)
- B. (12 . 12)
- C. (7 . 7)
- D. (8 . 4)

4)



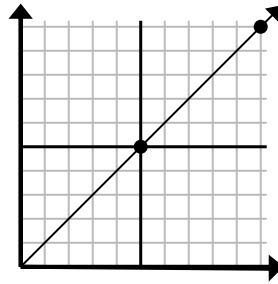
- A. (6 . 9)
- B. (14 . 21)
- C. (7 . 5)
- D. (8 . 7)

5)



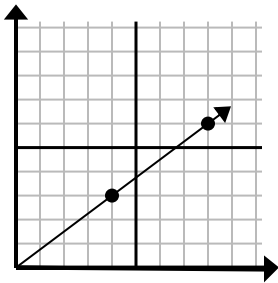
- A. (5 . 4)
- B. (4 . 8)
- C. (7 . 21)
- D. (3 . 9)

6)



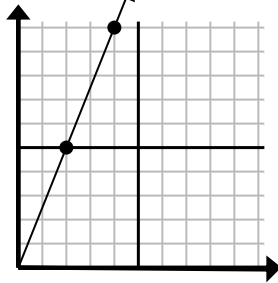
- A. (15 . 6)
- B. (30 . 30)
- C. (15 . 15)
- D. (35 . 35)

7)



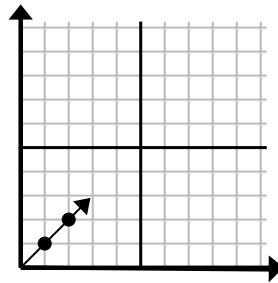
- A. (10 . 5)
- B. (10 . 6)
- C. (12 . 9)
- D. (28 . 21)

8)



- A. (12 . 30)
- B. (8 . 20)
- C. (6 . 15)
- D. (8 . 6)

9)



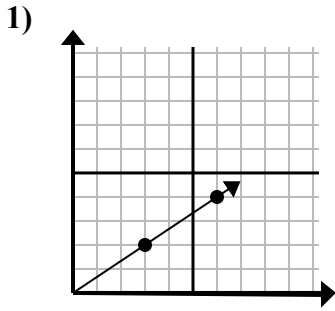
- A. (3 . 3)
- B. (3 . 2)
- C. (6 . 6)
- D. (6 . 3)

1. _____
2. _____
3. _____
4. _____
5. _____
6. _____
7. _____
8. _____
9. _____

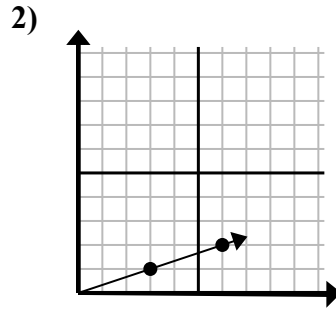


Xác định lựa chọn đại diện cho một điểm trên đường thẳng nếu nó được tiếp tục.

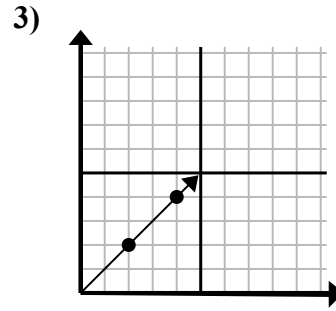
Câu trả lời



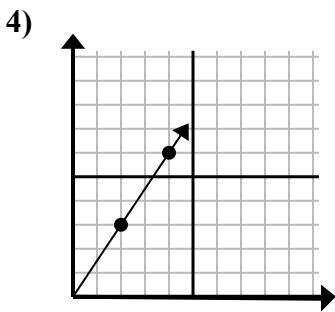
- A. (21 . 14)
- B. (12 . 8)
- C. (9 . 6)
- D. (15 . 10)



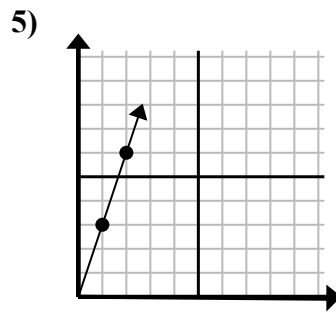
- A. (18 . 6)
- B. (12 . 4)
- C. (9 . 3)
- D. (10 . 3)



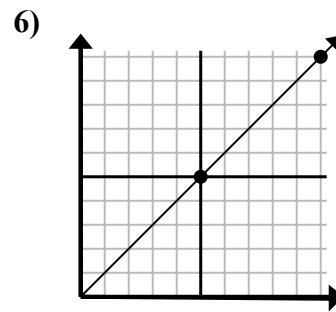
- A. (6 . 6)
- B. (12 . 12)
- C. (7 . 7)
- D. (8 . 4)



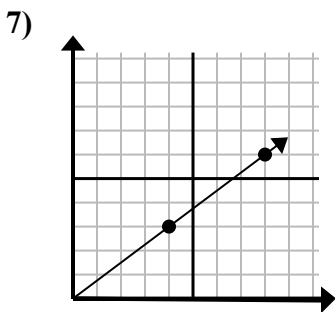
- A. (6 . 9)
- B. (14 . 21)
- C. (7 . 5)
- D. (8 . 7)



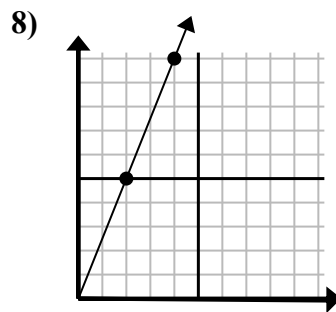
- A. (5 . 4)
- B. (4 . 8)
- C. (7 . 21)
- D. (3 . 9)



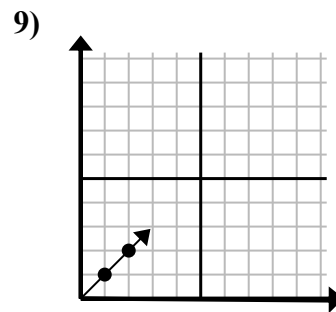
- A. (15 . 6)
- B. (30 . 30)
- C. (15 . 15)
- D. (35 . 35)



- A. (10 . 5)
- B. (10 . 6)
- C. (12 . 9)
- D. (28 . 21)



- A. (12 . 30)
- B. (8 . 20)
- C. (6 . 15)
- D. (8 . 6)



- A. (3 . 3)
- B. (3 . 2)
- C. (6 . 6)
- D. (6 . 3)

- 1. **C**
- 2. **C**
- 3. **A**
- 4. **A**
- 5. **D**
- 6. **C**
- 7. **C**
- 8. **C**
- 9. **A**