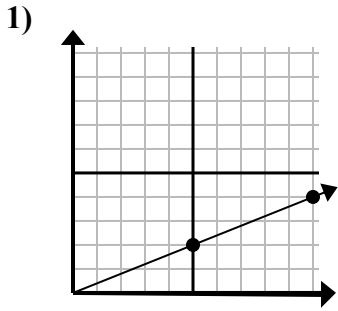


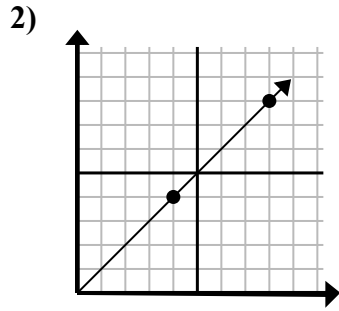


Xác định lựa chọn đại diện cho một điểm trên đường thẳng nếu nó được tiếp tục.

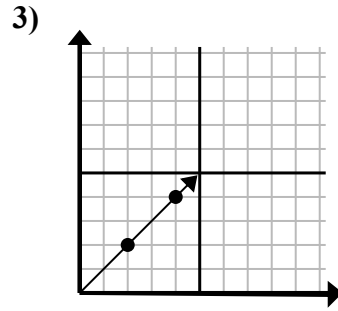
Câu trả lời



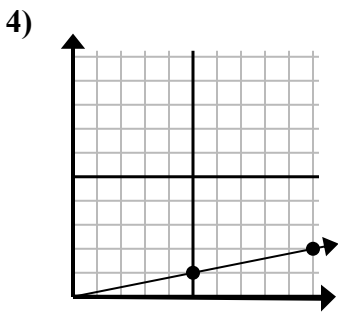
- A. (15 . 6)
- B. (25 . 10)
- C. (20 . 8)
- D. (30 . 12)



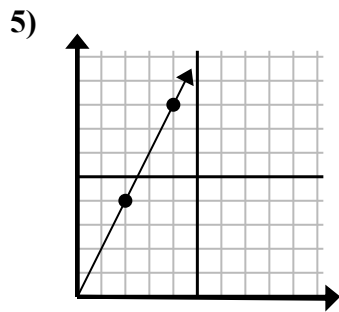
- A. (20 . 20)
- B. (11 . 6)
- C. (12 . 8)
- D. (12 . 12)



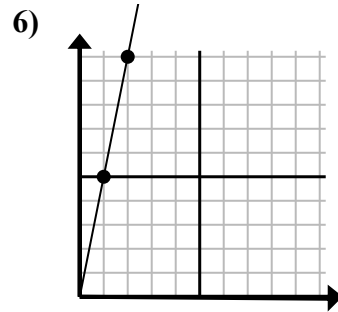
- A. (8 . 6)
- B. (10 . 10)
- C. (6 . 6)
- D. (14 . 14)



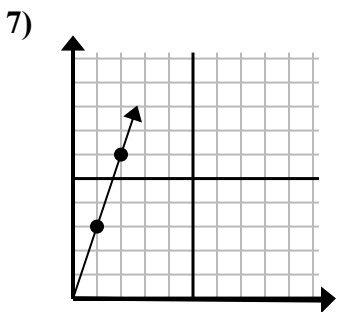
- A. (30 . 6)
- B. (14 . 5)
- C. (15 . 3)
- D. (14 . 3)



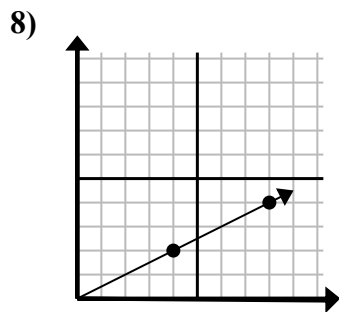
- A. (12 . 24)
- B. (6 . 12)
- C. (9 . 6)
- D. (7 . 7)



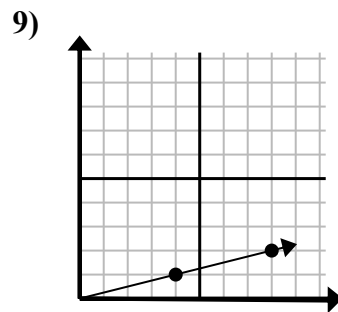
- A. (5 . 25)
- B. (6 . 7)
- C. (3 . 15)
- D. (4 . 8)



- A. (6 . 5)
- B. (6 . 18)
- C. (3 . 9)
- D. (7 . 21)



- A. (20 . 10)
- B. (28 . 14)
- C. (13 . 7)
- D. (12 . 6)



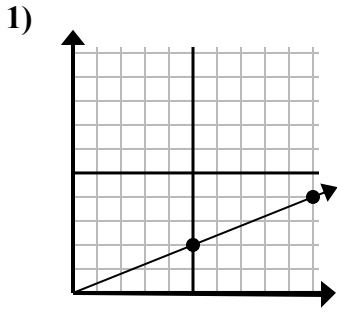
- A. (16 . 4)
- B. (24 . 6)
- C. (28 . 7)
- D. (12 . 3)

1. _____
2. _____
3. _____
4. _____
5. _____
6. _____
7. _____
8. _____
9. _____

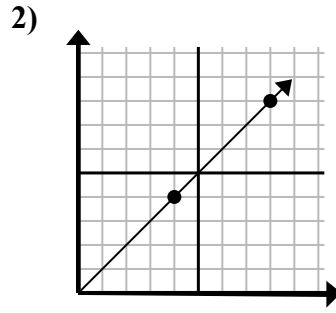


Xác định lựa chọn đại diện cho một điểm trên đường thẳng nếu nó được tiếp tục.

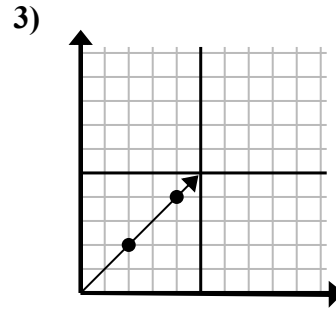
Câu trả lời



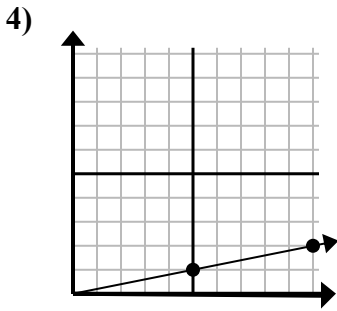
- A. (15 . 6)
- B. (25 . 10)
- C. (20 . 8)
- D. (30 . 12)



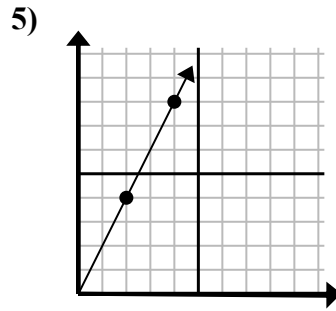
- A. (20 . 20)
- B. (11 . 6)
- C. (12 . 8)
- D. (12 . 12)



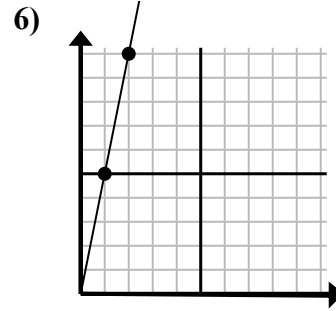
- A. (8 . 6)
- B. (10 . 10)
- C. (6 . 6)
- D. (14 . 14)



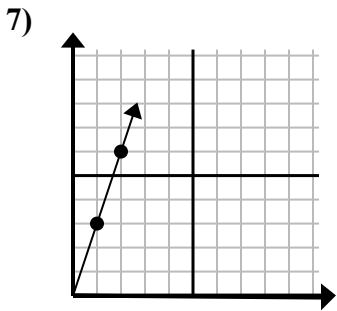
- A. (30 . 6)
- B. (14 . 5)
- C. (15 . 3)
- D. (14 . 3)



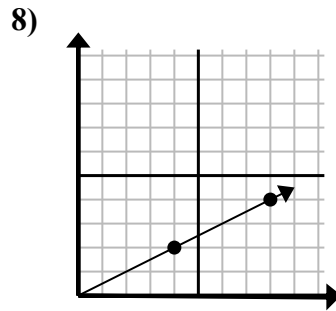
- A. (12 . 24)
- B. (6 . 12)
- C. (9 . 6)
- D. (7 . 7)



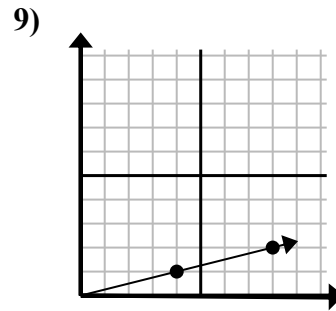
- A. (5 . 25)
- B. (6 . 7)
- C. (3 . 15)
- D. (4 . 8)



- A. (6 . 5)
- B. (6 . 18)
- C. (3 . 9)
- D. (7 . 21)



- A. (20 . 10)
- B. (28 . 14)
- C. (13 . 7)
- D. (12 . 6)



- A. (16 . 4)
- B. (24 . 6)
- C. (28 . 7)
- D. (12 . 3)

- 1. **A**
- 2. **D**
- 3. **C**
- 4. **C**
- 5. **B**
- 6. **C**
- 7. **C**
- 8. **D**
- 9. **D**