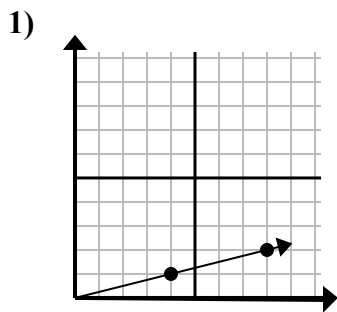


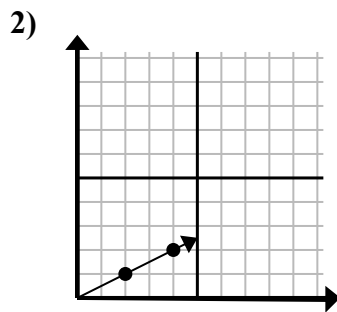


Xác định lựa chọn đại diện cho một điểm trên đường thẳng nếu nó được tiếp tục.

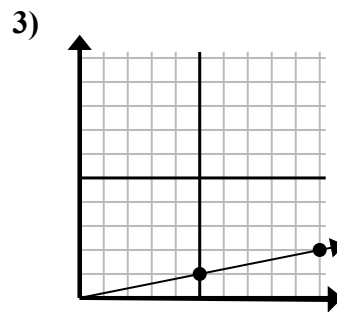
Câu trả lời



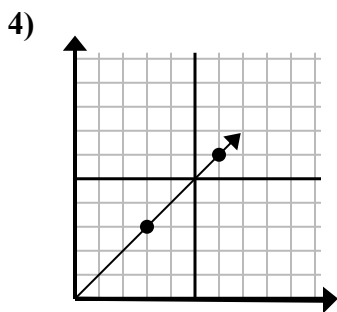
- A. (12 . 3)
- B. (28 . 7)
- C. (20 . 5)
- D. (10 . 2)



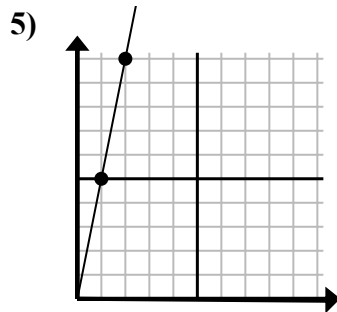
- A. (6 . 3)
- B. (10 . 5)
- C. (14 . 7)
- D. (7 . 3)



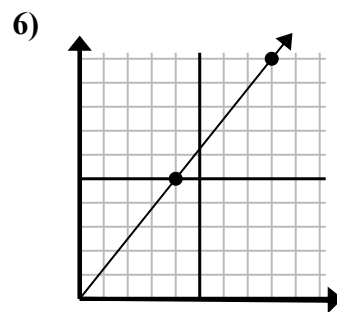
- A. (14 . 3)
- B. (13 . 5)
- C. (15 . 3)
- D. (35 . 7)



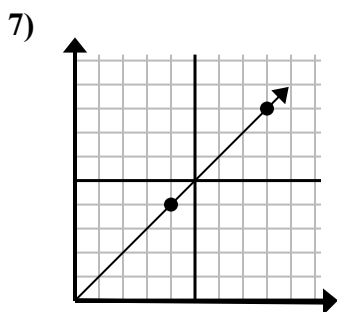
- A. (8 . 7)
- B. (15 . 15)
- C. (9 . 9)
- D. (21 . 21)



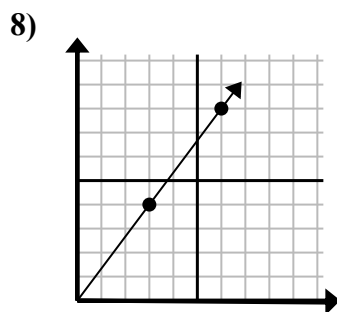
- A. (3 . 15)
- B. (3 . 7)
- C. (7 . 35)
- D. (5 . 25)



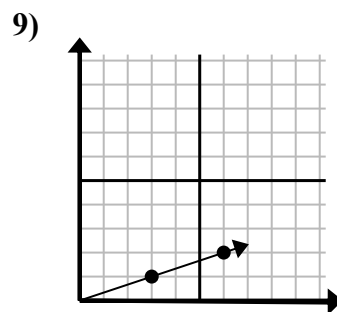
- A. (12 . 10)
- B. (24 . 30)
- C. (13 . 9)
- D. (12 . 15)



- A. (12 . 8)
- B. (12 . 12)
- C. (13 . 8)
- D. (20 . 20)



- A. (21 . 28)
- B. (8 . 6)
- C. (9 . 12)
- D. (9 . 7)



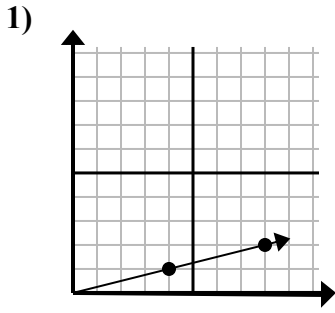
- A. (15 . 5)
- B. (9 . 3)
- C. (10 . 2)
- D. (12 . 4)

1. _____
2. _____
3. _____
4. _____
5. _____
6. _____
7. _____
8. _____
9. _____

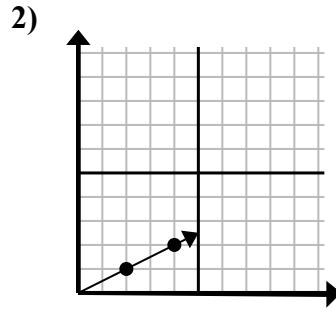


Xác định lựa chọn đại diện cho một điểm trên đường thẳng nếu nó được tiếp tục.

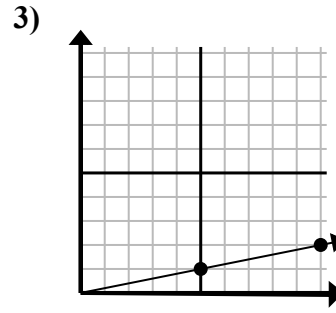
Câu trả lời



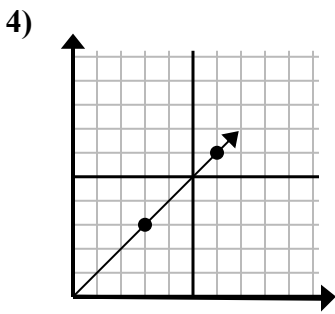
- A. (12 . 3)
- B. (28 . 7)
- C. (20 . 5)
- D. (10 . 2)



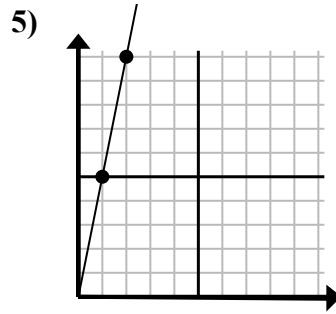
- A. (6 . 3)
- B. (10 . 5)
- C. (14 . 7)
- D. (7 . 3)



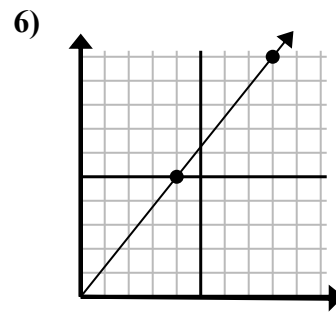
- A. (14 . 3)
- B. (13 . 5)
- C. (15 . 3)
- D. (35 . 7)



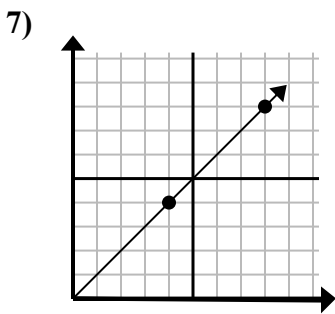
- A. (8 . 7)
- B. (15 . 15)
- C. (9 . 9)
- D. (21 . 21)



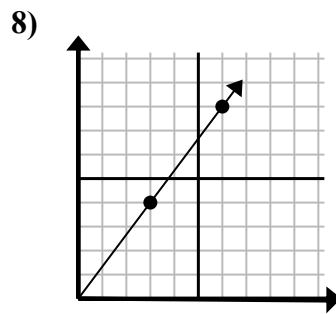
- A. (3 . 15)
- B. (3 . 7)
- C. (7 . 35)
- D. (5 . 25)



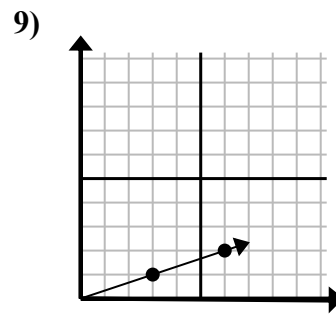
- A. (12 . 10)
- B. (24 . 30)
- C. (13 . 9)
- D. (12 . 15)



- A. (12 . 8)
- B. (12 . 12)
- C. (13 . 8)
- D. (20 . 20)



- A. (21 . 28)
- B. (8 . 6)
- C. (9 . 12)
- D. (9 . 7)



- A. (15 . 5)
- B. (9 . 3)
- C. (10 . 2)
- D. (12 . 4)

- 1. **A**
- 2. **A**
- 3. **C**
- 4. **C**
- 5. **A**
- 6. **D**
- 7. **B**
- 8. **C**
- 9. **B**