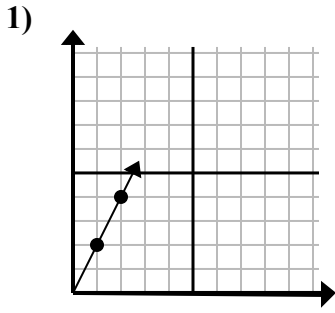


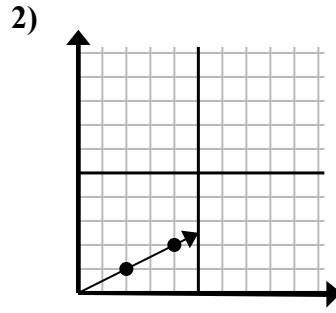


Xác định lựa chọn đại diện cho một điểm trên đường thẳng nếu nó được tiếp tục.

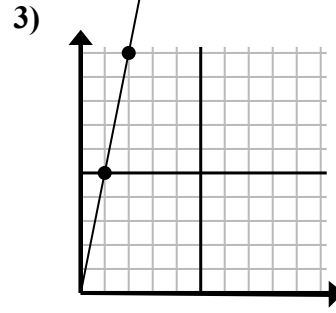
Câu trả lời



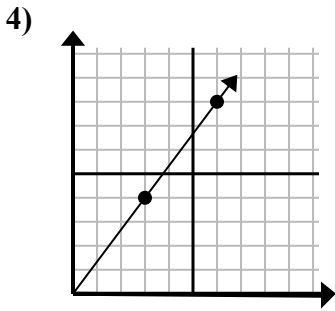
- A. (3 . 6)
- B. (7 . 3)
- C. (6 . 4)
- D. (7 . 14)



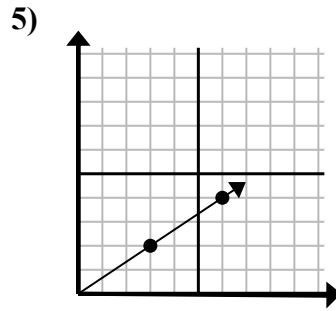
- A. (5 . 6)
- B. (5 . 4)
- C. (6 . 3)
- D. (9 . 6)



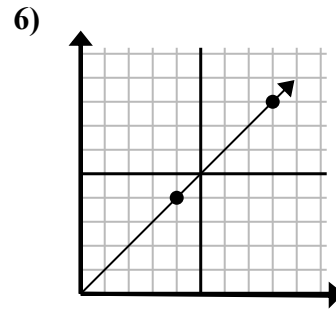
- A. (7 . 10)
- B. (3 . 15)
- C. (6 . 30)
- D. (5 . 8)



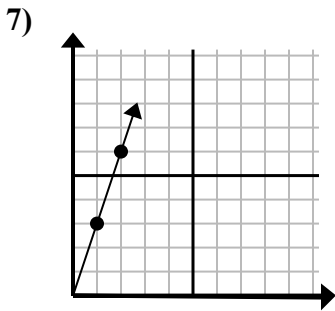
- A. (12 . 16)
- B. (10 . 6)
- C. (21 . 28)
- D. (9 . 12)



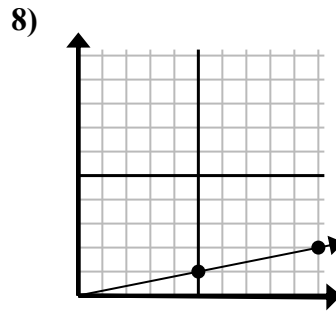
- A. (9 . 4)
- B. (9 . 6)
- C. (15 . 10)
- D. (12 . 8)



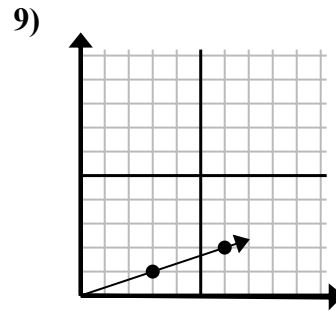
- A. (16 . 16)
- B. (12 . 12)
- C. (9 . 9)
- D. (24 . 24)



- A. (5 . 8)
- B. (5 . 15)
- C. (6 . 18)
- D. (3 . 9)



- A. (11 . 5)
- B. (15 . 2)
- C. (15 . 3)
- D. (14 . 2)



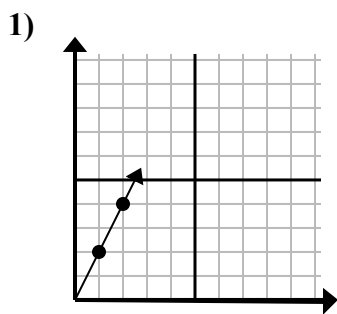
- A. (10 . 6)
- B. (9 . 3)
- C. (8 . 6)
- D. (9 . 2)

1. _____
2. _____
3. _____
4. _____
5. _____
6. _____
7. _____
8. _____
9. _____

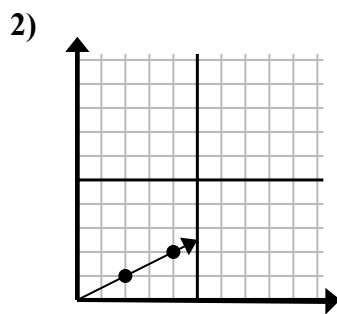


Xác định lựa chọn đại diện cho một điểm trên đường thẳng nếu nó được tiếp tục.

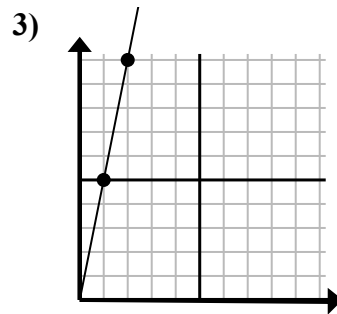
Câu trả lời



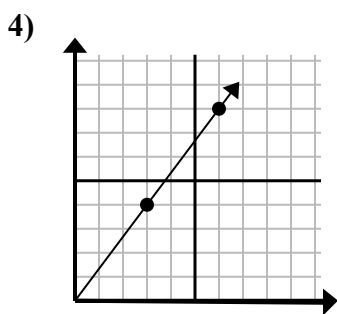
- A. (3 . 6)
- B. (7 . 3)
- C. (6 . 4)
- D. (7 . 14)



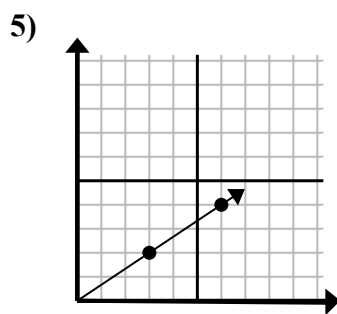
- A. (5 . 6)
- B. (5 . 4)
- C. (6 . 3)
- D. (9 . 6)



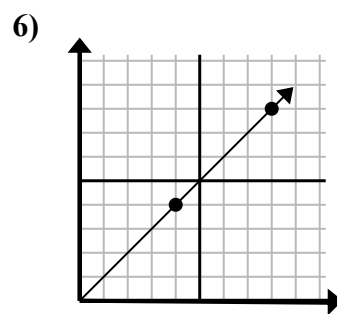
- A. (7 . 10)
- B. (3 . 15)
- C. (6 . 30)
- D. (5 . 8)



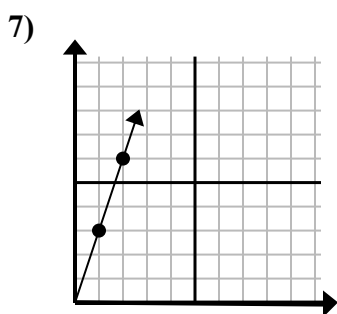
- A. (12 . 16)
- B. (10 . 6)
- C. (21 . 28)
- D. (9 . 12)



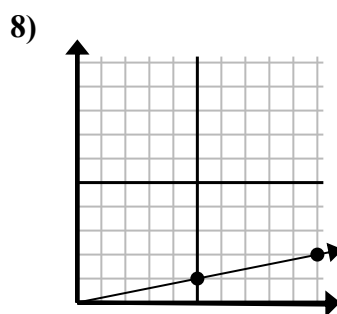
- A. (9 . 4)
- B. (9 . 6)
- C. (15 . 10)
- D. (12 . 8)



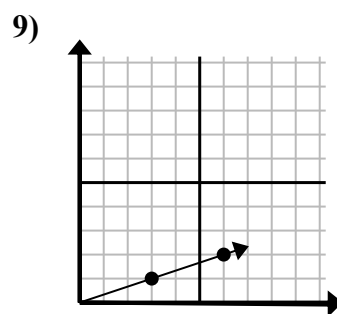
- A. (16 . 16)
- B. (12 . 12)
- C. (9 . 9)
- D. (24 . 24)



- A. (5 . 8)
- B. (5 . 15)
- C. (6 . 18)
- D. (3 . 9)



- A. (11 . 5)
- B. (15 . 2)
- C. (15 . 3)
- D. (14 . 2)



- A. (10 . 6)
- B. (9 . 3)
- C. (8 . 6)
- D. (9 . 2)

- 1. **A**
- 2. **C**
- 3. **B**
- 4. **D**
- 5. **B**
- 6. **B**
- 7. **D**
- 8. **C**
- 9. **B**