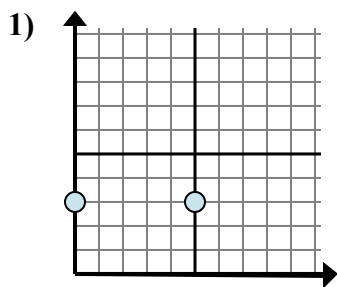


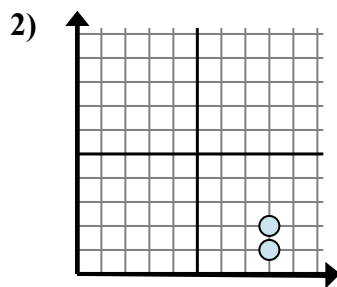


Xác định biểu thức nào thể hiện rõ nhất khoảng cách giữa hai điểm.

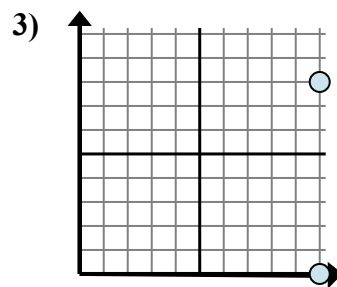
Câu trả lời



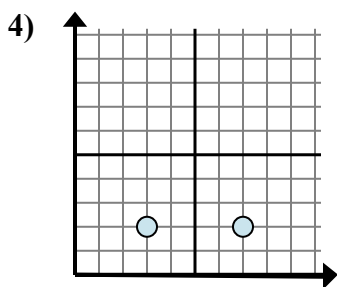
- A. $5 - 0$
- B. $5 - 3$
- C. $3 - 3$
- D. $3 - 5$



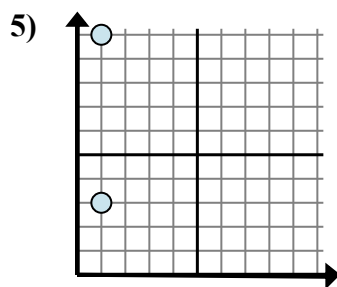
- A. $1 - 2$
- B. $8 - 2$
- C. $8 - 8$
- D. $2 - 1$



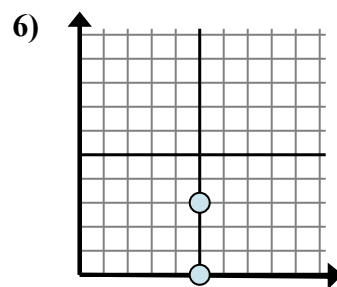
- A. $0 - 8$
- B. $8 - 0$
- C. $8 - 10$
- D. $10 - 8$



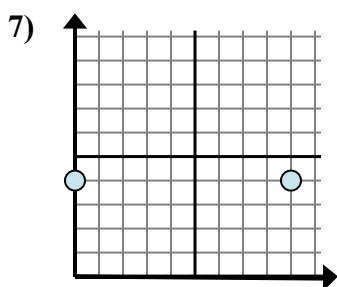
- A. $2 - 3$
- B. $3 - 2$
- C. $2 - 2$
- D. $7 - 3$



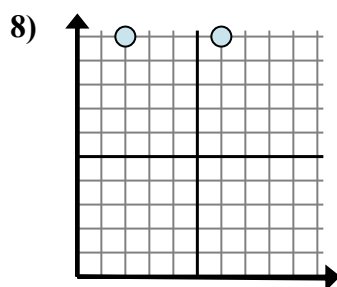
- A. $10 - 1$
- B. $10 - 3$
- C. $3 - 1$
- D. $3 - 10$



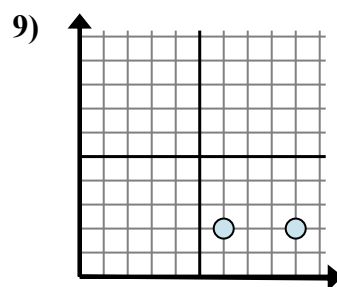
- A. $3 - 5$
- B. $5 - 0$
- C. $3 - 0$
- D. $5 - 0$



- A. $4 - 9$
- B. $0 - 9$
- C. $0 - 4$
- D. $9 - 0$



- A. $2 - 6$
- B. $6 - 2$
- C. $10 - 10$
- D. $10 - 10$



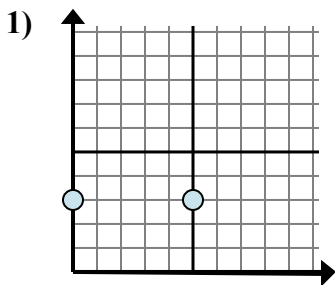
- A. $9 - 2$
- B. $9 - 6$
- C. $6 - 2$
- D. $2 - 6$

1. _____
2. _____
3. _____
4. _____
5. _____
6. _____
7. _____
8. _____
9. _____

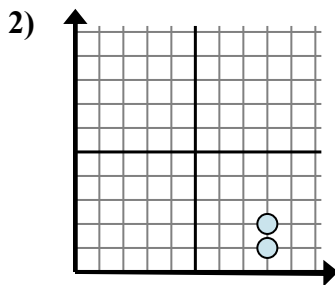


Xác định biểu thức nào thể hiện rõ nhất khoảng cách giữa hai điểm.

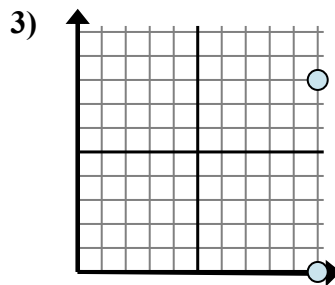
Câu trả lời



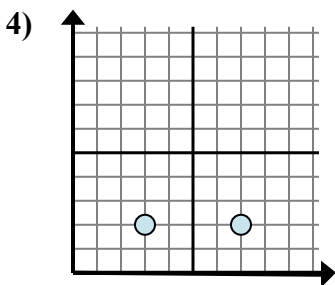
- A. $5 - 0$
- B. $5 - 3$
- C. $3 - 3$
- D. $3 - 5$



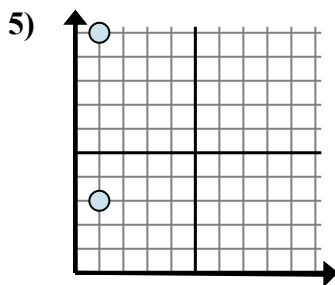
- A. $1 - 2$
- B. $8 - 2$
- C. $8 - 8$
- D. $2 - 1$



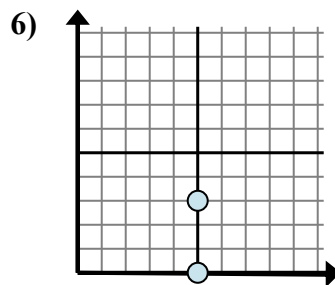
- A. $0 - 8$
- B. $8 - 0$
- C. $8 - 10$
- D. $10 - 8$



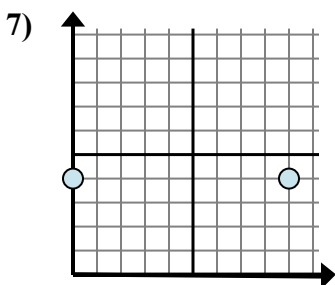
- A. $2 - 3$
- B. $3 - 2$
- C. $2 - 2$
- D. $7 - 3$



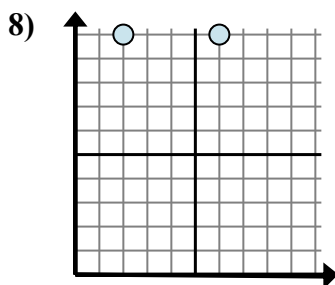
- A. $10 - 1$
- B. $10 - 3$
- C. $3 - 1$
- D. $3 - 10$



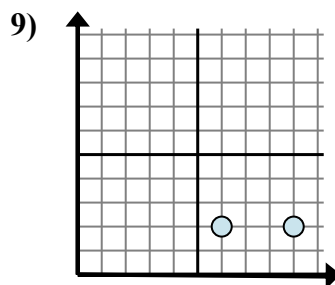
- A. $3 - 5$
- B. $5 - 0$
- C. $3 - 0$
- D. $5 - 0$



- A. $4 - 9$
- B. $0 - 9$
- C. $0 - 4$
- D. $9 - 0$



- A. $2 - 6$
- B. $6 - 2$
- C. $10 - 10$
- D. $10 - 10$



- A. $9 - 2$
- B. $9 - 6$
- C. $6 - 2$
- D. $2 - 6$

1. **A**

2. **D**

3. **B**

4. **D**

5. **B**

6. **C**

7. **D**

8. **B**

9. **B**