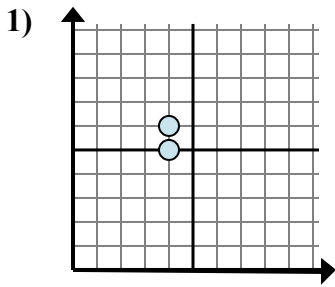


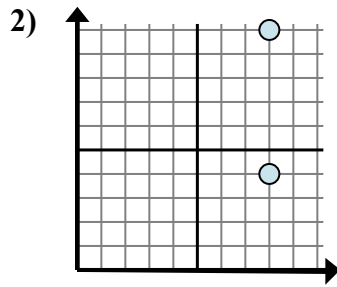


Xác định biểu thức nào thể hiện rõ nhất khoảng cách giữa hai điểm.

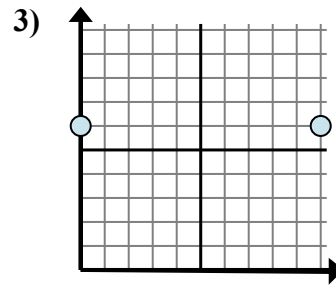
**Câu trả lời**



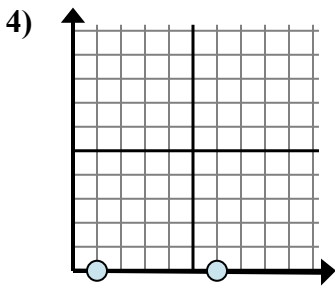
- A.  $6 - 5$
- B.  $4 - 4$
- C.  $5 - 6$
- D.  $6 - 4$



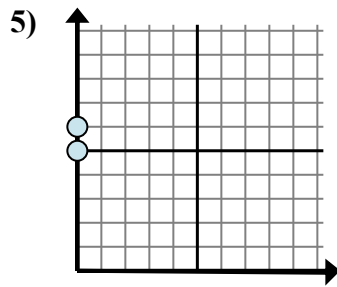
- A.  $4 - 10$
- B.  $8 - 8$
- C.  $8 - 10$
- D.  $10 - 4$



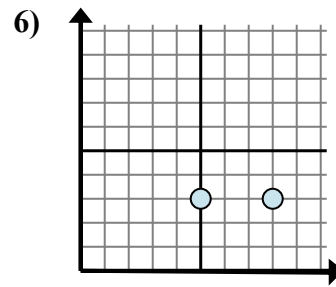
- A.  $10 - 0$
- B.  $0 - 10$
- C.  $6 - 0$
- D.  $6 - 0$



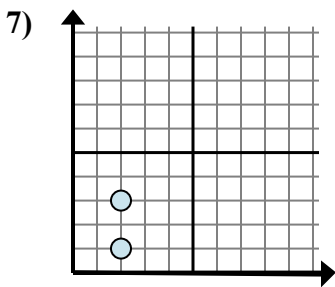
- A.  $0 - 0$
- B.  $0 - 0$
- C.  $0 - 1$
- D.  $6 - 1$



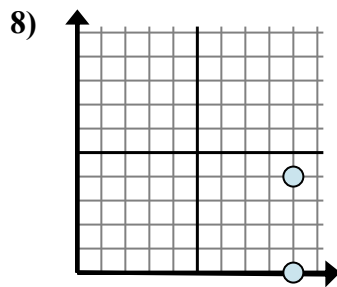
- A.  $0 - 6$
- B.  $0 - 0$
- C.  $6 - 5$
- D.  $6 - 0$



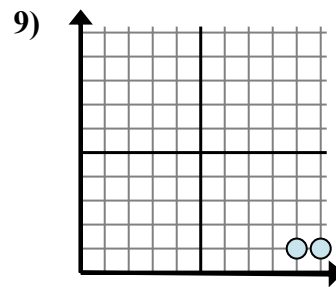
- A.  $3 - 8$
- B.  $8 - 3$
- C.  $3 - 3$
- D.  $8 - 5$



- A.  $2 - 2$
- B.  $3 - 2$
- C.  $3 - 1$
- D.  $2 - 3$



- A.  $0 - 4$
- B.  $9 - 4$
- C.  $4 - 0$
- D.  $9 - 9$



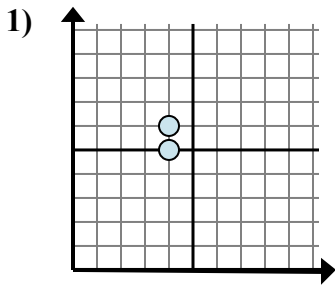
- A.  $1 - 9$
- B.  $10 - 9$
- C.  $1 - 9$
- D.  $9 - 1$

1. \_\_\_\_\_
2. \_\_\_\_\_
3. \_\_\_\_\_
4. \_\_\_\_\_
5. \_\_\_\_\_
6. \_\_\_\_\_
7. \_\_\_\_\_
8. \_\_\_\_\_
9. \_\_\_\_\_

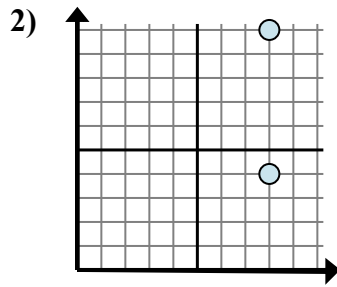


Xác định biểu thức nào thể hiện rõ nhất khoảng cách giữa hai điểm.

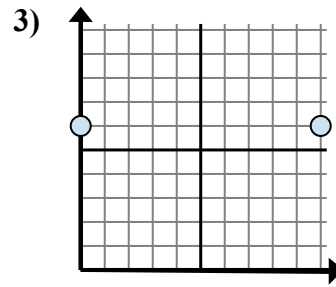
**Câu trả lời**



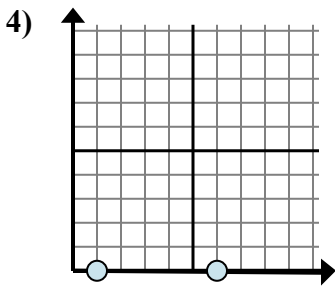
- A. 6 - 5
- B. 4 - 4
- C. 5 - 6
- D. 6 - 4



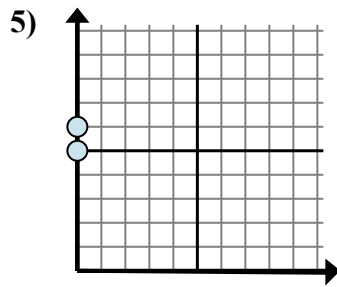
- A. 4 - 10
- B. 8 - 8
- C. 8 - 10
- D. 10 - 4



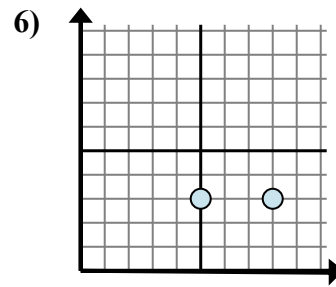
- A. 10 - 0
- B. 0 - 10
- C. 6 - 0
- D. 6 - 0



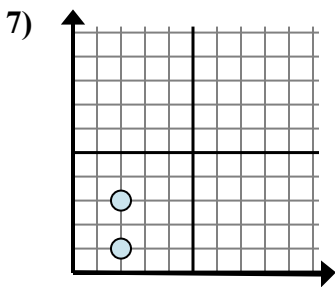
- A. 0 - 0
- B. 0 - 0
- C. 0 - 1
- D. 6 - 1



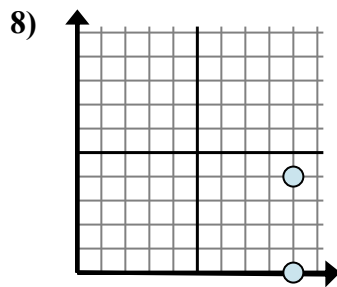
- A. 0 - 6
- B. 0 - 0
- C. 6 - 5
- D. 6 - 0



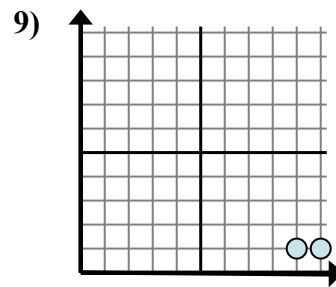
- A. 3 - 8
- B. 8 - 3
- C. 3 - 3
- D. 8 - 5



- A. 2 - 2
- B. 3 - 2
- C. 3 - 1
- D. 2 - 3



- A. 0 - 4
- B. 9 - 4
- C. 4 - 0
- D. 9 - 9



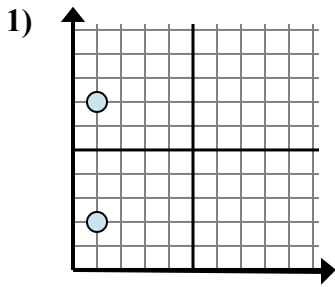
- A. 1 - 9
- B. 10 - 9
- C. 1 - 9
- D. 9 - 1

- 1. **A**
- 2. **D**
- 3. **A**
- 4. **D**
- 5. **C**
- 6. **D**
- 7. **C**
- 8. **C**
- 9. **B**

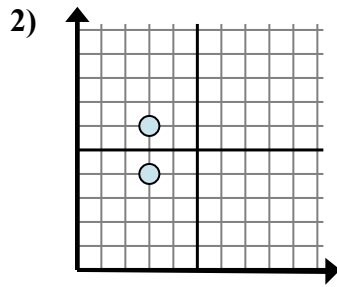


Xác định biểu thức nào thể hiện rõ nhất khoảng cách giữa hai điểm.

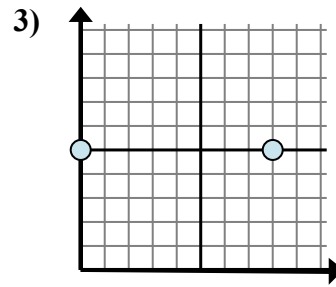
**Câu trả lời**



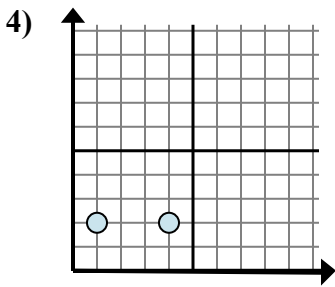
- A.  $1 - 2$
- B.  $7 - 2$
- C.  $2 - 1$
- D.  $2 - 7$



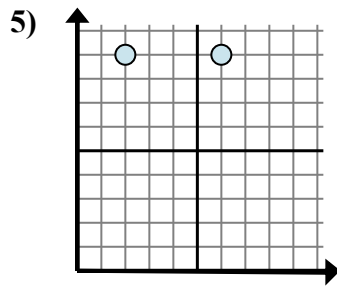
- A.  $6 - 3$
- B.  $3 - 6$
- C.  $6 - 4$
- D.  $3 - 3$



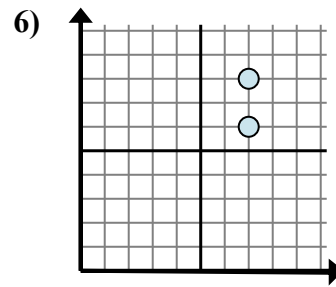
- A.  $8 - 0$
- B.  $0 - 5$
- C.  $5 - 5$
- D.  $0 - 8$



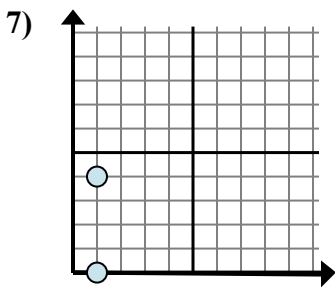
- A.  $2 - 4$
- B.  $4 - 1$
- C.  $2 - 2$
- D.  $1 - 4$



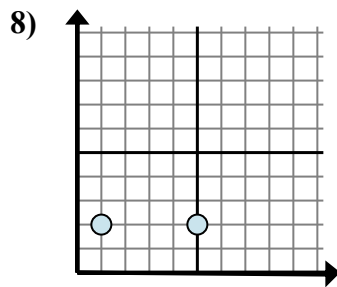
- A.  $9 - 9$
- B.  $2 - 6$
- C.  $9 - 9$
- D.  $6 - 2$



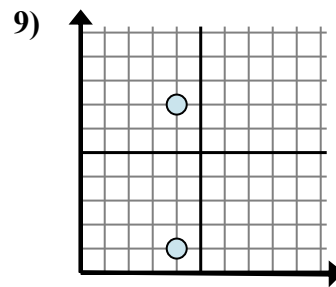
- A.  $7 - 7$
- B.  $6 - 8$
- C.  $7 - 7$
- D.  $8 - 6$



- A.  $1 - 1$
- B.  $4 - 1$
- C.  $1 - 1$
- D.  $4 - 0$



- A.  $1 - 5$
- B.  $5 - 1$
- C.  $1 - 2$
- D.  $2 - 1$



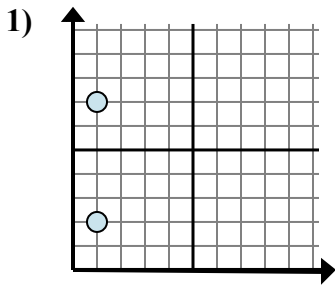
- A.  $4 - 4$
- B.  $7 - 4$
- C.  $4 - 1$
- D.  $7 - 1$

1. \_\_\_\_\_
2. \_\_\_\_\_
3. \_\_\_\_\_
4. \_\_\_\_\_
5. \_\_\_\_\_
6. \_\_\_\_\_
7. \_\_\_\_\_
8. \_\_\_\_\_
9. \_\_\_\_\_

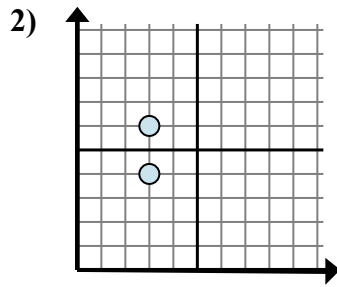


Xác định biểu thức nào thể hiện rõ nhất khoảng cách giữa hai điểm.

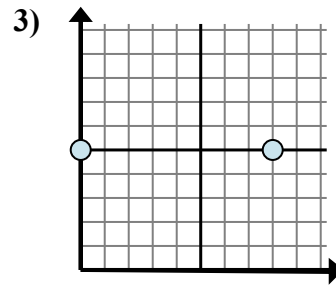
**Câu trả lời**



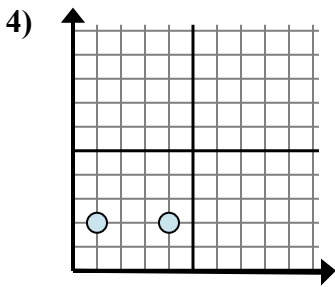
- A. 1 - 2
- B. 7 - 2
- C. 2 - 1
- D. 2 - 7



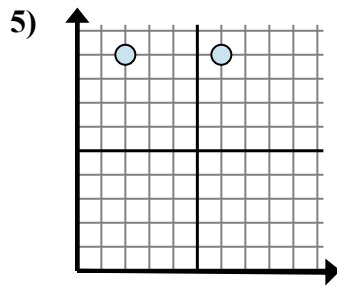
- A. 6 - 3
- B. 3 - 6
- C. 6 - 4
- D. 3 - 3



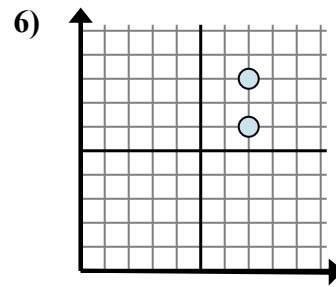
- A. 8 - 0
- B. 0 - 5
- C. 5 - 5
- D. 0 - 8



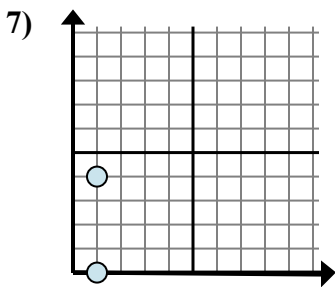
- A. 2 - 4
- B. 4 - 1
- C. 2 - 2
- D. 1 - 4



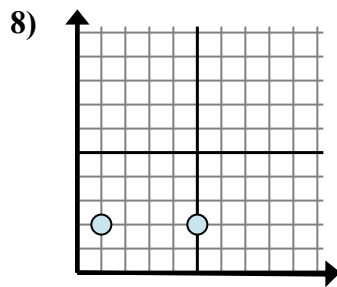
- A. 9 - 9
- B. 2 - 6
- C. 9 - 9
- D. 6 - 2



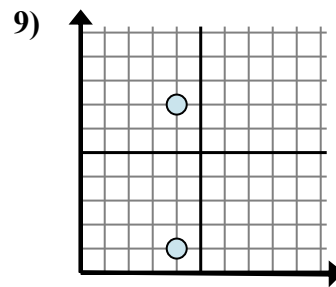
- A. 7 - 7
- B. 6 - 8
- C. 7 - 7
- D. 8 - 6



- A. 1 - 1
- B. 4 - 1
- C. 1 - 1
- D. 4 - 0



- A. 1 - 5
- B. 5 - 1
- C. 1 - 2
- D. 2 - 1



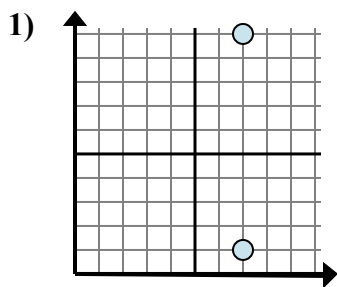
- A. 4 - 4
- B. 7 - 4
- C. 4 - 1
- D. 7 - 1

- 1. **B**
- 2. **C**
- 3. **A**
- 4. **B**
- 5. **D**
- 6. **D**
- 7. **D**
- 8. **B**
- 9. **D**

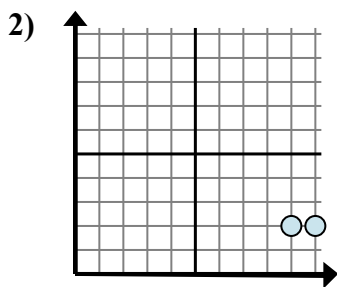


Xác định biểu thức nào thể hiện rõ nhất khoảng cách giữa hai điểm.

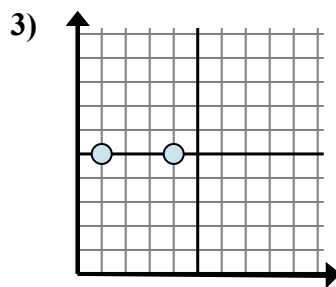
**Câu trả lời**



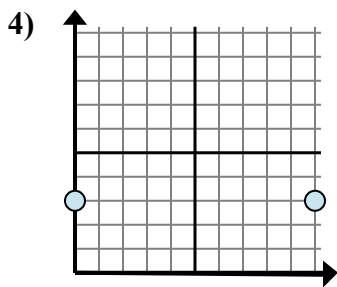
- A.  $7 - 1$
- B.  $10 - 7$
- C.  $7 - 1$
- D.  $10 - 1$



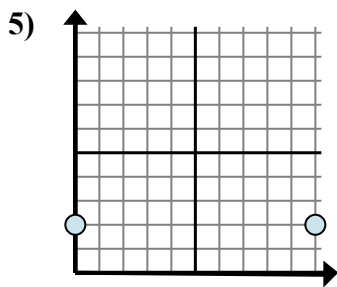
- A.  $10 - 9$
- B.  $2 - 2$
- C.  $2 - 2$
- D.  $9 - 2$



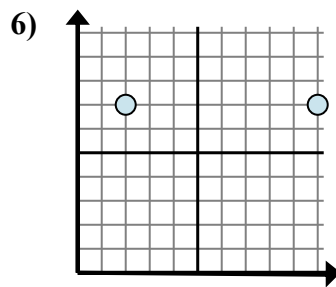
- A.  $4 - 1$
- B.  $1 - 5$
- C.  $5 - 1$
- D.  $4 - 5$



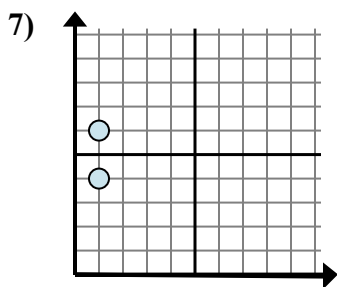
- A.  $10 - 3$
- B.  $10 - 0$
- C.  $3 - 0$
- D.  $3 - 3$



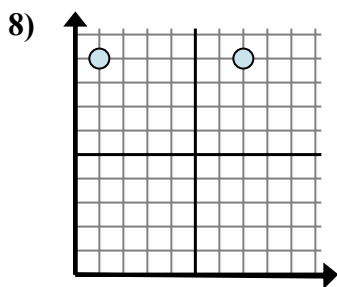
- A.  $2 - 2$
- B.  $10 - 2$
- C.  $2 - 0$
- D.  $10 - 0$



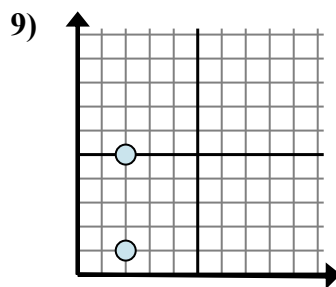
- A.  $10 - 2$
- B.  $7 - 2$
- C.  $2 - 10$
- D.  $10 - 7$



- A.  $1 - 4$
- B.  $6 - 1$
- C.  $1 - 4$
- D.  $6 - 4$



- A.  $1 - 9$
- B.  $7 - 1$
- C.  $1 - 7$
- D.  $7 - 9$

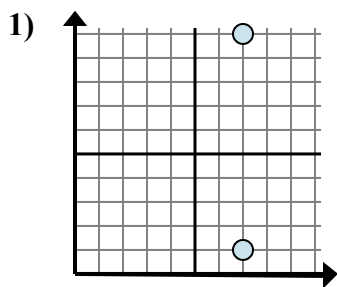


- A.  $5 - 1$
- B.  $2 - 2$
- C.  $5 - 2$
- D.  $2 - 1$

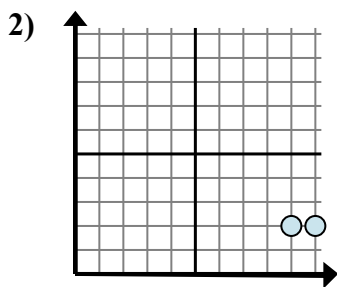
1. \_\_\_\_\_
2. \_\_\_\_\_
3. \_\_\_\_\_
4. \_\_\_\_\_
5. \_\_\_\_\_
6. \_\_\_\_\_
7. \_\_\_\_\_
8. \_\_\_\_\_
9. \_\_\_\_\_



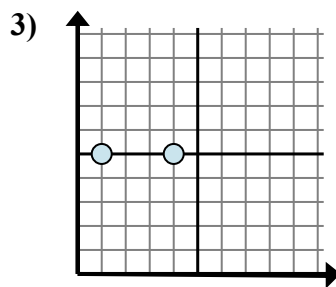
Xác định biểu thức nào thể hiện rõ nhất khoảng cách giữa hai điểm.



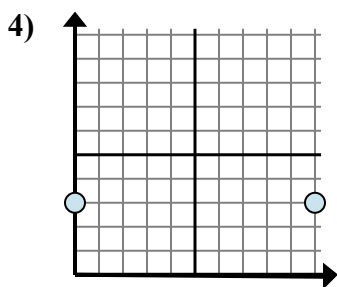
- A.  $7 - 1$
- B.  $10 - 7$
- C.  $7 - 1$
- D.  $10 - 1$



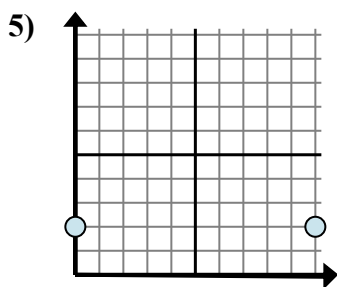
- A.  $10 - 9$
- B.  $2 - 2$
- C.  $2 - 2$
- D.  $9 - 2$



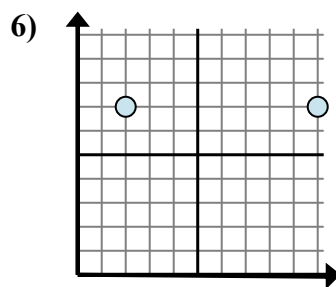
- A.  $4 - 1$
- B.  $1 - 5$
- C.  $5 - 1$
- D.  $4 - 5$



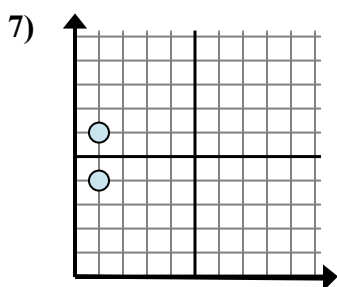
- A.  $10 - 3$
- B.  $10 - 0$
- C.  $3 - 0$
- D.  $3 - 3$



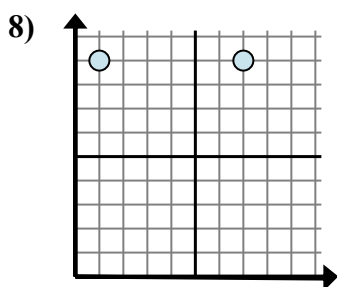
- A.  $2 - 2$
- B.  $10 - 2$
- C.  $2 - 0$
- D.  $10 - 0$



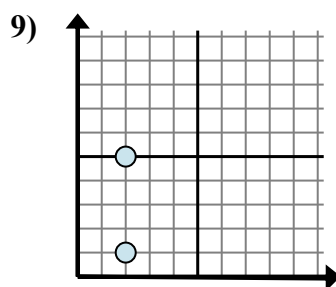
- A.  $10 - 2$
- B.  $7 - 2$
- C.  $2 - 10$
- D.  $10 - 7$



- A.  $1 - 4$
- B.  $6 - 1$
- C.  $1 - 4$
- D.  $6 - 4$



- A.  $1 - 9$
- B.  $7 - 1$
- C.  $1 - 7$
- D.  $7 - 9$



- A.  $5 - 1$
- B.  $2 - 2$
- C.  $5 - 2$
- D.  $2 - 1$

**Câu trả lời**

1. **D**

2. **A**

3. **A**

4. **B**

5. **D**

6. **A**

7. **D**

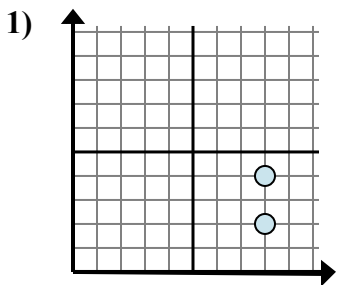
8. **B**

9. **A**

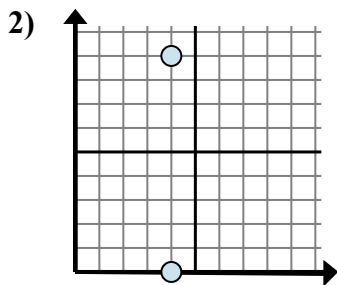


Xác định biểu thức nào thể hiện rõ nhất khoảng cách giữa hai điểm.

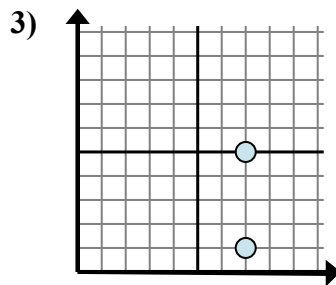
**Câu trả lời**



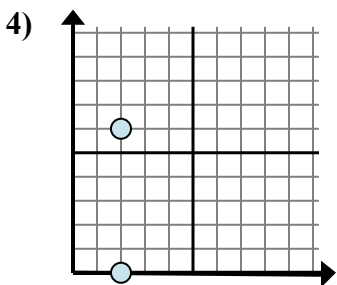
- A.  $8 - 8$
- B.  $4 - 2$
- C.  $4 - 8$
- D.  $8 - 4$



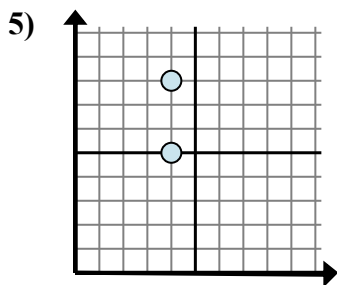
- A.  $0 - 4$
- B.  $4 - 4$
- C.  $9 - 0$
- D.  $4 - 4$



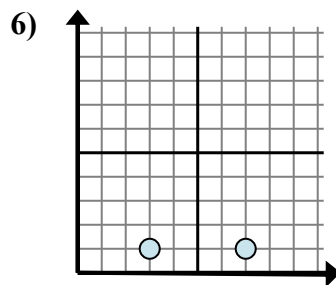
- A.  $1 - 7$
- B.  $1 - 5$
- C.  $5 - 7$
- D.  $5 - 1$



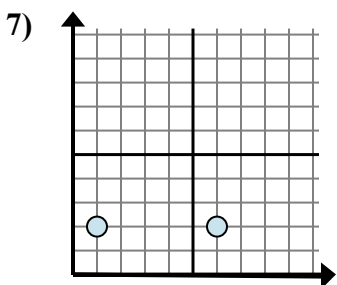
- A.  $2 - 0$
- B.  $6 - 0$
- C.  $6 - 2$
- D.  $2 - 2$



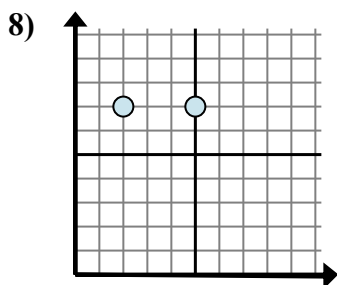
- A.  $5 - 4$
- B.  $8 - 5$
- C.  $4 - 4$
- D.  $5 - 8$



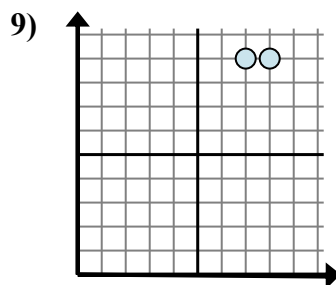
- A.  $7 - 1$
- B.  $7 - 3$
- C.  $1 - 3$
- D.  $3 - 1$



- A.  $2 - 2$
- B.  $2 - 6$
- C.  $6 - 1$
- D.  $1 - 2$



- A.  $5 - 7$
- B.  $5 - 2$
- C.  $2 - 7$
- D.  $7 - 7$



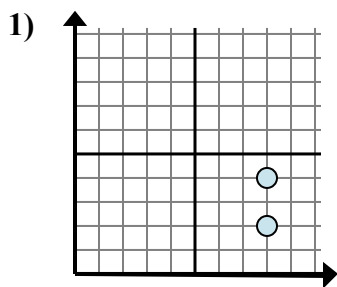
- A.  $9 - 7$
- B.  $8 - 7$
- C.  $9 - 9$
- D.  $7 - 8$

1. \_\_\_\_\_
2. \_\_\_\_\_
3. \_\_\_\_\_
4. \_\_\_\_\_
5. \_\_\_\_\_
6. \_\_\_\_\_
7. \_\_\_\_\_
8. \_\_\_\_\_
9. \_\_\_\_\_

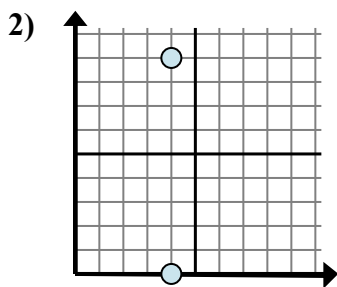


Xác định biểu thức nào thể hiện rõ nhất khoảng cách giữa hai điểm.

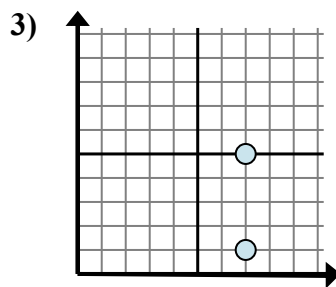
**Câu trả lời**



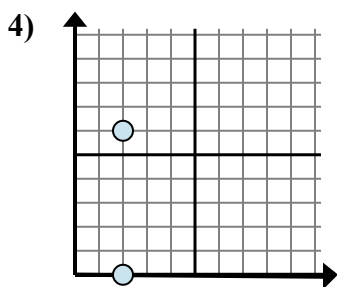
- A.  $8 - 8$
- B.  $4 - 2$
- C.  $4 - 8$
- D.  $8 - 4$



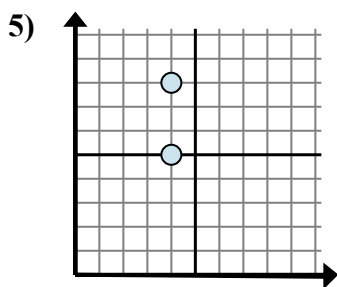
- A.  $0 - 4$
- B.  $4 - 4$
- C.  $9 - 0$
- D.  $4 - 4$



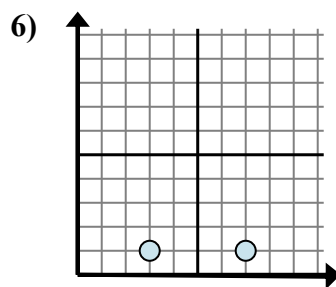
- A.  $1 - 7$
- B.  $1 - 5$
- C.  $5 - 7$
- D.  $5 - 1$



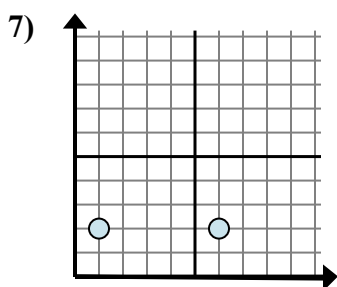
- A.  $2 - 0$
- B.  $6 - 0$
- C.  $6 - 2$
- D.  $2 - 2$



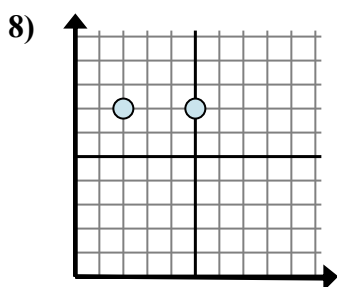
- A.  $5 - 4$
- B.  $8 - 5$
- C.  $4 - 4$
- D.  $5 - 8$



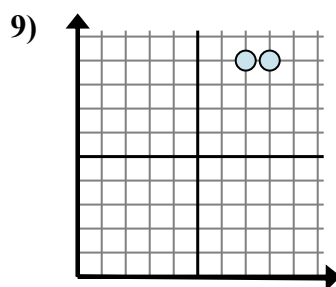
- A.  $7 - 1$
- B.  $7 - 3$
- C.  $1 - 3$
- D.  $3 - 1$



- A.  $2 - 2$
- B.  $2 - 6$
- C.  $6 - 1$
- D.  $1 - 2$



- A.  $5 - 7$
- B.  $5 - 2$
- C.  $2 - 7$
- D.  $7 - 7$



- A.  $9 - 7$
- B.  $8 - 7$
- C.  $9 - 9$
- D.  $7 - 8$

1. **B**

2. **C**

3. **D**

4. **B**

5. **B**

6. **B**

7. **C**

8. **B**

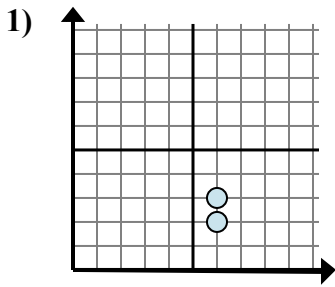
9. **B**



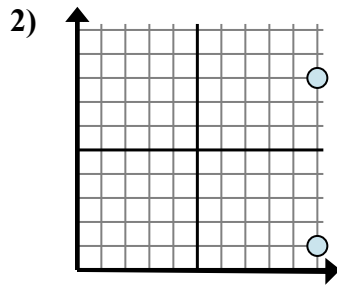


Xác định biểu thức nào thể hiện rõ nhất khoảng cách giữa hai điểm.

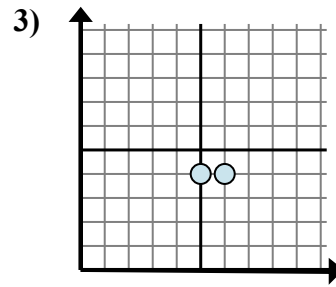
**Câu trả lời**



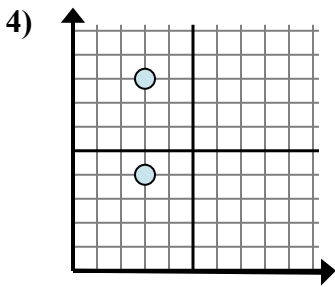
- A. 3 - 2
- B. 6 - 6
- C. 3 - 6
- D. 2 - 3



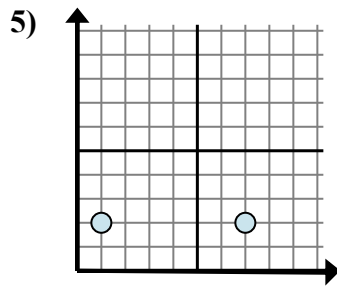
- A. 10 - 10
- B. 10 - 8
- C. 8 - 10
- D. 8 - 1



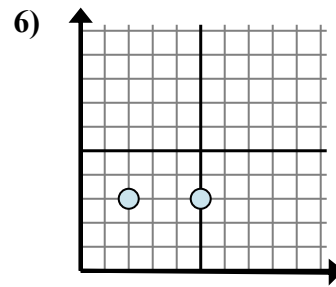
- A. 6 - 5
- B. 4 - 4
- C. 5 - 4
- D. 6 - 4



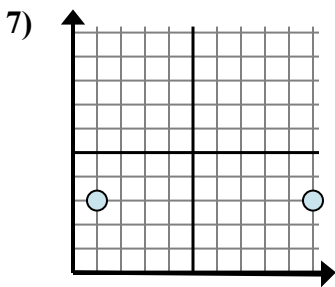
- A. 3 - 3
- B. 3 - 4
- C. 8 - 4
- D. 4 - 8



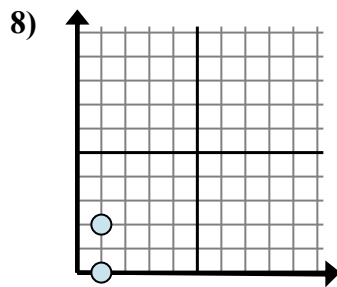
- A. 1 - 2
- B. 2 - 2
- C. 7 - 1
- D. 2 - 2



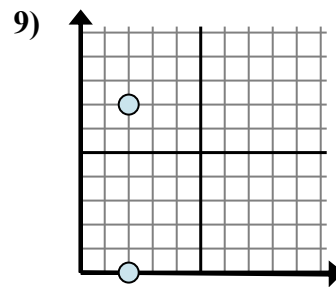
- A. 3 - 5
- B. 2 - 5
- C. 5 - 2
- D. 3 - 5



- A. 10 - 1
- B. 3 - 3
- C. 1 - 3
- D. 3 - 10



- A. 2 - 0
- B. 1 - 0
- C. 1 - 1
- D. 2 - 1



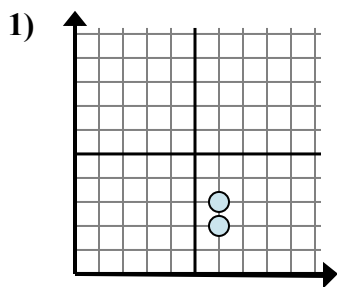
- A. 2 - 2
- B. 0 - 2
- C. 7 - 0
- D. 2 - 7

1. \_\_\_\_\_
2. \_\_\_\_\_
3. \_\_\_\_\_
4. \_\_\_\_\_
5. \_\_\_\_\_
6. \_\_\_\_\_
7. \_\_\_\_\_
8. \_\_\_\_\_
9. \_\_\_\_\_

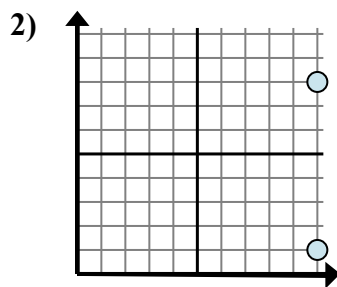


Xác định biểu thức nào thể hiện rõ nhất khoảng cách giữa hai điểm.

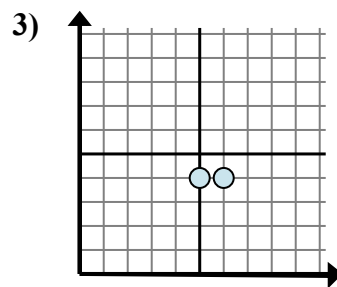
**Câu trả lời**



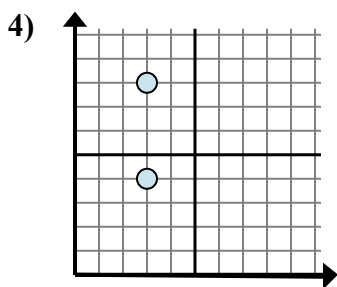
- A. 3 - 2
- B. 6 - 6
- C. 3 - 6
- D. 2 - 3



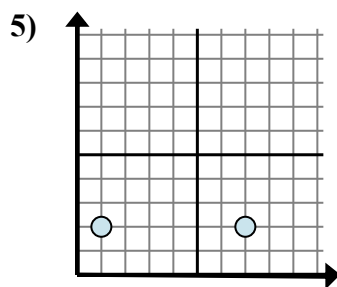
- A. 10 - 10
- B. 10 - 8
- C. 8 - 10
- D. 8 - 1



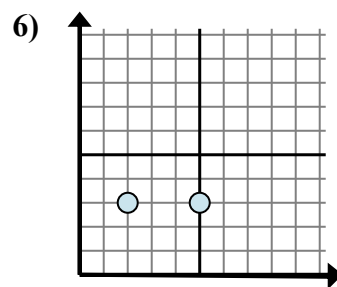
- A. 6 - 5
- B. 4 - 4
- C. 5 - 4
- D. 6 - 4



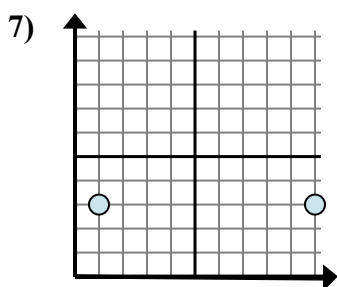
- A. 3 - 3
- B. 3 - 4
- C. 8 - 4
- D. 4 - 8



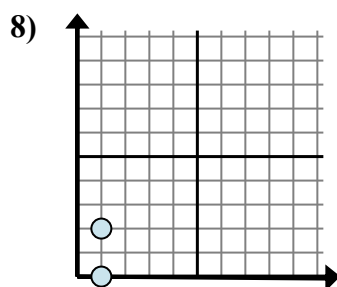
- A. 1 - 2
- B. 2 - 2
- C. 7 - 1
- D. 2 - 2



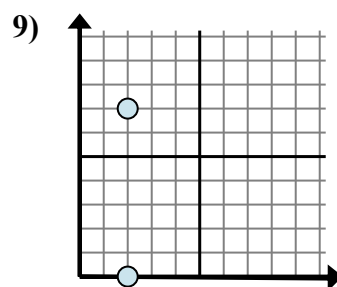
- A. 3 - 5
- B. 2 - 5
- C. 5 - 2
- D. 3 - 5



- A. 10 - 1
- B. 3 - 3
- C. 1 - 3
- D. 3 - 10



- A. 2 - 0
- B. 1 - 0
- C. 1 - 1
- D. 2 - 1



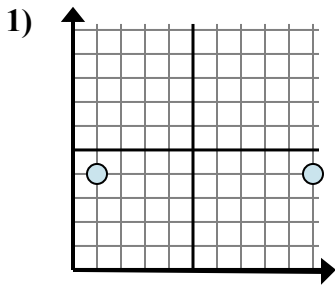
- A. 2 - 2
- B. 0 - 2
- C. 7 - 0
- D. 2 - 7

- 1.           **A**
- 2.           **D**
- 3.           **A**
- 4.           **C**
- 5.           **C**
- 6.           **C**
- 7.           **A**
- 8.           **A**
- 9.           **C**

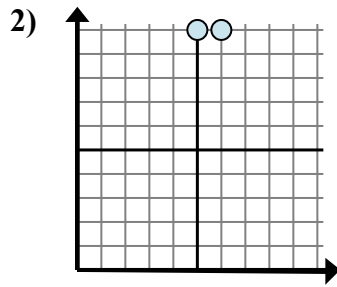


Xác định biểu thức nào thể hiện rõ nhất khoảng cách giữa hai điểm.

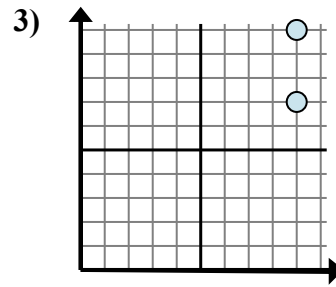
**Câu trả lời**



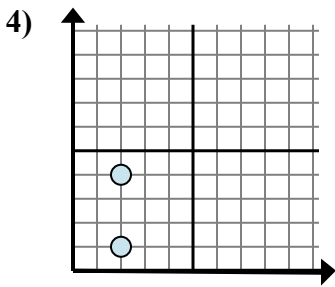
- A.  $4 - 4$
- B.  $4 - 4$
- C.  $4 - 10$
- D.  $10 - 1$



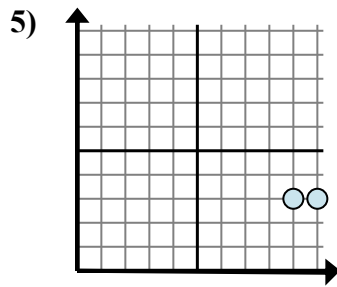
- A.  $6 - 10$
- B.  $5 - 10$
- C.  $6 - 5$
- D.  $10 - 5$



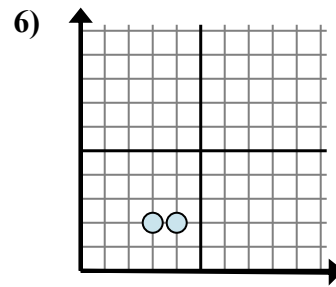
- A.  $10 - 7$
- B.  $9 - 9$
- C.  $7 - 10$
- D.  $9 - 7$



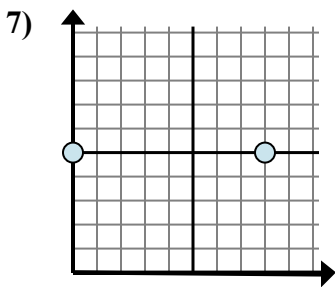
- A.  $2 - 4$
- B.  $4 - 1$
- C.  $1 - 4$
- D.  $2 - 2$



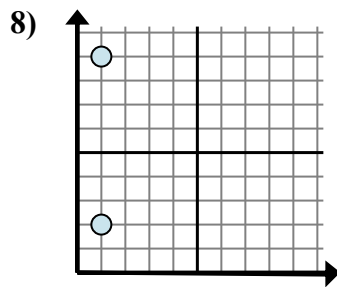
- A.  $9 - 10$
- B.  $10 - 3$
- C.  $3 - 9$
- D.  $10 - 9$



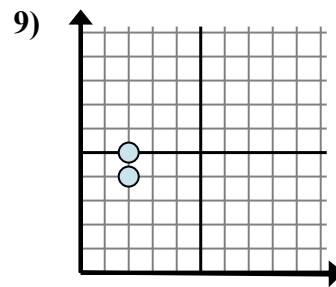
- A.  $3 - 2$
- B.  $2 - 4$
- C.  $2 - 4$
- D.  $4 - 3$



- A.  $5 - 8$
- B.  $5 - 5$
- C.  $8 - 0$
- D.  $8 - 5$



- A.  $1 - 1$
- B.  $1 - 2$
- C.  $9 - 2$
- D.  $2 - 9$



- A.  $5 - 2$
- B.  $5 - 4$
- C.  $2 - 2$
- D.  $2 - 2$

1. \_\_\_\_\_

2. \_\_\_\_\_

3. \_\_\_\_\_

4. \_\_\_\_\_

5. \_\_\_\_\_

6. \_\_\_\_\_

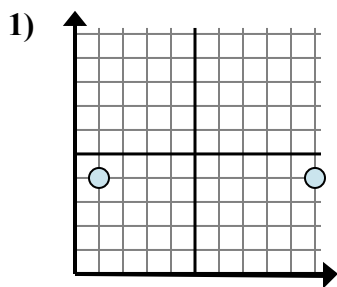
7. \_\_\_\_\_

8. \_\_\_\_\_

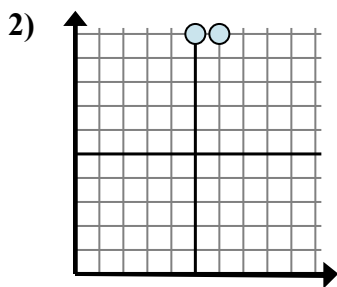
9. \_\_\_\_\_



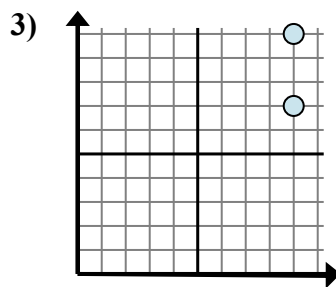
Xác định biểu thức nào thể hiện rõ nhất khoảng cách giữa hai điểm.



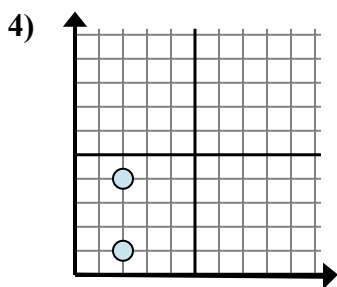
- A. 4 - 4
- B. 4 - 4
- C. 4 - 10
- D. 10 - 1



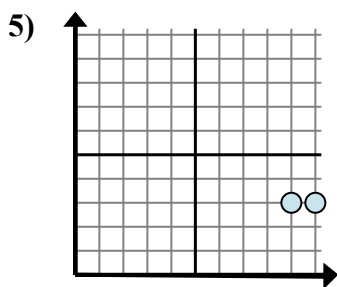
- A. 6 - 10
- B. 5 - 10
- C. 6 - 5
- D. 10 - 5



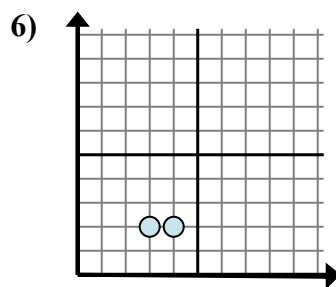
- A. 10 - 7
- B. 9 - 9
- C. 7 - 10
- D. 9 - 7



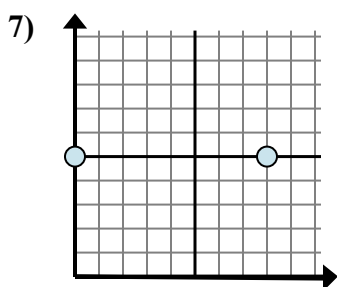
- A. 2 - 4
- B. 4 - 1
- C. 1 - 4
- D. 2 - 2



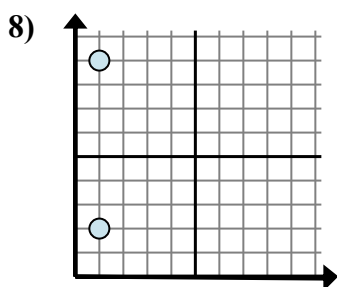
- A. 9 - 10
- B. 10 - 3
- C. 3 - 9
- D. 10 - 9



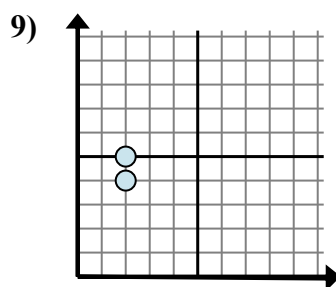
- A. 3 - 2
- B. 2 - 4
- C. 2 - 4
- D. 4 - 3



- A. 5 - 8
- B. 5 - 5
- C. 8 - 0
- D. 8 - 5



- A. 1 - 1
- B. 1 - 2
- C. 9 - 2
- D. 2 - 9



- A. 5 - 2
- B. 5 - 4
- C. 2 - 2
- D. 2 - 2

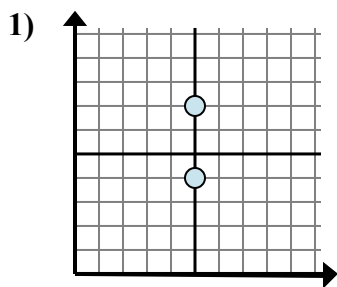
**Câu trả lời**

- 1. **D**
- 2. **C**
- 3. **A**
- 4. **B**
- 5. **D**
- 6. **D**
- 7. **C**
- 8. **C**
- 9. **B**

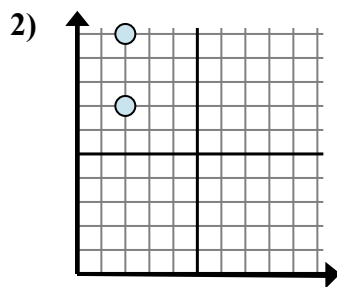


Xác định biểu thức nào thể hiện rõ nhất khoảng cách giữa hai điểm.

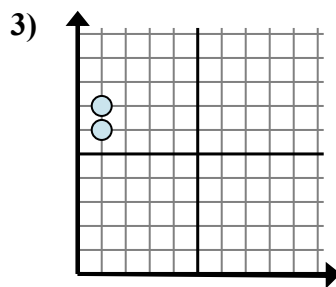
**Câu trả lời**



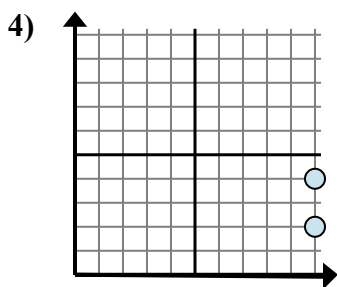
- A.  $5 - 5$
- B.  $7 - 4$
- C.  $7 - 5$
- D.  $5 - 4$



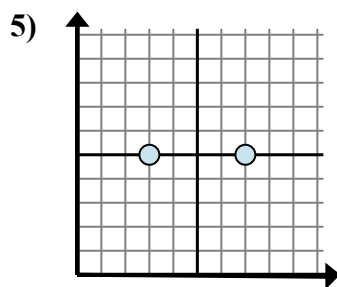
- A.  $10 - 2$
- B.  $2 - 10$
- C.  $2 - 2$
- D.  $10 - 7$



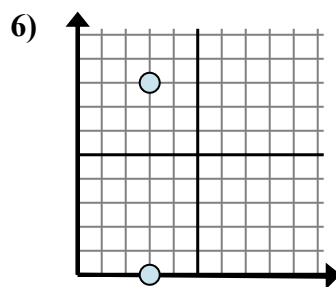
- A.  $7 - 6$
- B.  $1 - 6$
- C.  $6 - 1$
- D.  $1 - 1$



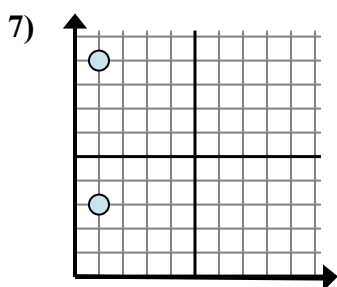
- A.  $10 - 4$
- B.  $10 - 4$
- C.  $2 - 10$
- D.  $4 - 2$



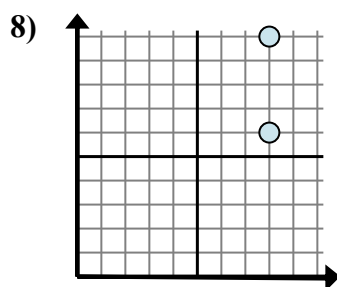
- A.  $7 - 5$
- B.  $7 - 3$
- C.  $5 - 7$
- D.  $3 - 7$



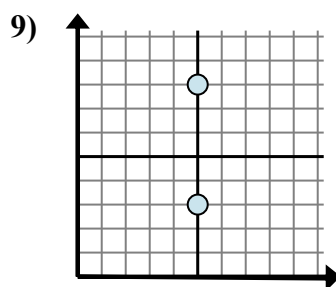
- A.  $3 - 3$
- B.  $8 - 0$
- C.  $3 - 0$
- D.  $0 - 8$



- A.  $9 - 1$
- B.  $9 - 3$
- C.  $1 - 1$
- D.  $1 - 1$



- A.  $8 - 6$
- B.  $8 - 6$
- C.  $10 - 8$
- D.  $10 - 6$



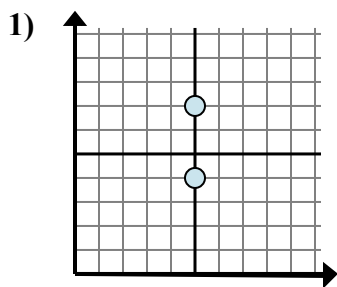
- A.  $8 - 3$
- B.  $5 - 5$
- C.  $8 - 5$
- D.  $5 - 8$

1. \_\_\_\_\_
2. \_\_\_\_\_
3. \_\_\_\_\_
4. \_\_\_\_\_
5. \_\_\_\_\_
6. \_\_\_\_\_
7. \_\_\_\_\_
8. \_\_\_\_\_
9. \_\_\_\_\_

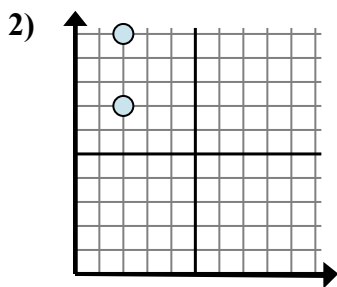


Xác định biểu thức nào thể hiện rõ nhất khoảng cách giữa hai điểm.

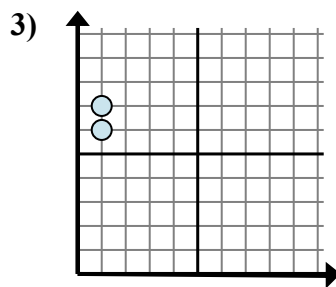
**Câu trả lời**



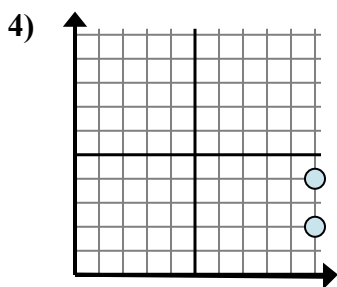
- A.  $5 - 5$
- B.  $7 - 4$
- C.  $7 - 5$
- D.  $5 - 4$



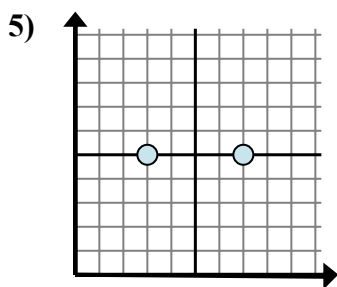
- A.  $10 - 2$
- B.  $2 - 10$
- C.  $2 - 2$
- D.  $10 - 7$



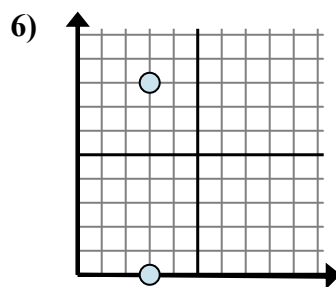
- A.  $7 - 6$
- B.  $1 - 6$
- C.  $6 - 1$
- D.  $1 - 1$



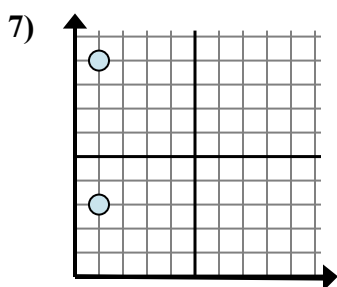
- A.  $10 - 4$
- B.  $10 - 4$
- C.  $2 - 10$
- D.  $4 - 2$



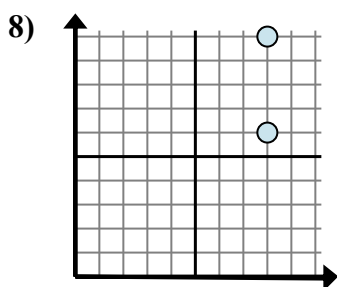
- A.  $7 - 5$
- B.  $7 - 3$
- C.  $5 - 7$
- D.  $3 - 7$



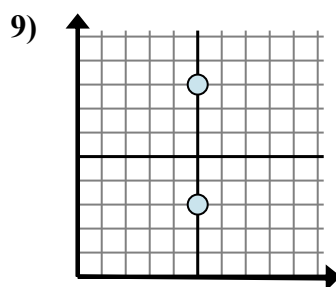
- A.  $3 - 3$
- B.  $8 - 0$
- C.  $3 - 0$
- D.  $0 - 8$



- A.  $9 - 1$
- B.  $9 - 3$
- C.  $1 - 1$
- D.  $1 - 1$



- A.  $8 - 6$
- B.  $8 - 6$
- C.  $10 - 8$
- D.  $10 - 6$



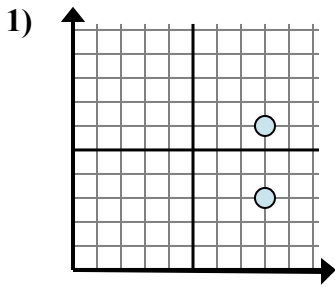
- A.  $8 - 3$
- B.  $5 - 5$
- C.  $8 - 5$
- D.  $5 - 8$

- 1. **B**
- 2. **D**
- 3. **A**
- 4. **D**
- 5. **B**
- 6. **B**
- 7. **B**
- 8. **D**
- 9. **A**

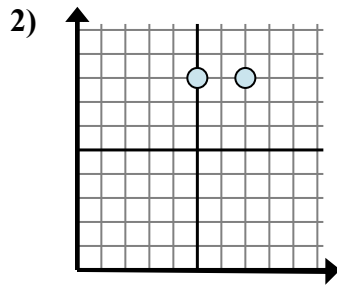


Xác định biểu thức nào thể hiện rõ nhất khoảng cách giữa hai điểm.

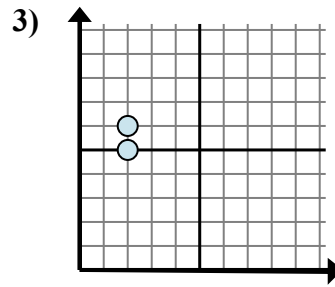
**Câu trả lời**



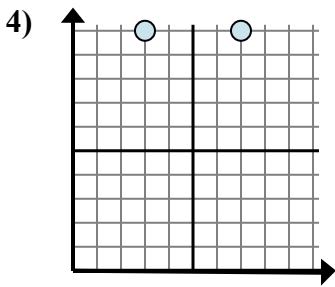
- A.  $6 - 3$
- B.  $6 - 8$
- C.  $8 - 8$
- D.  $3 - 8$



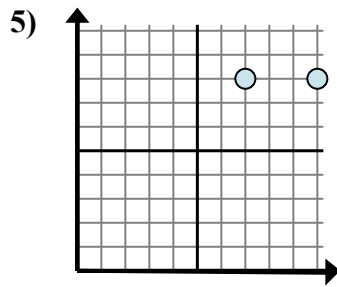
- A.  $8 - 7$
- B.  $7 - 5$
- C.  $8 - 7$
- D.  $8 - 8$



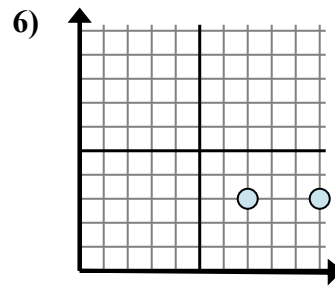
- A.  $6 - 5$
- B.  $2 - 5$
- C.  $5 - 2$
- D.  $6 - 2$



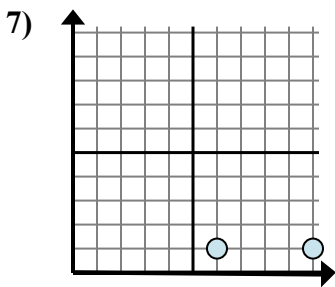
- A.  $7 - 3$
- B.  $10 - 3$
- C.  $10 - 3$
- D.  $10 - 10$



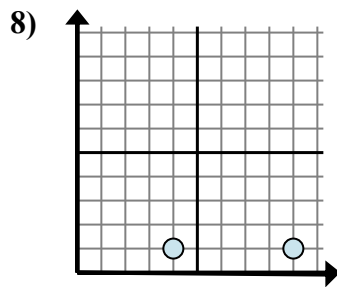
- A.  $8 - 8$
- B.  $10 - 8$
- C.  $7 - 8$
- D.  $10 - 7$



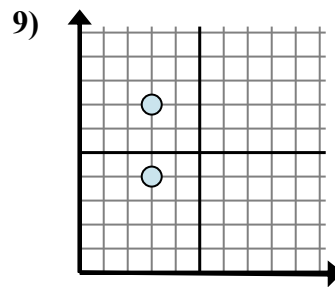
- A.  $10 - 7$
- B.  $7 - 3$
- C.  $3 - 10$
- D.  $3 - 10$



- A.  $10 - 6$
- B.  $6 - 1$
- C.  $6 - 10$
- D.  $1 - 1$



- A.  $4 - 9$
- B.  $9 - 4$
- C.  $1 - 9$
- D.  $4 - 1$



- A.  $3 - 3$
- B.  $4 - 3$
- C.  $3 - 3$
- D.  $7 - 4$

1. \_\_\_\_\_

2. \_\_\_\_\_

3. \_\_\_\_\_

4. \_\_\_\_\_

5. \_\_\_\_\_

6. \_\_\_\_\_

7. \_\_\_\_\_

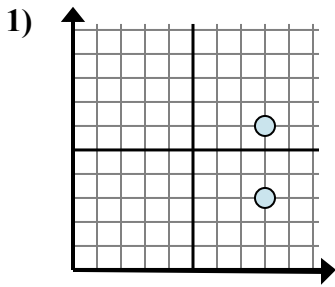
8. \_\_\_\_\_

9. \_\_\_\_\_

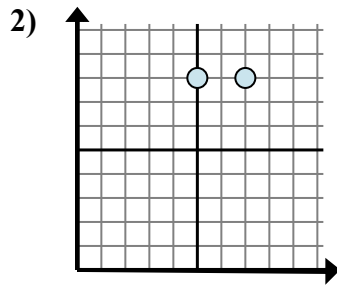


Xác định biểu thức nào thể hiện rõ nhất khoảng cách giữa hai điểm.

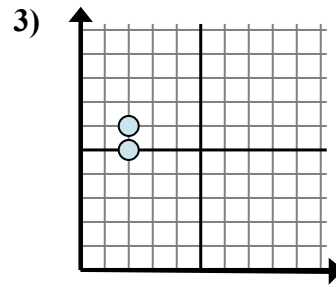
**Câu trả lời**



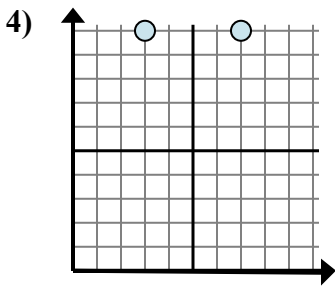
- A. 6 - 3
- B. 6 - 8
- C. 8 - 8
- D. 3 - 8



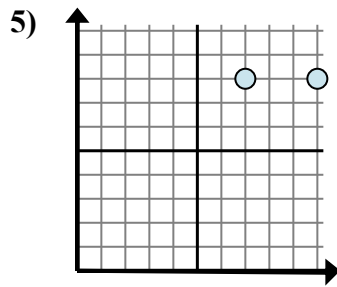
- A. 8 - 7
- B. 7 - 5
- C. 8 - 7
- D. 8 - 8



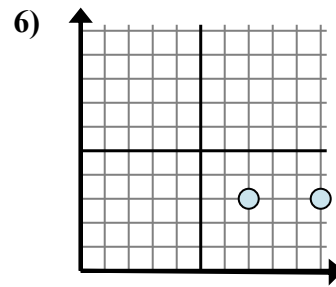
- A. 6 - 5
- B. 2 - 5
- C. 5 - 2
- D. 6 - 2



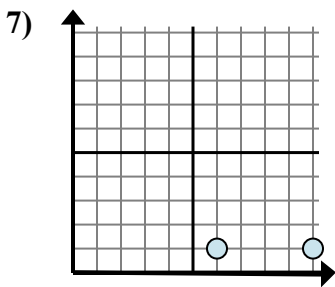
- A. 7 - 3
- B. 10 - 3
- C. 10 - 3
- D. 10 - 10



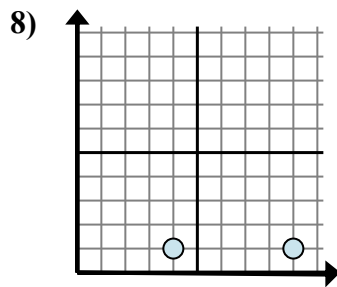
- A. 8 - 8
- B. 10 - 8
- C. 7 - 8
- D. 10 - 7



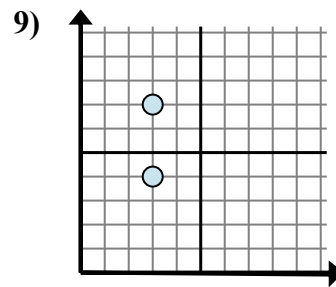
- A. 10 - 7
- B. 7 - 3
- C. 3 - 10
- D. 3 - 10



- A. 10 - 6
- B. 6 - 1
- C. 6 - 10
- D. 1 - 1



- A. 4 - 9
- B. 9 - 4
- C. 1 - 9
- D. 4 - 1



- A. 3 - 3
- B. 4 - 3
- C. 3 - 3
- D. 7 - 4

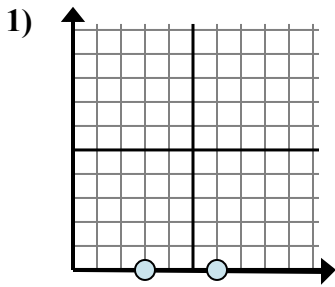
- 1.           **A**
- 2.           **B**
- 3.           **A**
- 4.           **A**
- 5.           **D**
- 6.           **A**
- 7.           **A**
- 8.           **B**
- 9.           **D**



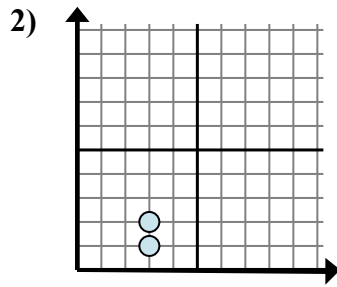


Xác định biểu thức nào thể hiện rõ nhất khoảng cách giữa hai điểm.

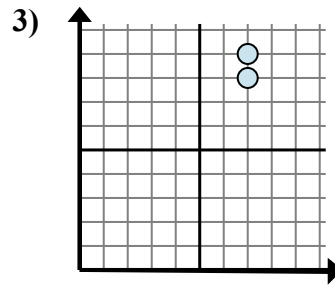
**Câu trả lời**



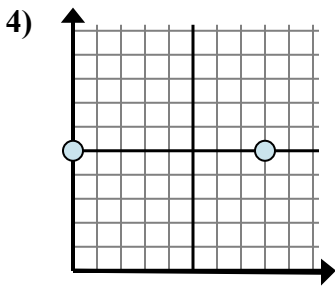
- A.  $0 - 6$
- B.  $3 - 0$
- C.  $6 - 0$
- D.  $6 - 3$



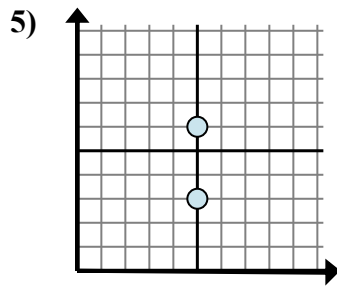
- A.  $3 - 3$
- B.  $3 - 2$
- C.  $3 - 3$
- D.  $2 - 1$



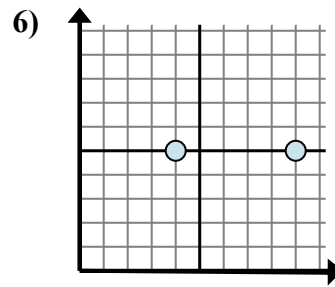
- A.  $7 - 8$
- B.  $7 - 7$
- C.  $9 - 8$
- D.  $8 - 7$



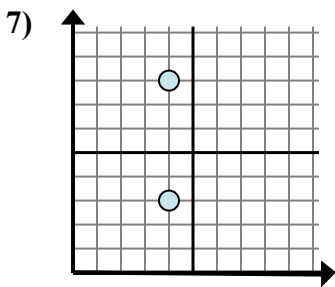
- A.  $8 - 0$
- B.  $5 - 5$
- C.  $5 - 8$
- D.  $8 - 5$



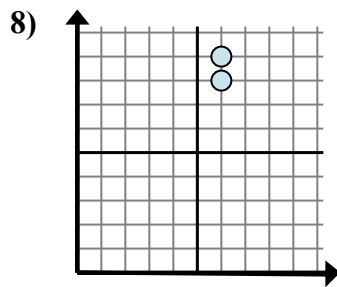
- A.  $6 - 5$
- B.  $6 - 3$
- C.  $5 - 5$
- D.  $5 - 5$



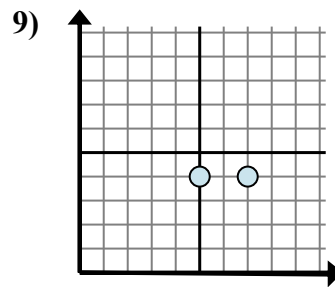
- A.  $5 - 5$
- B.  $9 - 4$
- C.  $9 - 5$
- D.  $4 - 9$



- A.  $4 - 3$
- B.  $8 - 3$
- C.  $4 - 4$
- D.  $4 - 4$



- A.  $9 - 8$
- B.  $6 - 6$
- C.  $8 - 6$
- D.  $9 - 6$



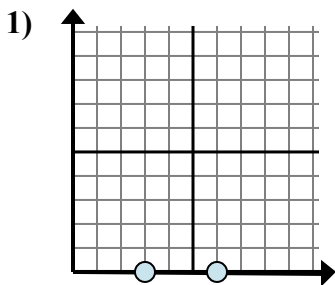
- A.  $5 - 4$
- B.  $4 - 4$
- C.  $7 - 5$
- D.  $4 - 7$

1. \_\_\_\_\_
2. \_\_\_\_\_
3. \_\_\_\_\_
4. \_\_\_\_\_
5. \_\_\_\_\_
6. \_\_\_\_\_
7. \_\_\_\_\_
8. \_\_\_\_\_
9. \_\_\_\_\_

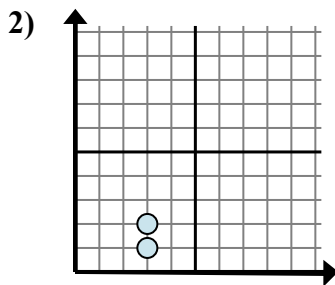


Xác định biểu thức nào thể hiện rõ nhất khoảng cách giữa hai điểm.

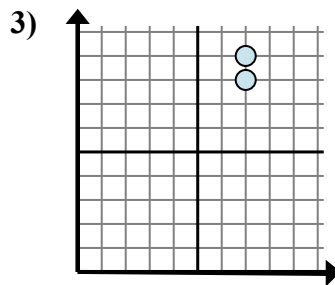
**Câu trả lời**



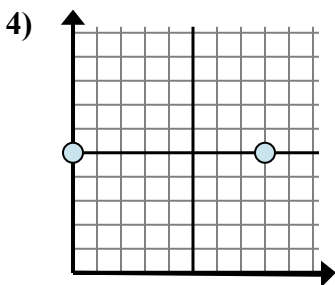
- A.  $0 - 6$
- B.  $3 - 0$
- C.  $6 - 0$
- D.  $6 - 3$



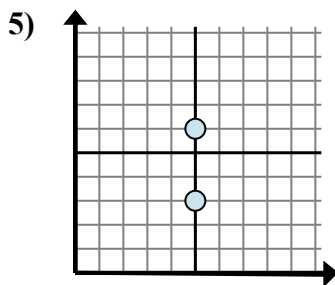
- A.  $3 - 3$
- B.  $3 - 2$
- C.  $3 - 3$
- D.  $2 - 1$



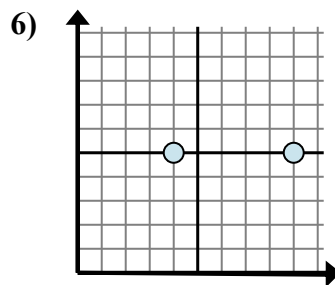
- A.  $7 - 8$
- B.  $7 - 7$
- C.  $9 - 8$
- D.  $8 - 7$



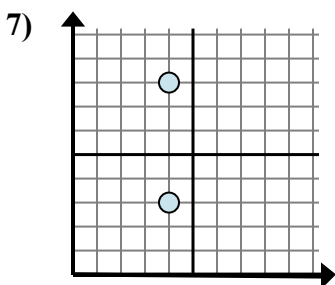
- A.  $8 - 0$
- B.  $5 - 5$
- C.  $5 - 8$
- D.  $8 - 5$



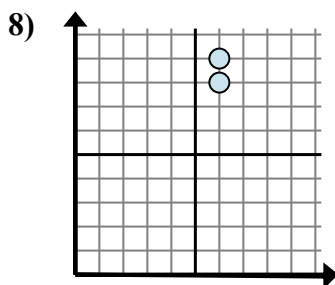
- A.  $6 - 5$
- B.  $6 - 3$
- C.  $5 - 5$
- D.  $5 - 5$



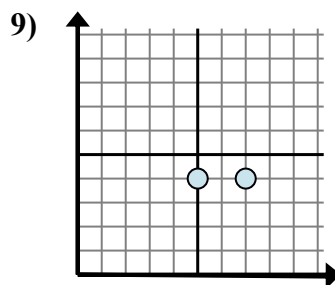
- A.  $5 - 5$
- B.  $9 - 4$
- C.  $9 - 5$
- D.  $4 - 9$



- A.  $4 - 3$
- B.  $8 - 3$
- C.  $4 - 4$
- D.  $4 - 4$



- A.  $9 - 8$
- B.  $6 - 6$
- C.  $8 - 6$
- D.  $9 - 6$



- A.  $5 - 4$
- B.  $4 - 4$
- C.  $7 - 5$
- D.  $4 - 7$

1. **D**

2. **D**

3. **C**

4. **A**

5. **B**

6. **B**

7. **B**

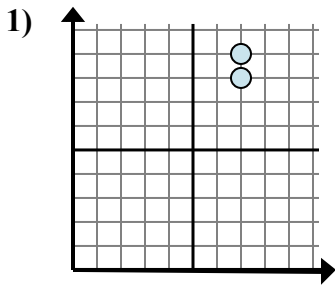
8. **A**

9. **C**

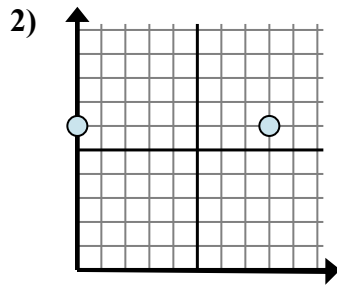


Xác định biểu thức nào thể hiện rõ nhất khoảng cách giữa hai điểm.

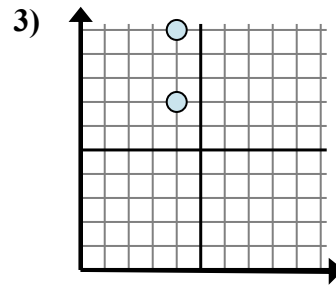
**Câu trả lời**



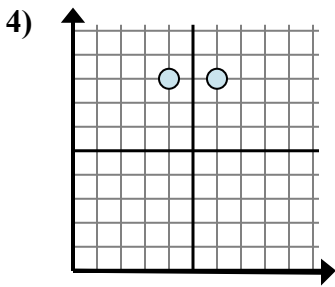
- A.  $7 - 9$
- B.  $8 - 9$
- C.  $9 - 8$
- D.  $7 - 7$



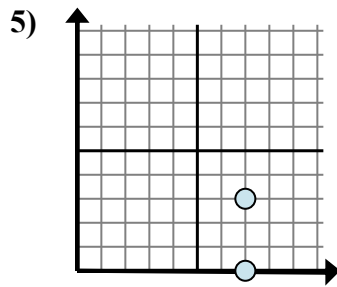
- A.  $8 - 6$
- B.  $8 - 0$
- C.  $0 - 8$
- D.  $6 - 6$



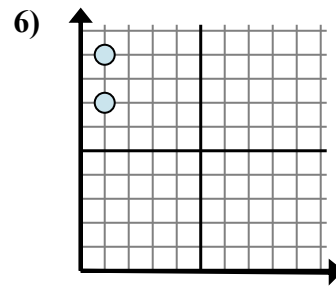
- A.  $7 - 10$
- B.  $4 - 7$
- C.  $10 - 7$
- D.  $4 - 4$



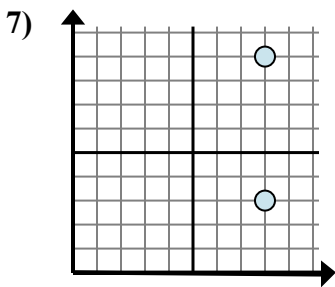
- A.  $8 - 8$
- B.  $4 - 8$
- C.  $6 - 4$
- D.  $6 - 8$



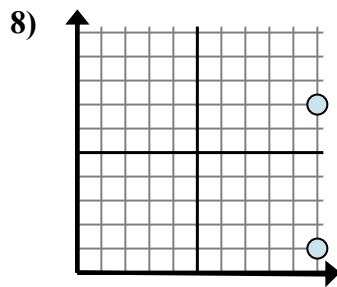
- A.  $7 - 3$
- B.  $3 - 0$
- C.  $0 - 3$
- D.  $3 - 7$



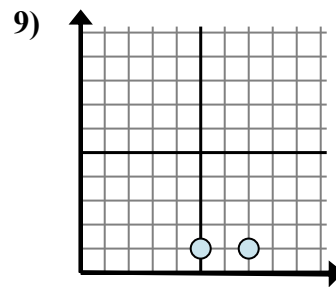
- A.  $9 - 7$
- B.  $7 - 9$
- C.  $1 - 1$
- D.  $1 - 1$



- A.  $8 - 8$
- B.  $3 - 9$
- C.  $9 - 3$
- D.  $9 - 8$



- A.  $1 - 7$
- B.  $7 - 10$
- C.  $7 - 1$
- D.  $1 - 10$



- A.  $7 - 1$
- B.  $1 - 1$
- C.  $1 - 7$
- D.  $7 - 5$

1. \_\_\_\_\_

2. \_\_\_\_\_

3. \_\_\_\_\_

4. \_\_\_\_\_

5. \_\_\_\_\_

6. \_\_\_\_\_

7. \_\_\_\_\_

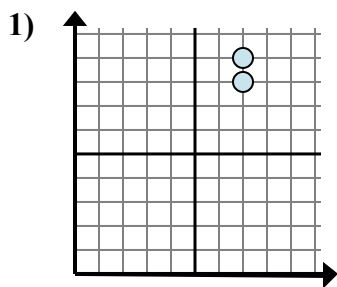
8. \_\_\_\_\_

9. \_\_\_\_\_

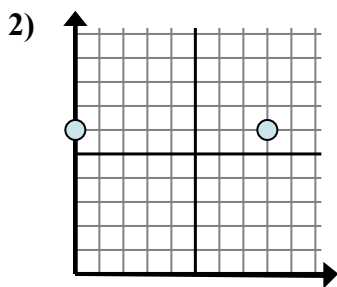


Xác định biểu thức nào thể hiện rõ nhất khoảng cách giữa hai điểm.

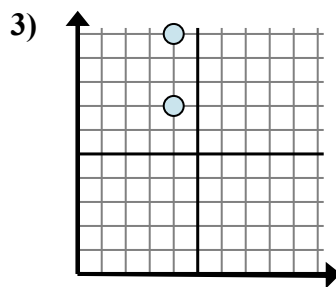
**Câu trả lời**



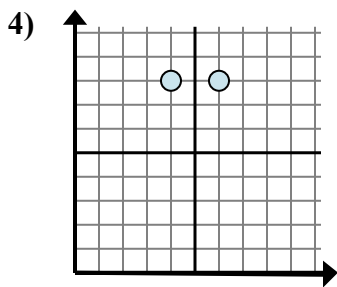
- A.  $7 - 9$
- B.  $8 - 9$
- C.  $9 - 8$
- D.  $7 - 7$



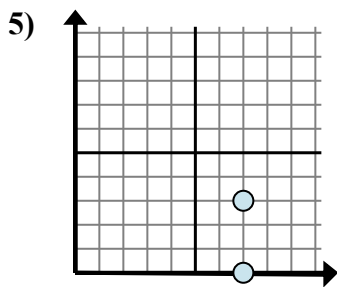
- A.  $8 - 6$
- B.  $8 - 0$
- C.  $0 - 8$
- D.  $6 - 6$



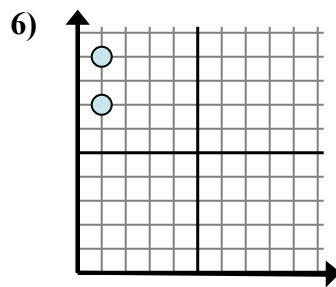
- A.  $7 - 10$
- B.  $4 - 7$
- C.  $10 - 7$
- D.  $4 - 4$



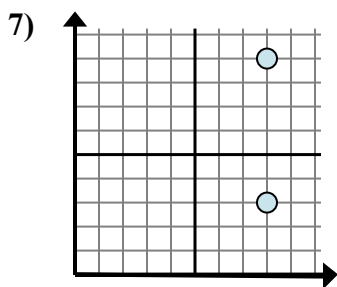
- A.  $8 - 8$
- B.  $4 - 8$
- C.  $6 - 4$
- D.  $6 - 8$



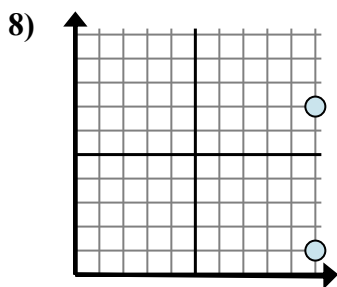
- A.  $7 - 3$
- B.  $3 - 0$
- C.  $0 - 3$
- D.  $3 - 7$



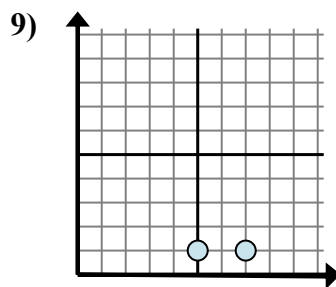
- A.  $9 - 7$
- B.  $7 - 9$
- C.  $1 - 1$
- D.  $1 - 1$



- A.  $8 - 8$
- B.  $3 - 9$
- C.  $9 - 3$
- D.  $9 - 8$



- A.  $1 - 7$
- B.  $7 - 10$
- C.  $7 - 1$
- D.  $1 - 10$



- A.  $7 - 1$
- B.  $1 - 1$
- C.  $1 - 7$
- D.  $7 - 5$

1. **C**

2. **B**

3. **C**

4. **C**

5. **B**

6. **A**

7. **C**

8. **C**

9. **D**