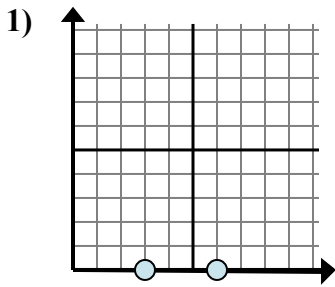


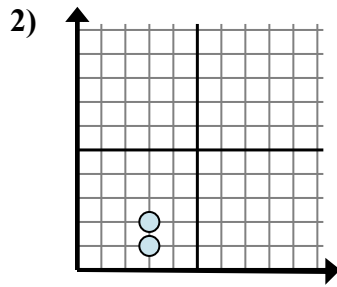


Xác định biểu thức nào thể hiện rõ nhất khoảng cách giữa hai điểm.

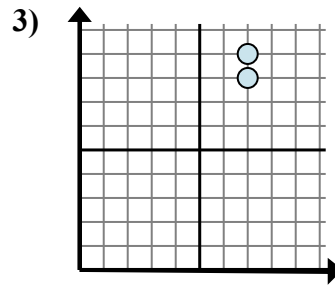
Câu trả lời



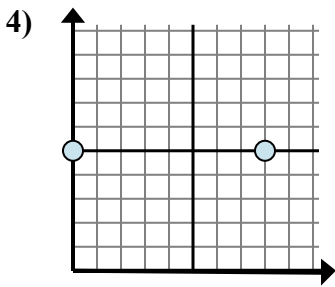
- A. $0 - 6$
- B. $3 - 0$
- C. $6 - 0$
- D. $6 - 3$



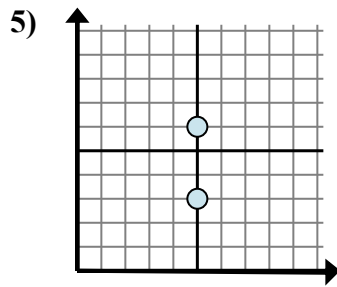
- A. $3 - 3$
- B. $3 - 2$
- C. $3 - 3$
- D. $2 - 1$



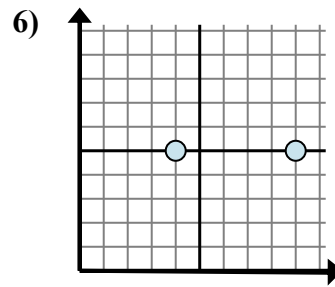
- A. $7 - 8$
- B. $7 - 7$
- C. $9 - 8$
- D. $8 - 7$



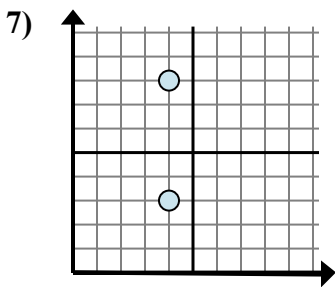
- A. $8 - 0$
- B. $5 - 5$
- C. $5 - 8$
- D. $8 - 5$



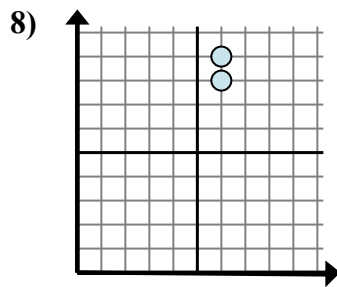
- A. $6 - 5$
- B. $6 - 3$
- C. $5 - 5$
- D. $5 - 5$



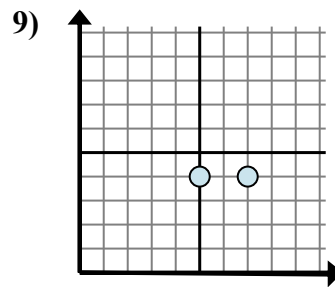
- A. $5 - 5$
- B. $9 - 4$
- C. $9 - 5$
- D. $4 - 9$



- A. $4 - 3$
- B. $8 - 3$
- C. $4 - 4$
- D. $4 - 4$



- A. $9 - 8$
- B. $6 - 6$
- C. $8 - 6$
- D. $9 - 6$



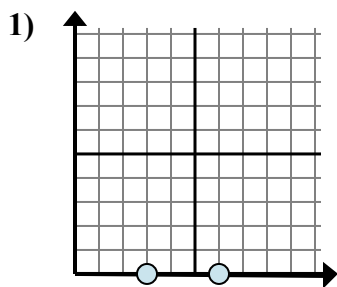
- A. $5 - 4$
- B. $4 - 4$
- C. $7 - 5$
- D. $4 - 7$

1. _____
2. _____
3. _____
4. _____
5. _____
6. _____
7. _____
8. _____
9. _____

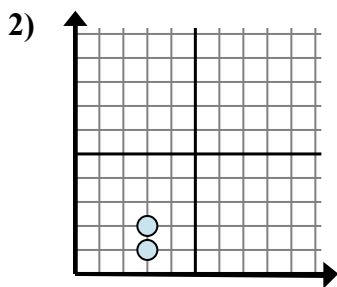


Xác định biểu thức nào thể hiện rõ nhất khoảng cách giữa hai điểm.

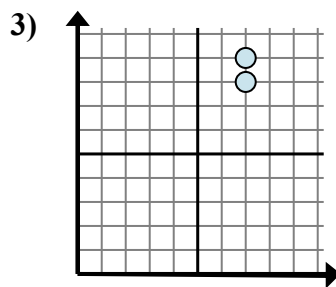
Câu trả lời



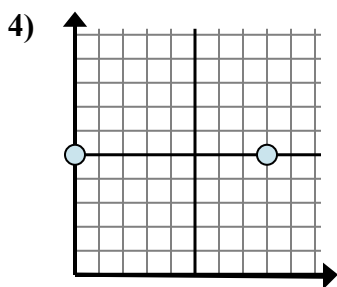
- A. $0 - 6$
- B. $3 - 0$
- C. $6 - 0$
- D. $6 - 3$



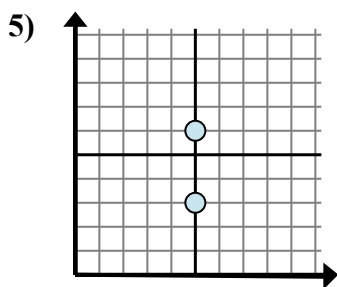
- A. $3 - 3$
- B. $3 - 2$
- C. $3 - 3$
- D. $2 - 1$



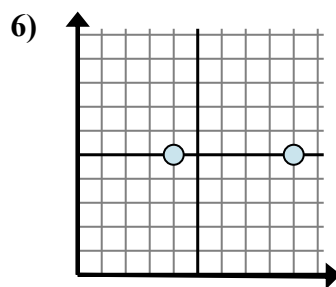
- A. $7 - 8$
- B. $7 - 7$
- C. $9 - 8$
- D. $8 - 7$



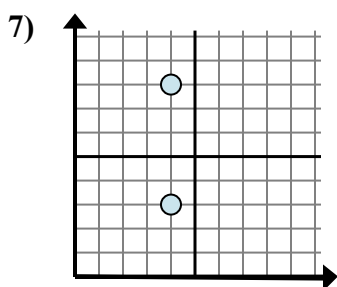
- A. $8 - 0$
- B. $5 - 5$
- C. $5 - 8$
- D. $8 - 5$



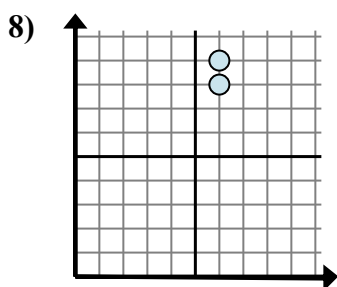
- A. $6 - 5$
- B. $6 - 3$
- C. $5 - 5$
- D. $5 - 5$



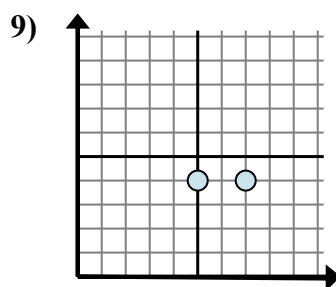
- A. $5 - 5$
- B. $9 - 4$
- C. $9 - 5$
- D. $4 - 9$



- A. $4 - 3$
- B. $8 - 3$
- C. $4 - 4$
- D. $4 - 4$



- A. $9 - 8$
- B. $6 - 6$
- C. $8 - 6$
- D. $9 - 6$



- A. $5 - 4$
- B. $4 - 4$
- C. $7 - 5$
- D. $4 - 7$

1. **D**

2. **D**

3. **C**

4. **A**

5. **B**

6. **B**

7. **B**

8. **A**

9. **C**