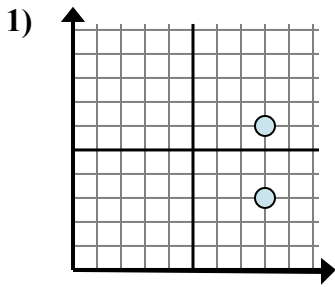


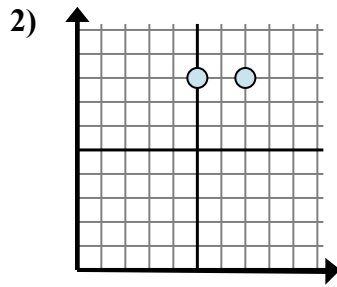


Xác định biểu thức nào thể hiện rõ nhất khoảng cách giữa hai điểm.

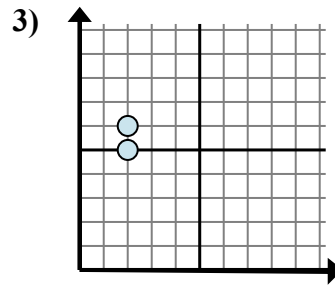
Câu trả lời



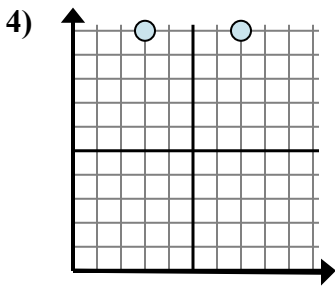
- A. $6 - 3$
- B. $6 - 8$
- C. $8 - 8$
- D. $3 - 8$



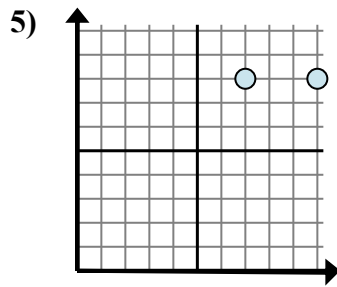
- A. $8 - 7$
- B. $7 - 5$
- C. $8 - 7$
- D. $8 - 8$



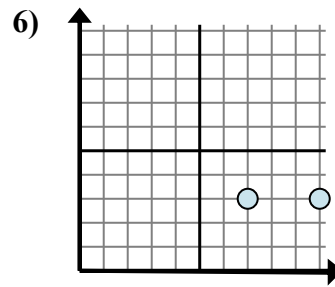
- A. $6 - 5$
- B. $2 - 5$
- C. $5 - 2$
- D. $6 - 2$



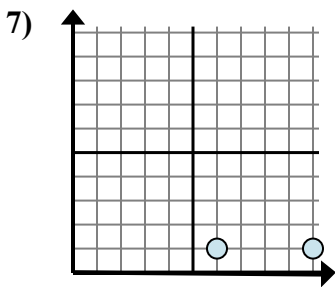
- A. $7 - 3$
- B. $10 - 3$
- C. $10 - 3$
- D. $10 - 10$



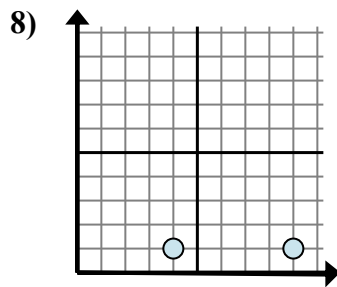
- A. $8 - 8$
- B. $10 - 8$
- C. $7 - 8$
- D. $10 - 7$



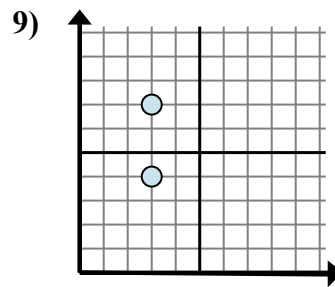
- A. $10 - 7$
- B. $7 - 3$
- C. $3 - 10$
- D. $3 - 10$



- A. $10 - 6$
- B. $6 - 1$
- C. $6 - 10$
- D. $1 - 1$



- A. $4 - 9$
- B. $9 - 4$
- C. $1 - 9$
- D. $4 - 1$



- A. $3 - 3$
- B. $4 - 3$
- C. $3 - 3$
- D. $7 - 4$

1. _____

2. _____

3. _____

4. _____

5. _____

6. _____

7. _____

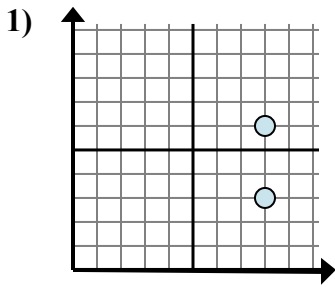
8. _____

9. _____

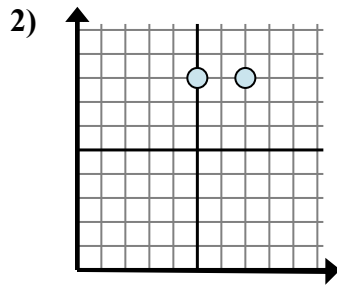


Xác định biểu thức nào thể hiện rõ nhất khoảng cách giữa hai điểm.

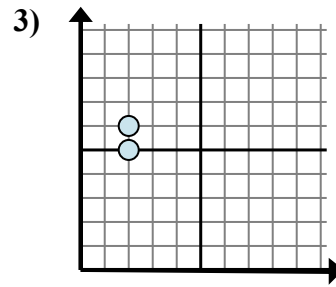
Câu trả lời



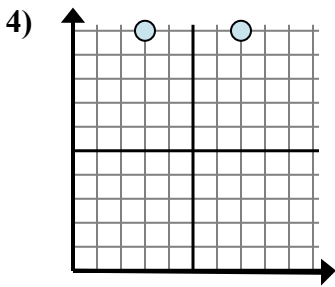
- A. 6 - 3
- B. 6 - 8
- C. 8 - 8
- D. 3 - 8



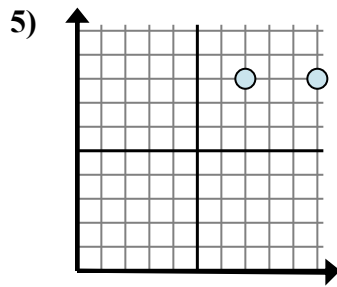
- A. 8 - 7
- B. 7 - 5
- C. 8 - 7
- D. 8 - 8



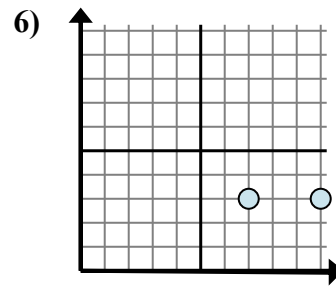
- A. 6 - 5
- B. 2 - 5
- C. 5 - 2
- D. 6 - 2



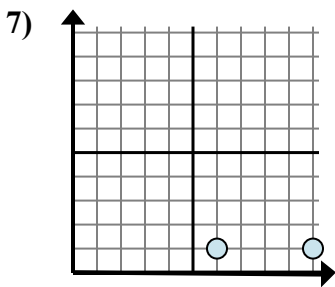
- A. 7 - 3
- B. 10 - 3
- C. 10 - 3
- D. 10 - 10



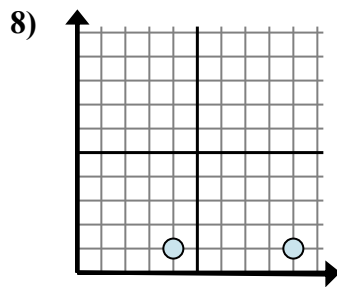
- A. 8 - 8
- B. 10 - 8
- C. 7 - 8
- D. 10 - 7



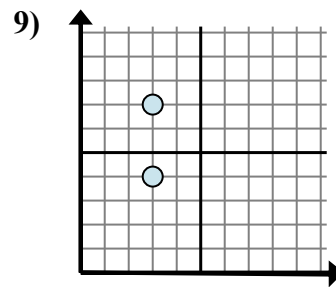
- A. 10 - 7
- B. 7 - 3
- C. 3 - 10
- D. 3 - 10



- A. 10 - 6
- B. 6 - 1
- C. 6 - 10
- D. 1 - 1



- A. 4 - 9
- B. 9 - 4
- C. 1 - 9
- D. 4 - 1



- A. 3 - 3
- B. 4 - 3
- C. 3 - 3
- D. 7 - 4

- 1. **A**
- 2. **B**
- 3. **A**
- 4. **A**
- 5. **D**
- 6. **A**
- 7. **A**
- 8. **B**
- 9. **D**