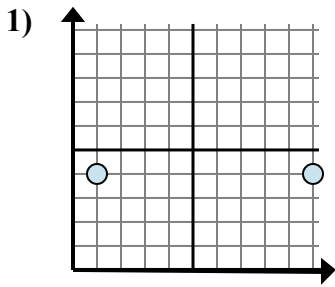


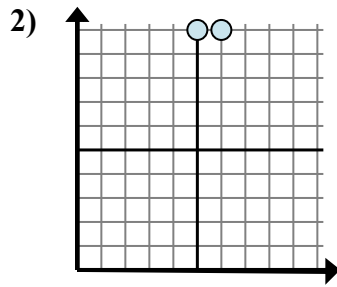


Xác định biểu thức nào thể hiện rõ nhất khoảng cách giữa hai điểm.

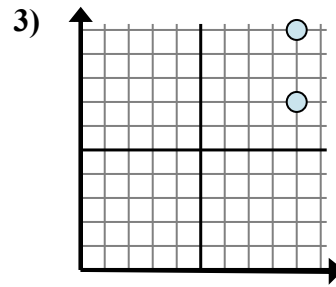
**Câu trả lời**



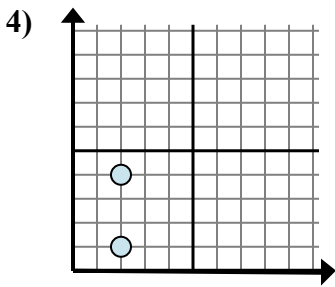
- A.  $4 - 4$
- B.  $4 - 4$
- C.  $4 - 10$
- D.  $10 - 1$



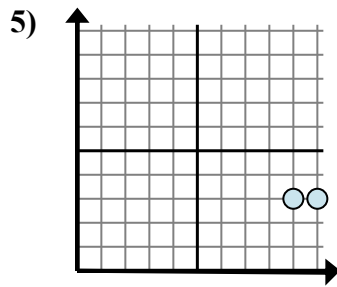
- A.  $6 - 10$
- B.  $5 - 10$
- C.  $6 - 5$
- D.  $10 - 5$



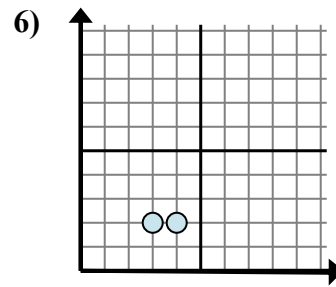
- A.  $10 - 7$
- B.  $9 - 9$
- C.  $7 - 10$
- D.  $9 - 7$



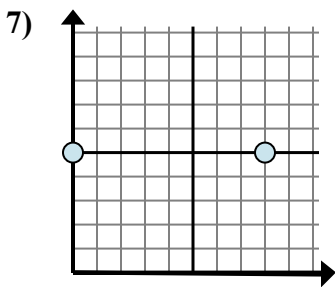
- A.  $2 - 4$
- B.  $4 - 1$
- C.  $1 - 4$
- D.  $2 - 2$



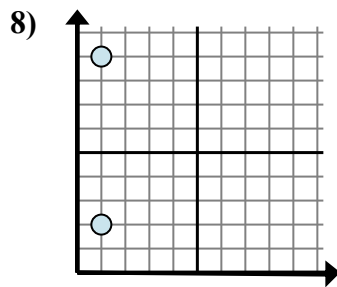
- A.  $9 - 10$
- B.  $10 - 3$
- C.  $3 - 9$
- D.  $10 - 9$



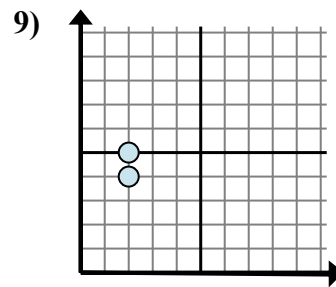
- A.  $3 - 2$
- B.  $2 - 4$
- C.  $2 - 4$
- D.  $4 - 3$



- A.  $5 - 8$
- B.  $5 - 5$
- C.  $8 - 0$
- D.  $8 - 5$



- A.  $1 - 1$
- B.  $1 - 2$
- C.  $9 - 2$
- D.  $2 - 9$



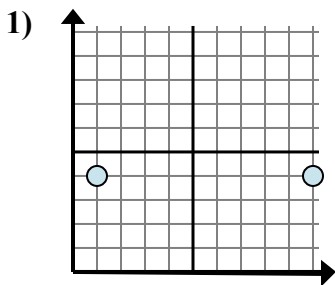
- A.  $5 - 2$
- B.  $5 - 4$
- C.  $2 - 2$
- D.  $2 - 2$

1. \_\_\_\_\_
2. \_\_\_\_\_
3. \_\_\_\_\_
4. \_\_\_\_\_
5. \_\_\_\_\_
6. \_\_\_\_\_
7. \_\_\_\_\_
8. \_\_\_\_\_
9. \_\_\_\_\_

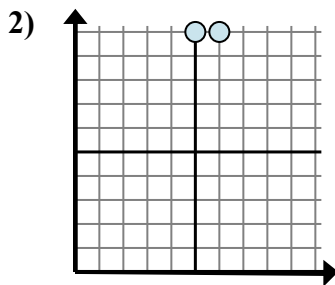


Xác định biểu thức nào thể hiện rõ nhất khoảng cách giữa hai điểm.

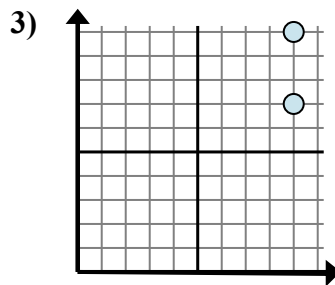
**Câu trả lời**



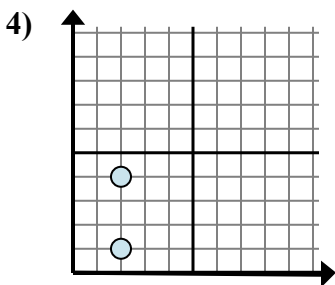
- A. 4 - 4
- B. 4 - 4
- C. 4 - 10
- D. 10 - 1



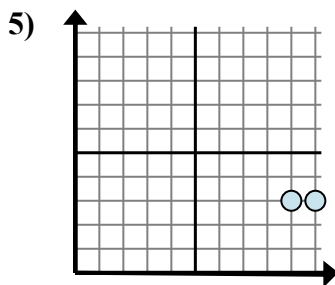
- A. 6 - 10
- B. 5 - 10
- C. 6 - 5
- D. 10 - 5



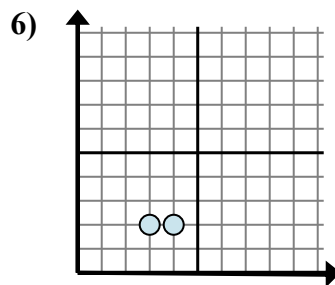
- A. 10 - 7
- B. 9 - 9
- C. 7 - 10
- D. 9 - 7



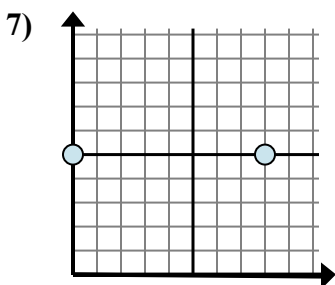
- A. 2 - 4
- B. 4 - 1
- C. 1 - 4
- D. 2 - 2



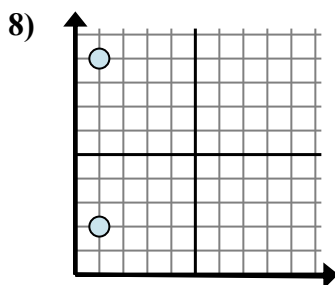
- A. 9 - 10
- B. 10 - 3
- C. 3 - 9
- D. 10 - 9



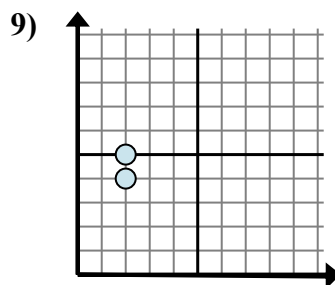
- A. 3 - 2
- B. 2 - 4
- C. 2 - 4
- D. 4 - 3



- A. 5 - 8
- B. 5 - 5
- C. 8 - 0
- D. 8 - 5



- A. 1 - 1
- B. 1 - 2
- C. 9 - 2
- D. 2 - 9



- A. 5 - 2
- B. 5 - 4
- C. 2 - 2
- D. 2 - 2

1. **D**

2. **C**

3. **A**

4. **B**

5. **D**

6. **D**

7. **C**

8. **C**

9. **B**