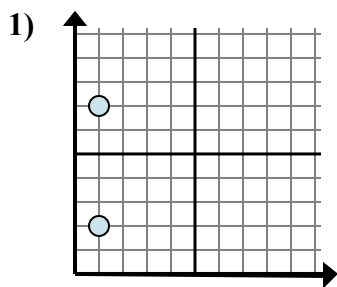


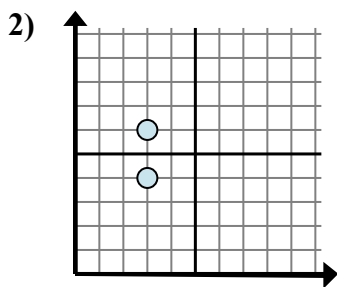


Xác định biểu thức nào thể hiện rõ nhất khoảng cách giữa hai điểm.

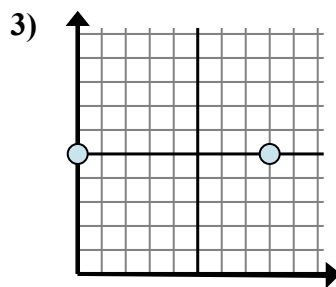
Câu trả lời



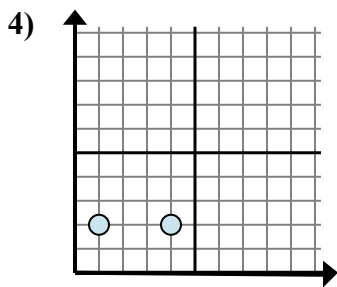
- A. $1 - 2$
- B. $7 - 2$
- C. $2 - 1$
- D. $2 - 7$



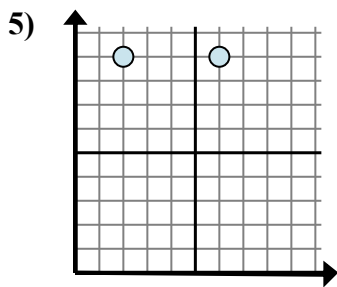
- A. $6 - 3$
- B. $3 - 6$
- C. $6 - 4$
- D. $3 - 3$



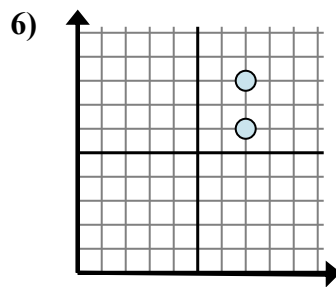
- A. $8 - 0$
- B. $0 - 5$
- C. $5 - 5$
- D. $0 - 8$



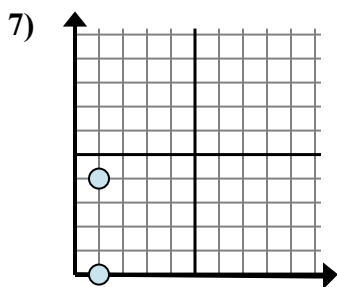
- A. $2 - 4$
- B. $4 - 1$
- C. $2 - 2$
- D. $1 - 4$



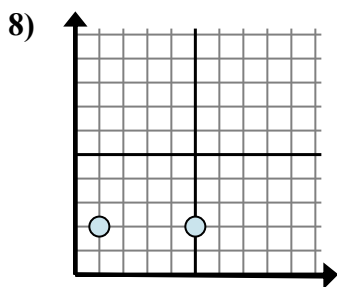
- A. $9 - 9$
- B. $2 - 6$
- C. $9 - 9$
- D. $6 - 2$



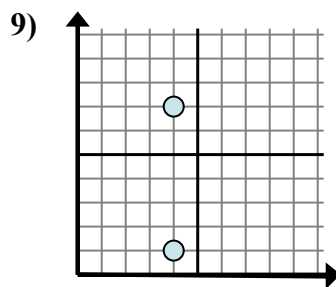
- A. $7 - 7$
- B. $6 - 8$
- C. $7 - 7$
- D. $8 - 6$



- A. $1 - 1$
- B. $4 - 1$
- C. $1 - 1$
- D. $4 - 0$



- A. $1 - 5$
- B. $5 - 1$
- C. $1 - 2$
- D. $2 - 1$



- A. $4 - 4$
- B. $7 - 4$
- C. $4 - 1$
- D. $7 - 1$

1. _____

2. _____

3. _____

4. _____

5. _____

6. _____

7. _____

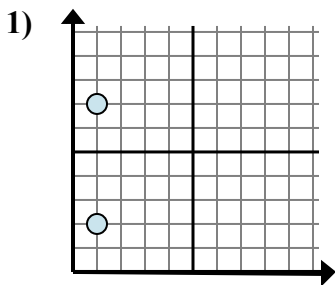
8. _____

9. _____

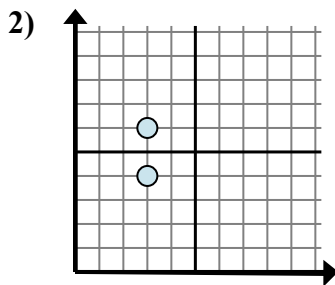


Xác định biểu thức nào thể hiện rõ nhất khoảng cách giữa hai điểm.

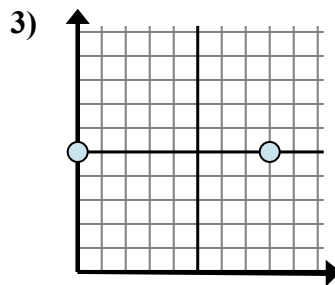
Câu trả lời



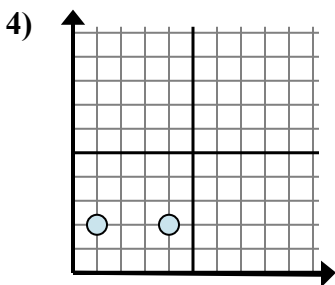
- A. $1 - 2$
- B. $7 - 2$
- C. $2 - 1$
- D. $2 - 7$



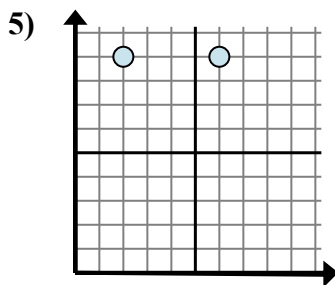
- A. $6 - 3$
- B. $3 - 6$
- C. $6 - 4$
- D. $3 - 3$



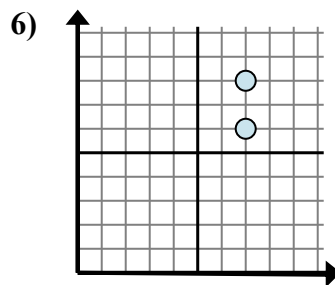
- A. $8 - 0$
- B. $0 - 5$
- C. $5 - 5$
- D. $0 - 8$



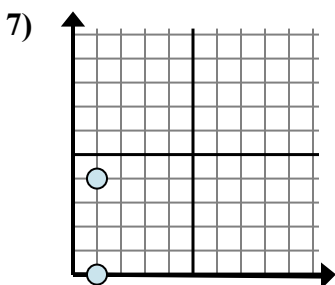
- A. $2 - 4$
- B. $4 - 1$
- C. $2 - 2$
- D. $1 - 4$



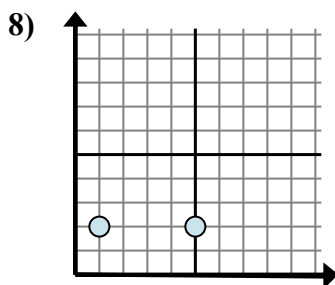
- A. $9 - 9$
- B. $2 - 6$
- C. $9 - 9$
- D. $6 - 2$



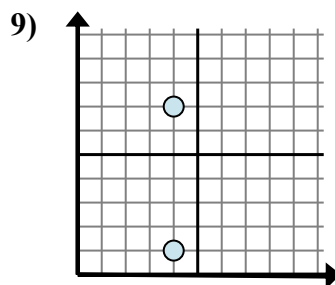
- A. $7 - 7$
- B. $6 - 8$
- C. $7 - 7$
- D. $8 - 6$



- A. $1 - 1$
- B. $4 - 1$
- C. $1 - 1$
- D. $4 - 0$



- A. $1 - 5$
- B. $5 - 1$
- C. $1 - 2$
- D. $2 - 1$



- A. $4 - 4$
- B. $7 - 4$
- C. $4 - 1$
- D. $7 - 1$

1. **B**

2. **C**

3. **A**

4. **B**

5. **D**

6. **D**

7. **D**

8. **B**

9. **D**