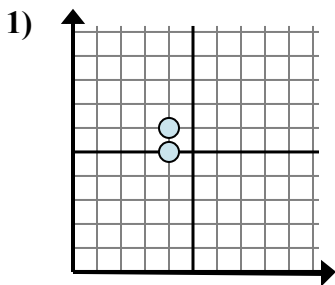


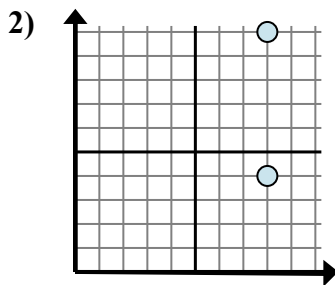


Xác định biểu thức nào thể hiện rõ nhất khoảng cách giữa hai điểm.

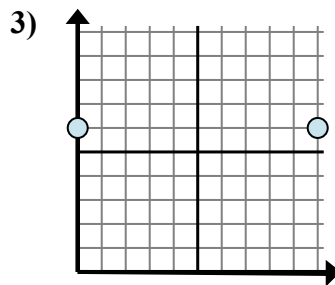
Câu trả lời



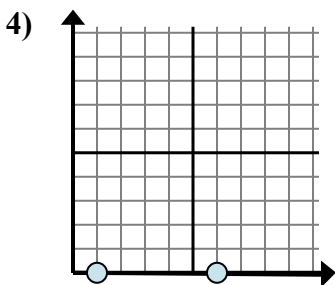
- A. $6 - 5$
- B. $4 - 4$
- C. $5 - 6$
- D. $6 - 4$



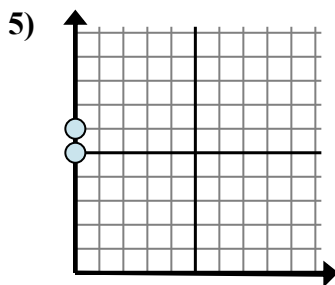
- A. $4 - 10$
- B. $8 - 8$
- C. $8 - 10$
- D. $10 - 4$



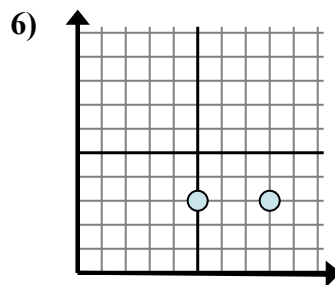
- A. $10 - 0$
- B. $0 - 10$
- C. $6 - 0$
- D. $6 - 0$



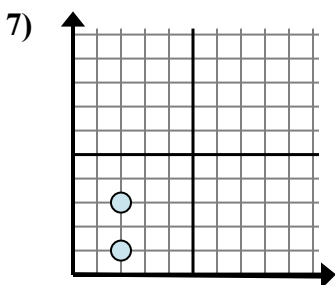
- A. $0 - 0$
- B. $0 - 0$
- C. $0 - 1$
- D. $6 - 1$



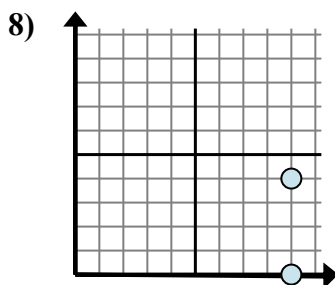
- A. $0 - 6$
- B. $0 - 0$
- C. $6 - 5$
- D. $6 - 0$



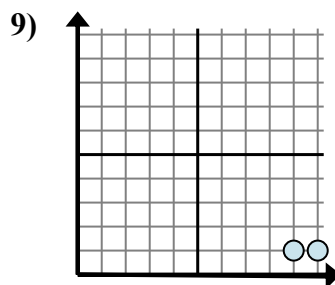
- A. $3 - 8$
- B. $8 - 3$
- C. $3 - 3$
- D. $8 - 5$



- A. $2 - 2$
- B. $3 - 2$
- C. $3 - 1$
- D. $2 - 3$



- A. $0 - 4$
- B. $9 - 4$
- C. $4 - 0$
- D. $9 - 9$



- A. $1 - 9$
- B. $10 - 9$
- C. $1 - 9$
- D. $9 - 1$

1. _____

2. _____

3. _____

4. _____

5. _____

6. _____

7. _____

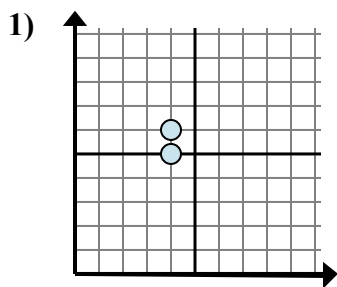
8. _____

9. _____

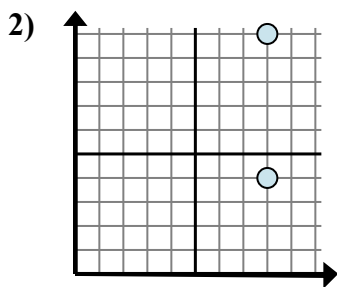


Xác định biểu thức nào thể hiện rõ nhất khoảng cách giữa hai điểm.

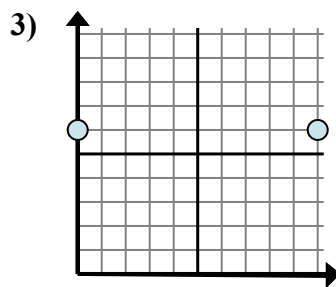
Câu trả lời



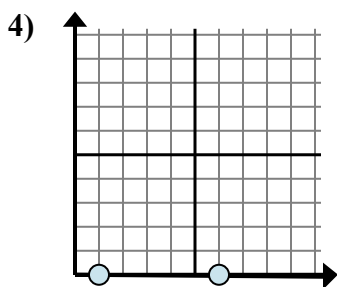
- A. 6 - 5
- B. 4 - 4
- C. 5 - 6
- D. 6 - 4



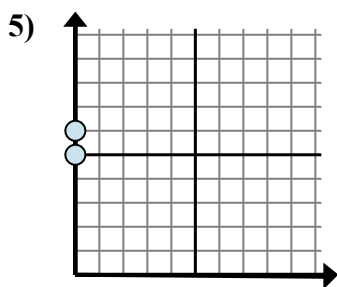
- A. 4 - 10
- B. 8 - 8
- C. 8 - 10
- D. 10 - 4



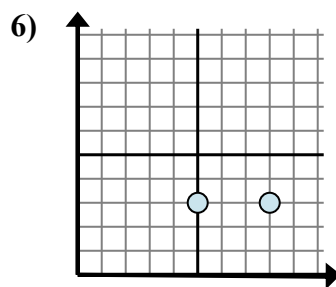
- A. 10 - 0
- B. 0 - 10
- C. 6 - 0
- D. 6 - 0



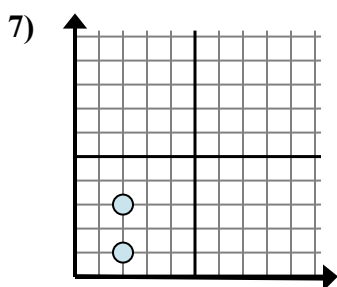
- A. 0 - 0
- B. 0 - 0
- C. 0 - 1
- D. 6 - 1



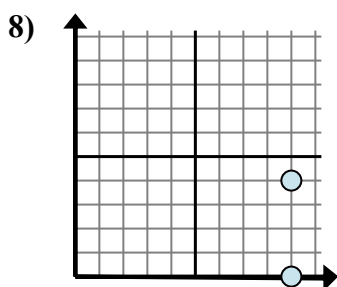
- A. 0 - 6
- B. 0 - 0
- C. 6 - 5
- D. 6 - 0



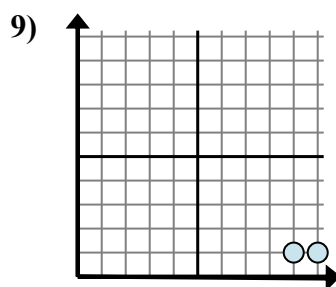
- A. 3 - 8
- B. 8 - 3
- C. 3 - 3
- D. 8 - 5



- A. 2 - 2
- B. 3 - 2
- C. 3 - 1
- D. 2 - 3



- A. 0 - 4
- B. 9 - 4
- C. 4 - 0
- D. 9 - 9



- A. 1 - 9
- B. 10 - 9
- C. 1 - 9
- D. 9 - 1

- 1. **A**
- 2. **D**
- 3. **A**
- 4. **D**
- 5. **C**
- 6. **D**
- 7. **C**
- 8. **C**
- 9. **B**