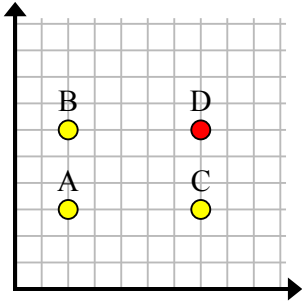




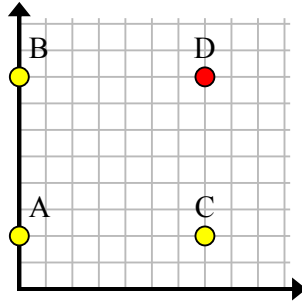


Tìm tọa độ điểm D để thành hình chữ nhật.

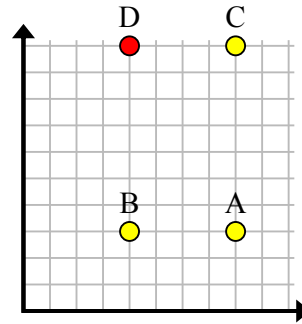
Vd)



1)



2)



**Câu trả lời**

Vd. (7, 6)

1. (7, 8)

2. (4, 10)

3. (1, 1)

4. (9, 1)

5. (5, 9)

6. (10, 7)

7. (9, 7)

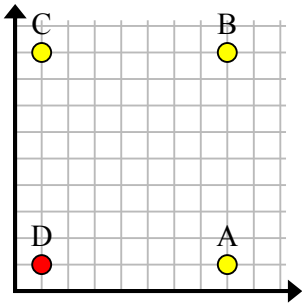
8. (9, 0)

9. (9, 9)

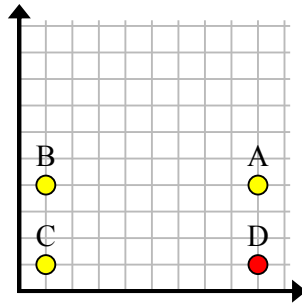
10. (7, 1)

11. (4, 4)

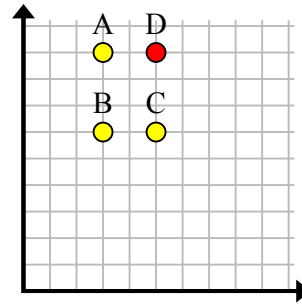
3)



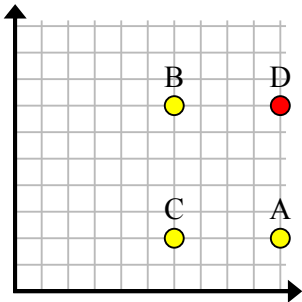
4)



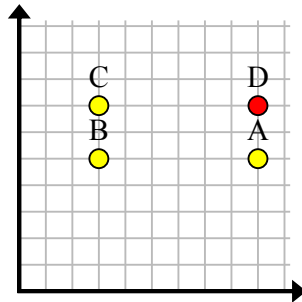
5)



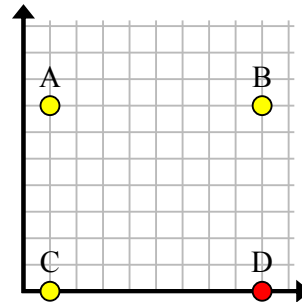
6)



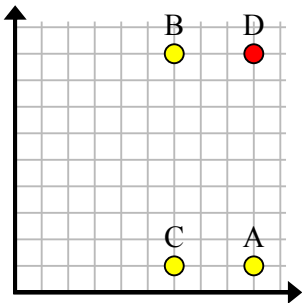
7)



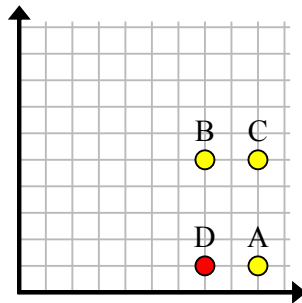
8)



9)



10)



11)

