





Dùng trục số để giải bài tính. Bài đầu tiên được đánh dấu cho bạn.

Câu trả lời




1. \_\_\_\_\_

2. \_\_\_\_\_




3. \_\_\_\_\_

4. \_\_\_\_\_



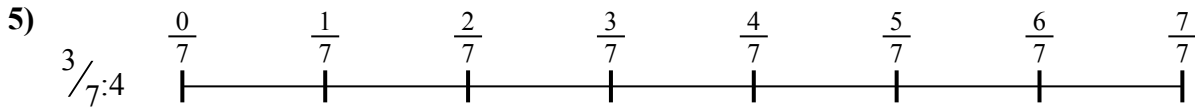
5. \_\_\_\_\_

6. \_\_\_\_\_



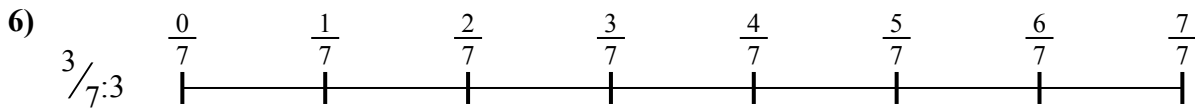


7. \_\_\_\_\_

8. \_\_\_\_\_



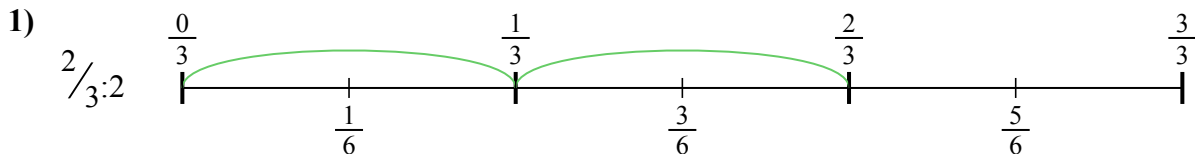
9. \_\_\_\_\_



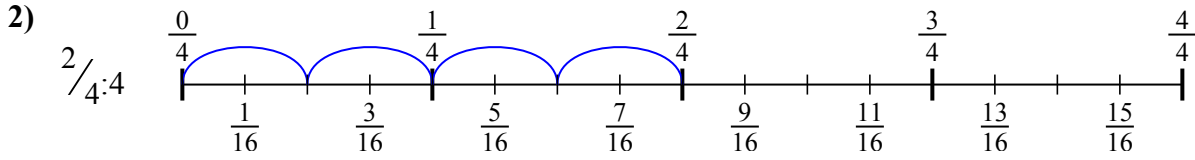


Dùng trục số để giải bài tính. Bài đầu tiên được đánh dấu cho bạn.

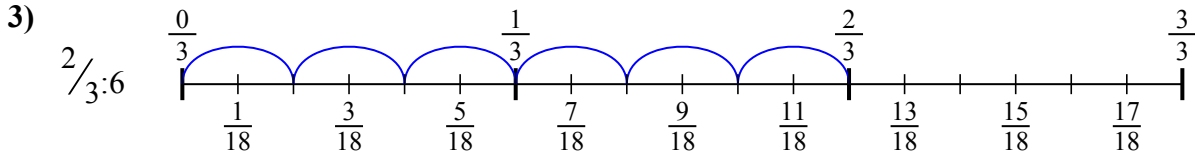
Câu trả lời



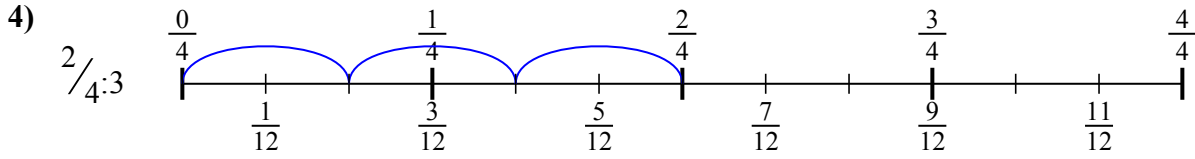
1.  $\frac{2}{6}$



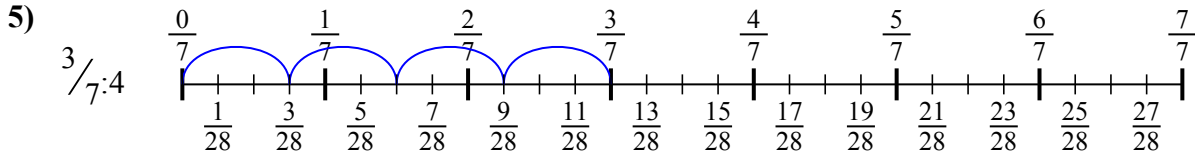
2.  $\frac{2}{16}$



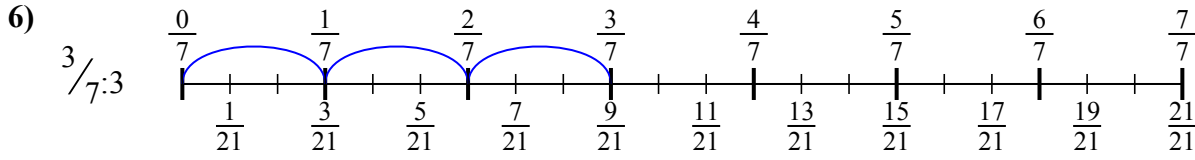
3.  $\frac{2}{18}$



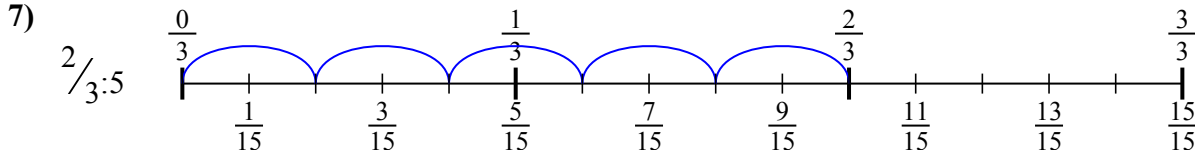
4.  $\frac{2}{12}$



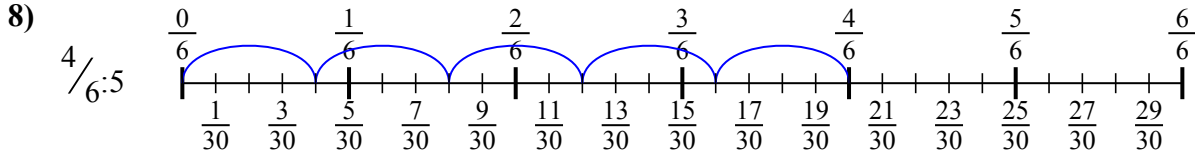
5.  $\frac{3}{28}$



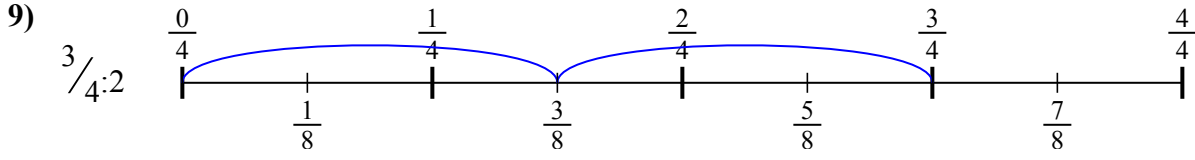
6.  $\frac{3}{21}$



7.  $\frac{2}{15}$



8.  $\frac{4}{30}$



9.  $\frac{3}{8}$



Dùng trục số để giải bài tính. Bài đầu tiên được đánh dấu cho bạn.

Câu trả lời

$\frac{4}{30}$

$\frac{2}{6}$

$\frac{2}{18}$

$\frac{2}{16}$

$\frac{2}{15}$

$\frac{2}{12}$


$\frac{3}{28}$

$\frac{3}{21}$

$\frac{3}{8}$


1. \_\_\_\_\_

2. \_\_\_\_\_




3. \_\_\_\_\_

4. \_\_\_\_\_




5. \_\_\_\_\_

6. \_\_\_\_\_



7. \_\_\_\_\_

8. \_\_\_\_\_



9. \_\_\_\_\_

