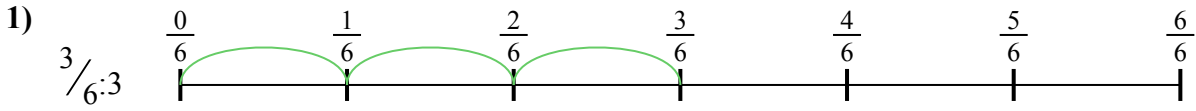





Dùng trục số để giải bài tính. Bài đầu tiên được đánh dấu cho bạn.

Câu trả lời



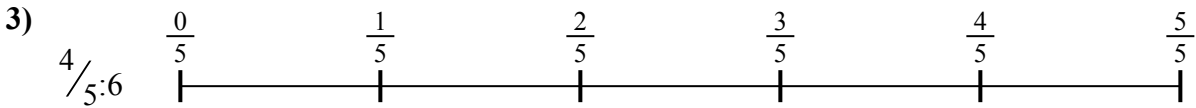
1. _____

2. _____



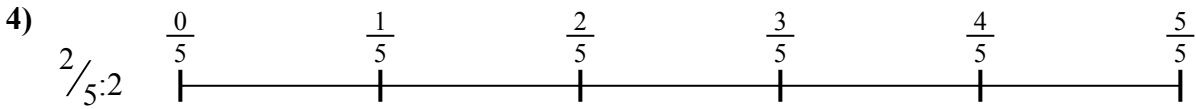
3. _____

4. _____



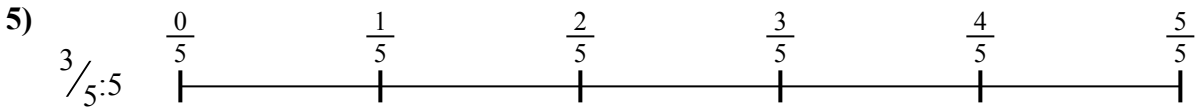
5. _____

6. _____




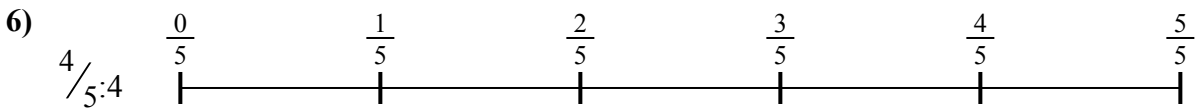


7. _____

8. _____



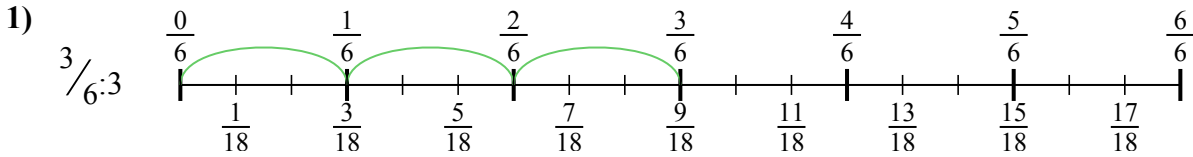
9. _____



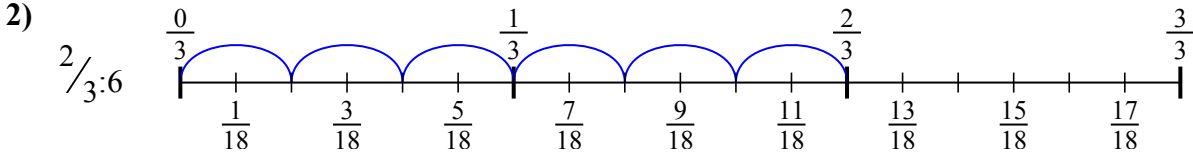


Dùng trục số để giải bài tính. Bài đầu tiên được đánh dấu cho bạn.

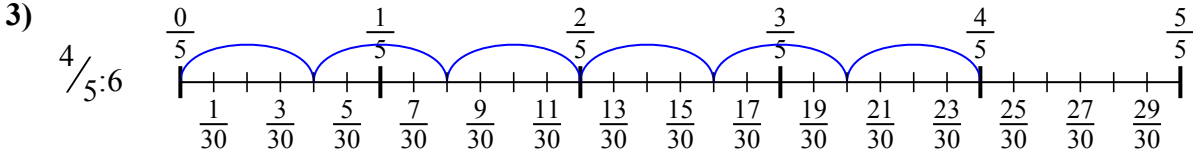
Câu trả lời



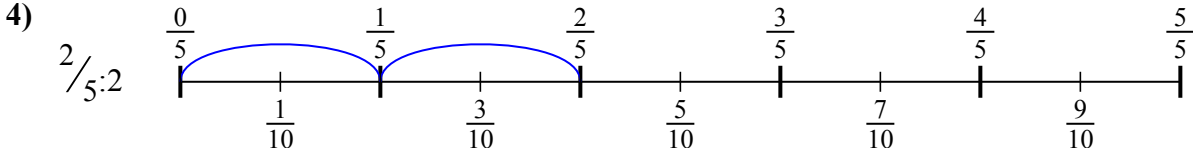
1. $\frac{3}{18}$



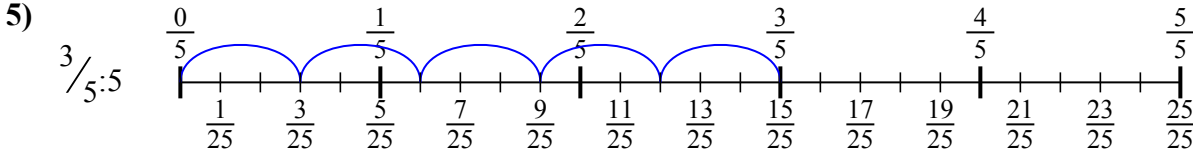
2. $\frac{2}{18}$



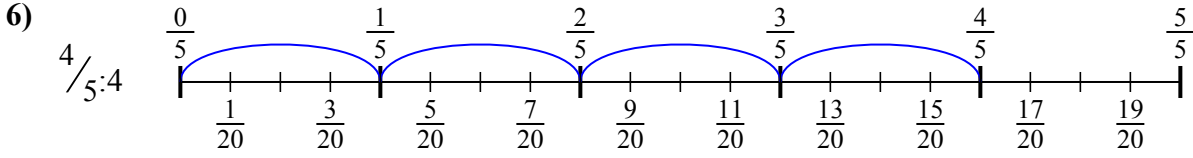
3. $\frac{4}{30}$



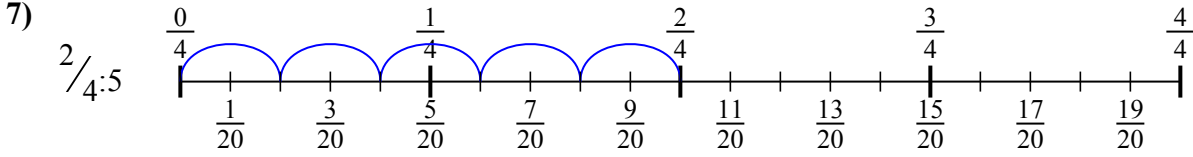
4. $\frac{2}{10}$



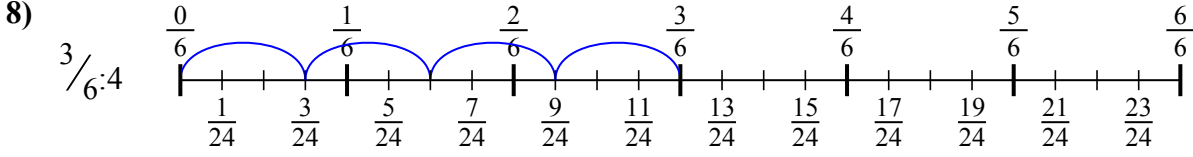
5. $\frac{3}{25}$



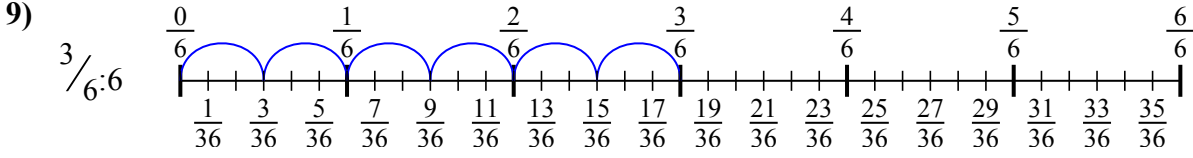
6. $\frac{4}{20}$



7. $\frac{2}{20}$



8. $\frac{3}{24}$



9. $\frac{3}{36}$



Dùng trục số để giải bài tính. Bài đầu tiên được đánh dấu cho bạn.

Câu trả lời

$3/24$

$2/20$

$4/20$

$2/18$

$2/10$

$3/18$

$4/30$

$3/25$

$3/36$

1. _____

2. _____

3. _____

4. _____

5. _____

6. _____

7. _____

8. _____

9. _____

