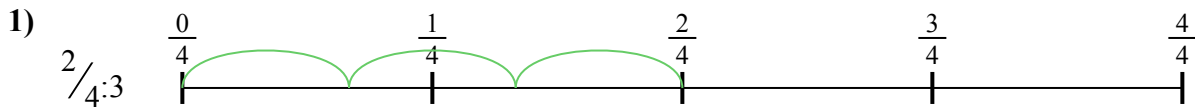




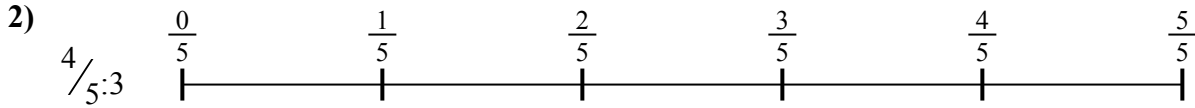
Dùng trục số để giải bài tính. Bài đầu tiên được đánh dấu cho bạn.

Câu trả lời



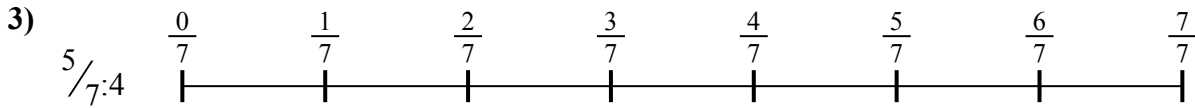
1. _____

2. _____




3. _____

4. _____



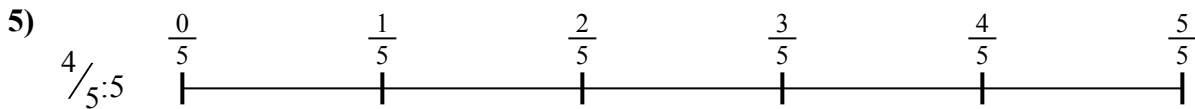
5. _____

6. _____

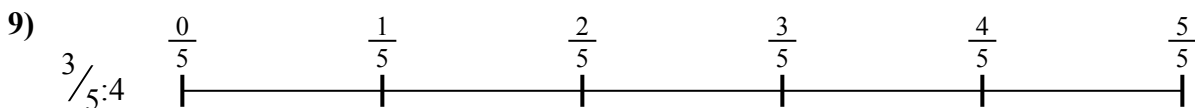
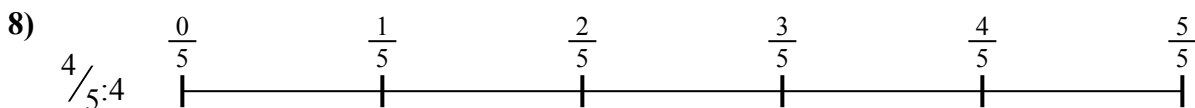


7. _____

8. _____



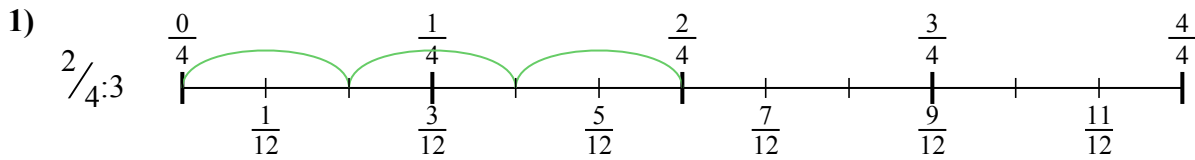
9. _____



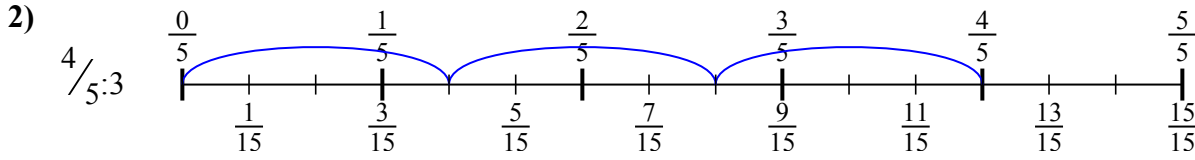


Dùng trục số để giải bài tính. Bài đầu tiên được đánh dấu cho bạn.

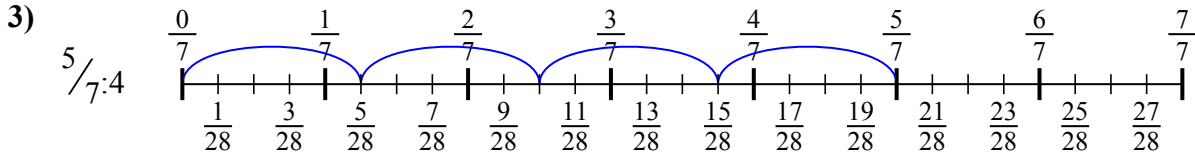
Câu trả lời



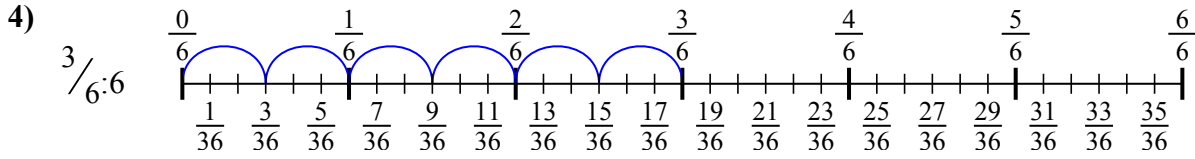
1. $\frac{2}{12}$



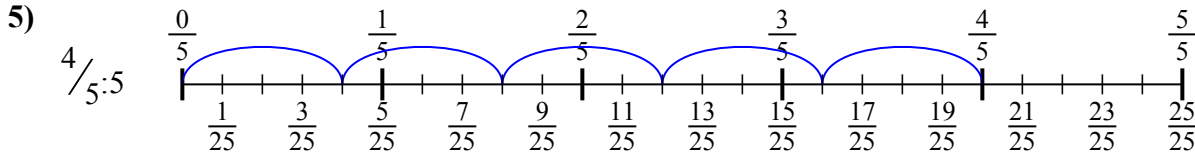
2. $\frac{4}{15}$



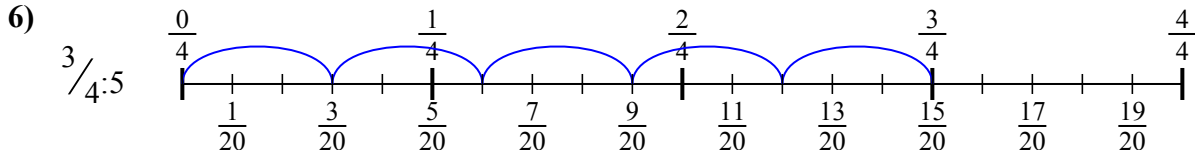
3. $\frac{5}{28}$



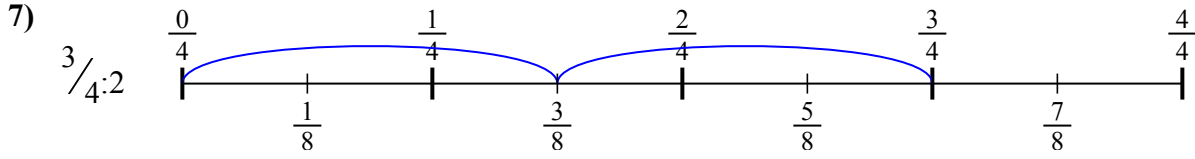
4. $\frac{3}{36}$



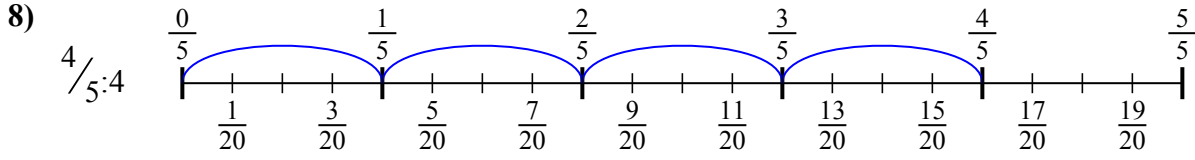
5. $\frac{4}{25}$



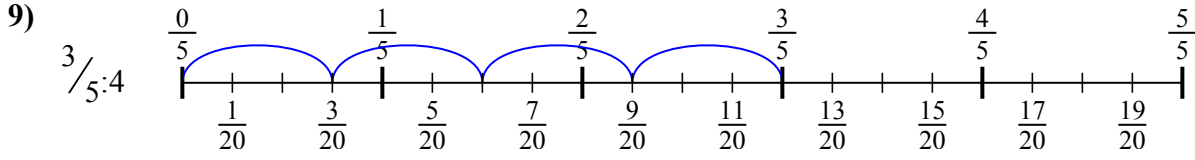
6. $\frac{3}{20}$



7. $\frac{3}{8}$



8. $\frac{4}{20}$



9. $\frac{3}{20}$



Dùng trục số để giải bài tính. Bài đầu tiên được đánh dấu cho bạn.

Câu trả lời

$3/20$

$3/20$

$3/36$

$4/15$

$4/20$

$3/8$

$2/12$

$4/25$

$5/28$

1. _____

2. _____

3. _____

4. _____

5. _____

6. _____

7. _____

8. _____

9. _____

