





Dùng trục số để giải bài tính. Bài đầu tiên được đánh dấu cho bạn.

Câu trả lời




1. \_\_\_\_\_

2. \_\_\_\_\_




3. \_\_\_\_\_

4. \_\_\_\_\_



5. \_\_\_\_\_

6. \_\_\_\_\_


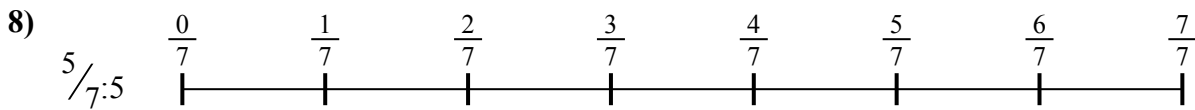

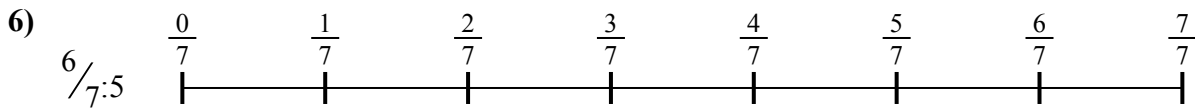


7. \_\_\_\_\_

8. \_\_\_\_\_



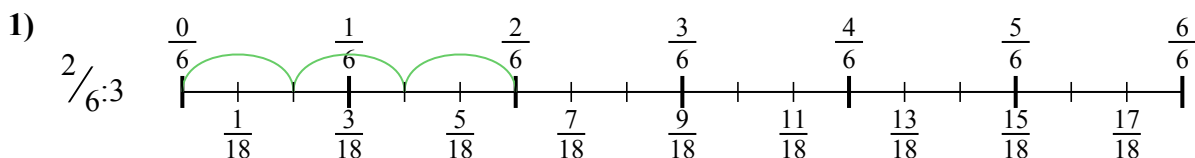
9. \_\_\_\_\_



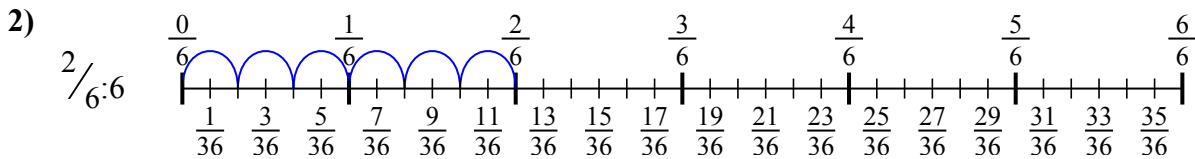


Dùng trục số để giải bài tính. Bài đầu tiên được đánh dấu cho bạn.

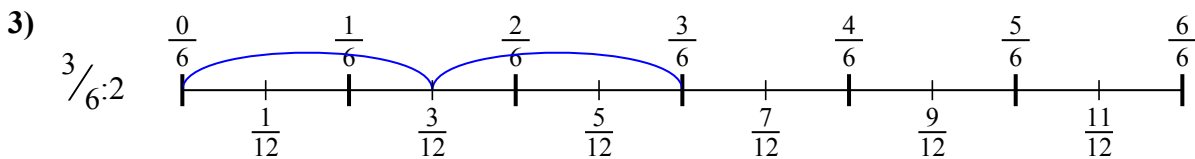
Câu trả lời



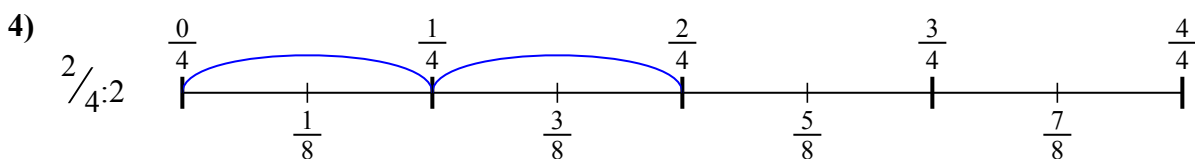
1.  $\frac{2}{18}$



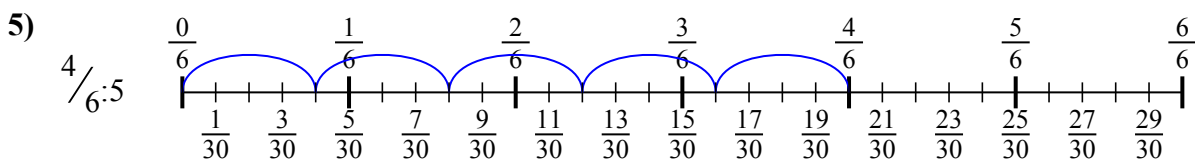
2.  $\frac{2}{36}$



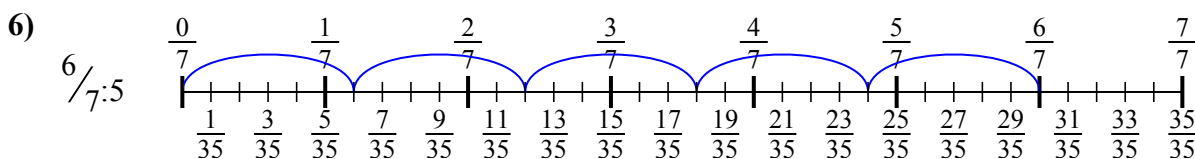
3.  $\frac{3}{12}$



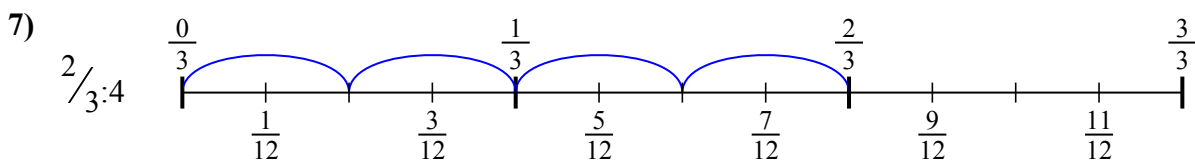
4.  $\frac{2}{8}$



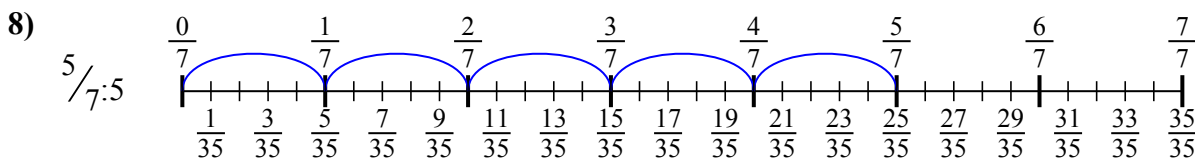
5.  $\frac{4}{30}$



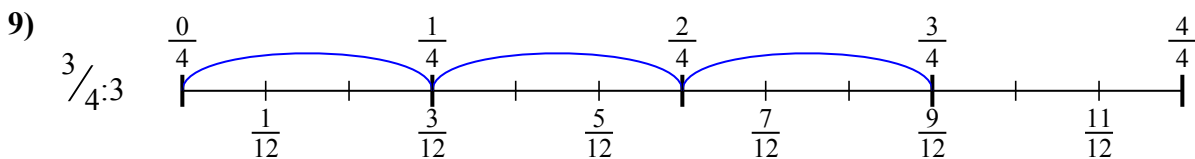
6.  $\frac{6}{35}$



7.  $\frac{2}{12}$



8.  $\frac{5}{35}$



9.  $\frac{3}{12}$



Dùng trục số để giải bài tính. Bài đầu tiên được đánh dấu cho bạn.

Câu trả lời

$2/18$

$2/8$

$2/36$

$3/12$

$6/35$

$5/35$

$4/30$

$2/12$

$3/12$

1. \_\_\_\_\_

2. \_\_\_\_\_

3. \_\_\_\_\_

4. \_\_\_\_\_

5. \_\_\_\_\_

6. \_\_\_\_\_

7. \_\_\_\_\_

8. \_\_\_\_\_

9. \_\_\_\_\_

