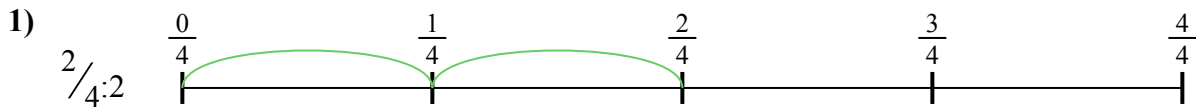




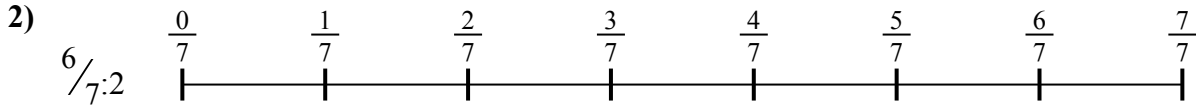
Dùng trục số để giải bài tính. Bài đầu tiên được đánh dấu cho bạn.

Câu trả lời



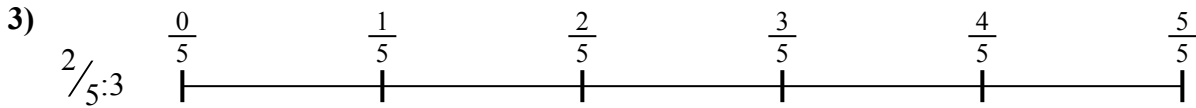
1. \_\_\_\_\_

2. \_\_\_\_\_




3. \_\_\_\_\_

4. \_\_\_\_\_




5. \_\_\_\_\_

6. \_\_\_\_\_

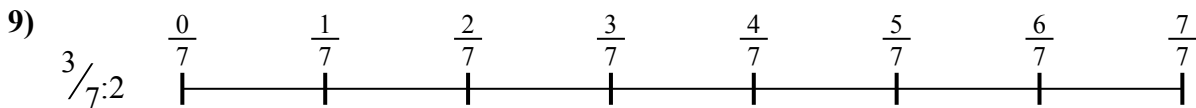
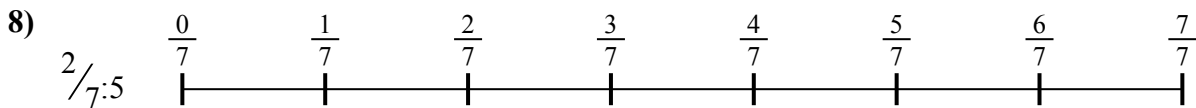



7. \_\_\_\_\_

8. \_\_\_\_\_



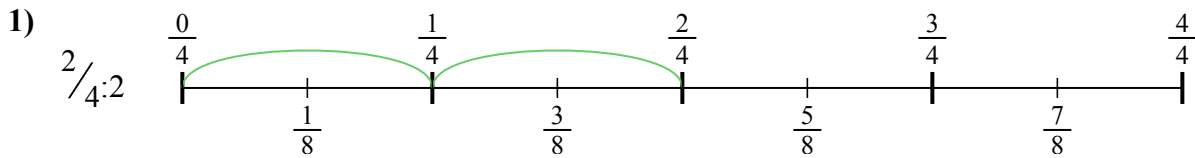
9. \_\_\_\_\_



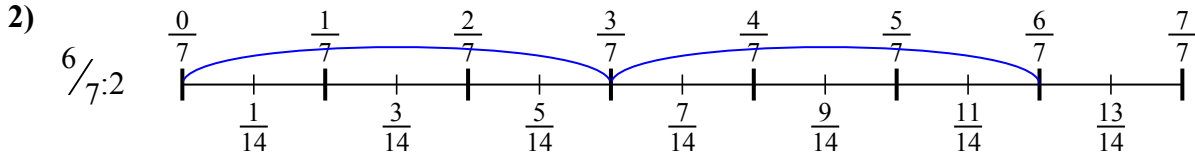


Dùng trục số để giải bài tính. Bài đầu tiên được đánh dấu cho bạn.

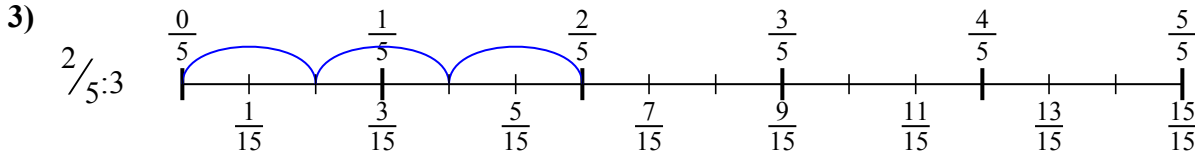
Câu trả lời



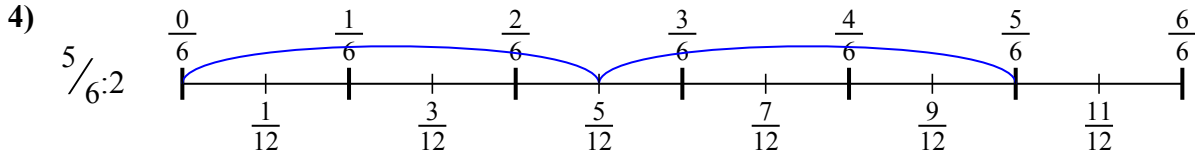
1.  $\frac{2}{8}$



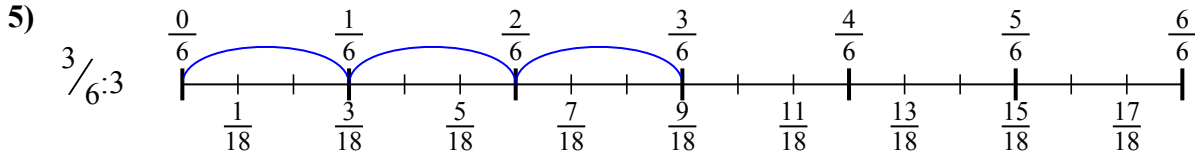
2.  $\frac{6}{14}$



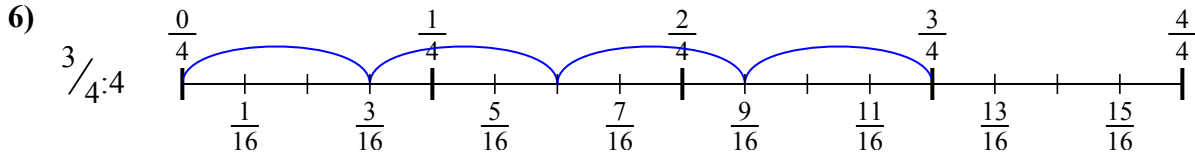
3.  $\frac{2}{15}$



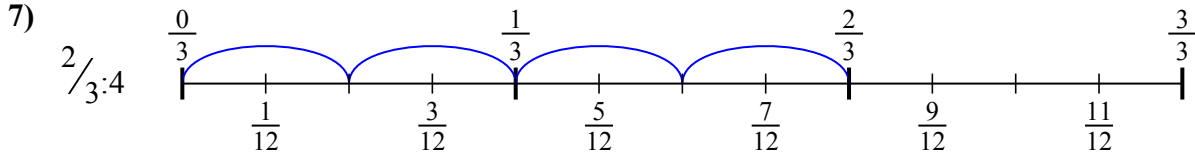
4.  $\frac{5}{12}$



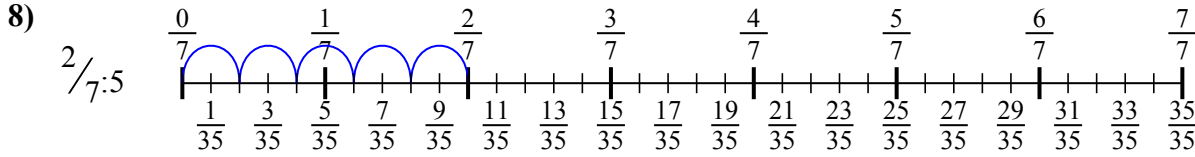
5.  $\frac{3}{18}$



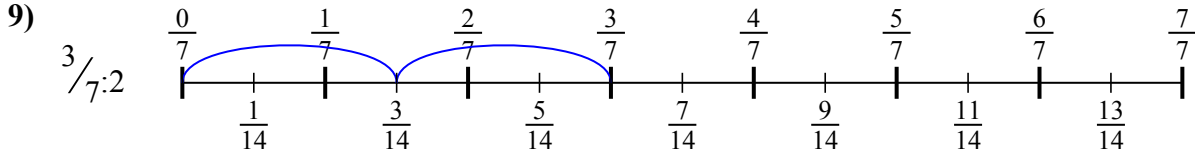
6.  $\frac{3}{16}$



7.  $\frac{2}{12}$



8.  $\frac{2}{35}$



9.  $\frac{3}{14}$



Dùng trục số để giải bài tính. Bài đầu tiên được đánh dấu cho bạn.

Câu trả lời

$\frac{2}{15}$

$\frac{2}{8}$

$\frac{2}{35}$

$\frac{5}{12}$

$\frac{2}{12}$

$\frac{3}{18}$

$\frac{6}{14}$

$\frac{3}{14}$

$\frac{3}{16}$

1. \_\_\_\_\_

2. \_\_\_\_\_

3. \_\_\_\_\_

4. \_\_\_\_\_

5. \_\_\_\_\_

6. \_\_\_\_\_

7. \_\_\_\_\_

8. \_\_\_\_\_

9. \_\_\_\_\_

