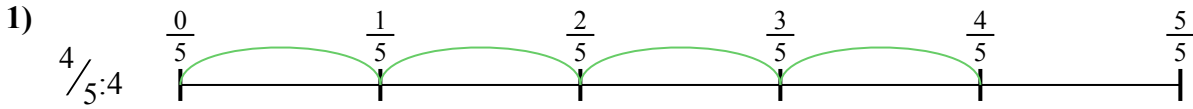




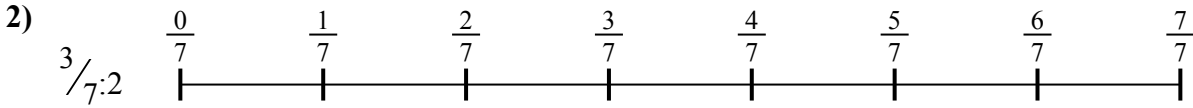
Dùng trục số để giải bài tính. Bài đầu tiên được đánh dấu cho bạn.

Câu trả lời



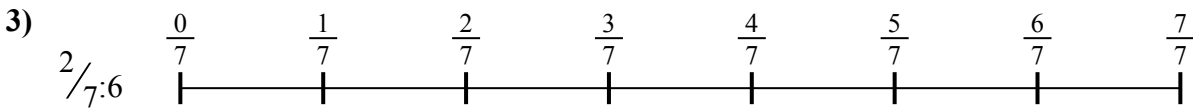
1. _____

2. _____



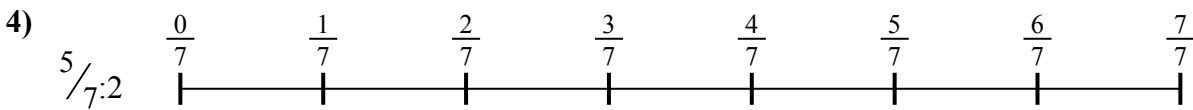
3. _____

4. _____




5. _____

6. _____

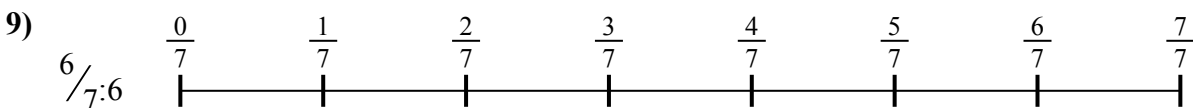
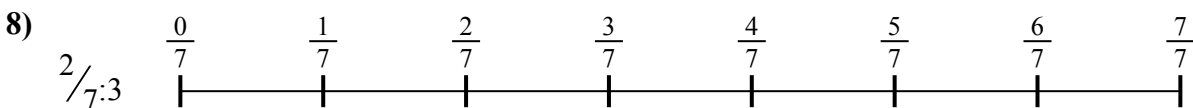
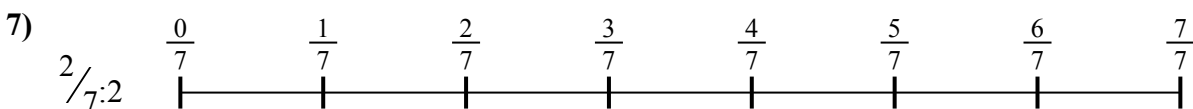


7. _____

8. _____



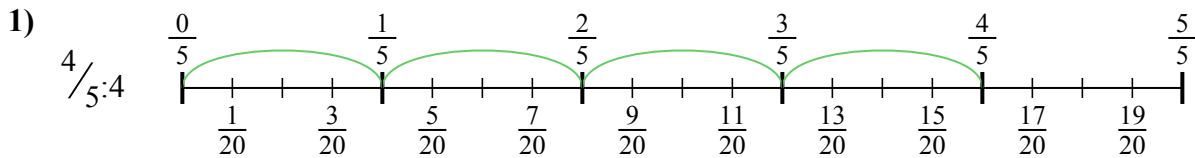
9. _____



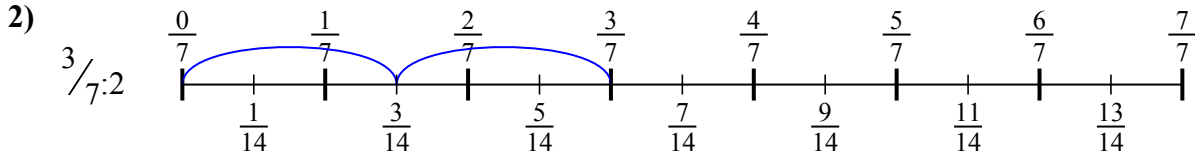


Dùng trục số để giải bài tính. Bài đầu tiên được đánh dấu cho bạn.

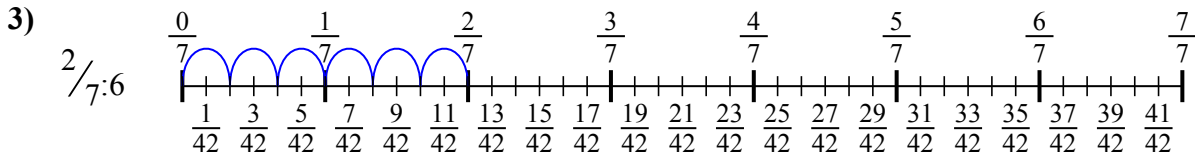
Câu trả lời



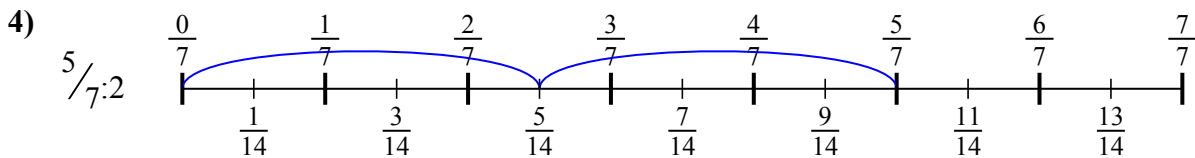
1. $\frac{4}{20}$



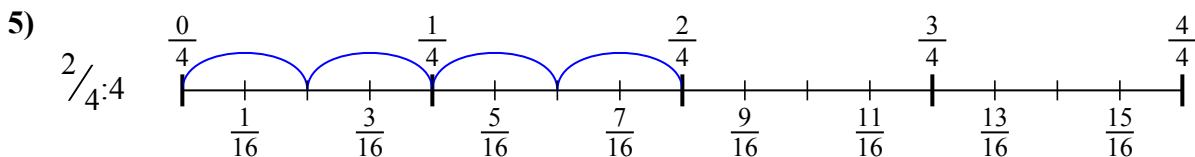
2. $\frac{3}{14}$



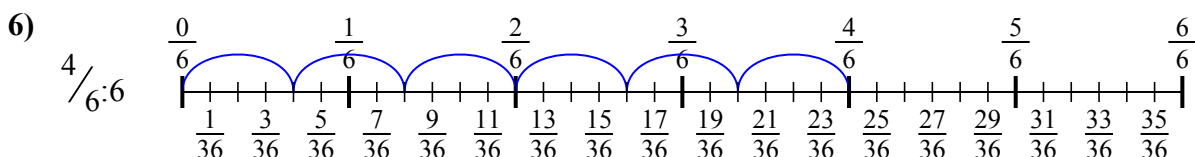
3. $\frac{2}{42}$



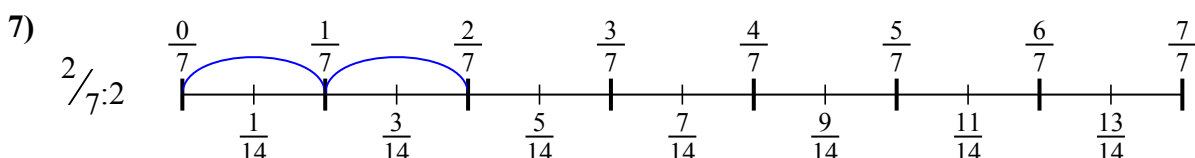
4. $\frac{5}{14}$



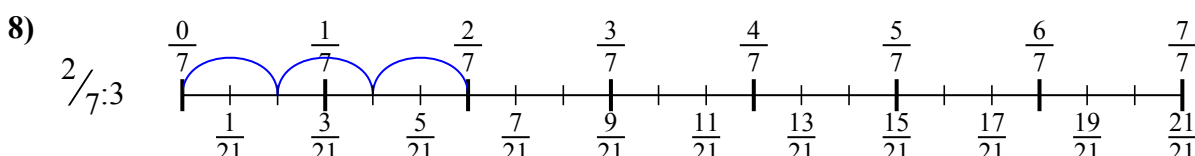
5. $\frac{2}{16}$



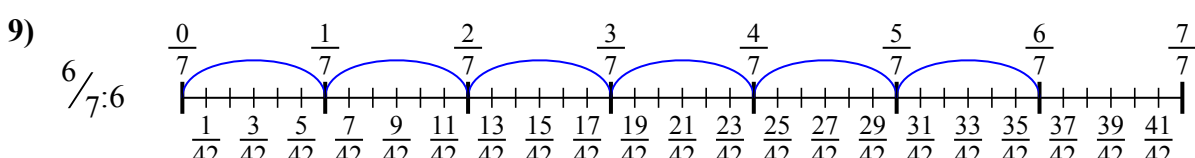
6. $\frac{4}{36}$



7. $\frac{2}{14}$



8. $\frac{2}{21}$



9. $\frac{6}{42}$



Dùng trục số để giải bài tính. Bài đầu tiên được đánh dấu cho bạn.

Câu trả lời

$2/21$

$4/20$

$3/14$

$4/36$

$2/16$

$6/42$

$2/14$

$5/14$

$2/42$

1. _____

2. _____

3. _____

4. _____

5. _____

6. _____

7. _____

8. _____

9. _____

