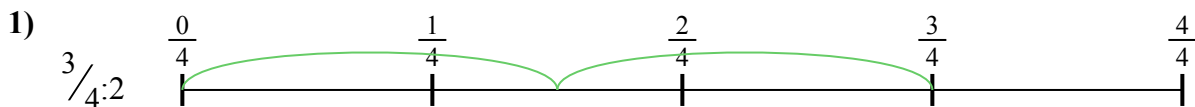




Dùng trục số để giải bài tính. Bài đầu tiên được đánh dấu cho bạn.

Câu trả lời



1. _____

2. _____



3. _____

4. _____



5. _____

6. _____


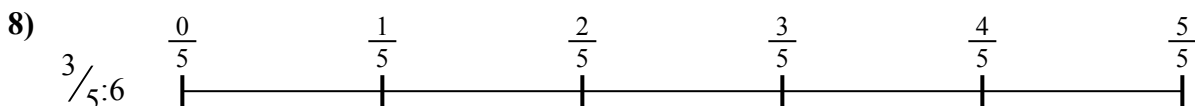
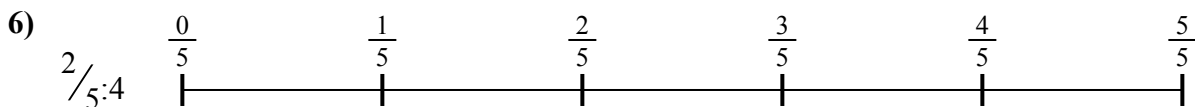


7. _____

8. _____



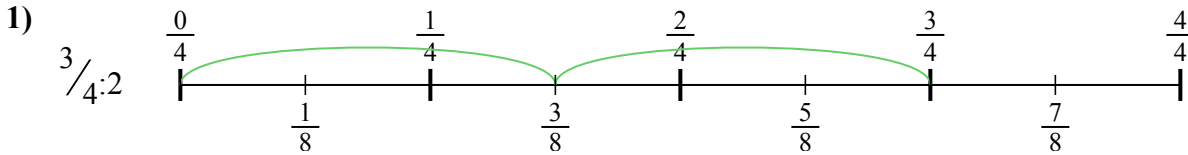
9. _____



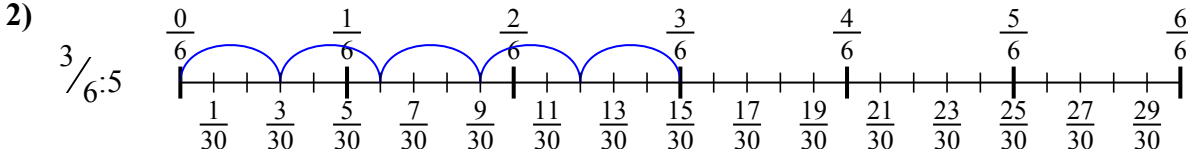


Dùng trục số để giải bài tính. Bài đầu tiên được đánh dấu cho bạn.

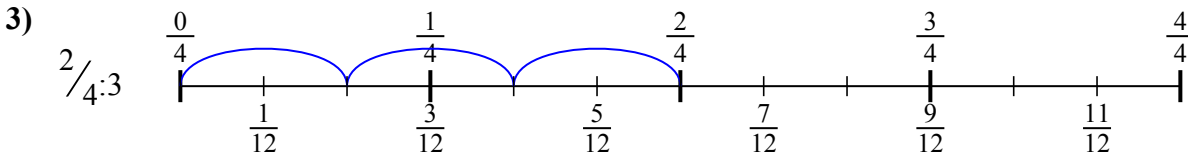
Câu trả lời



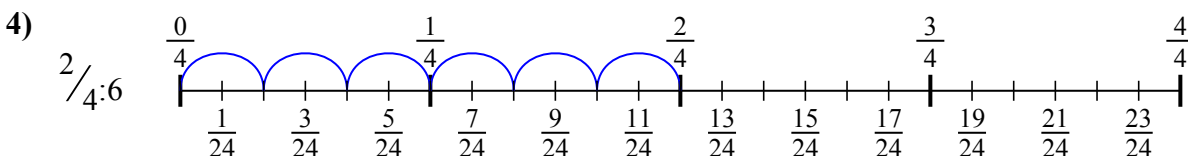
1. $\frac{3}{8}$



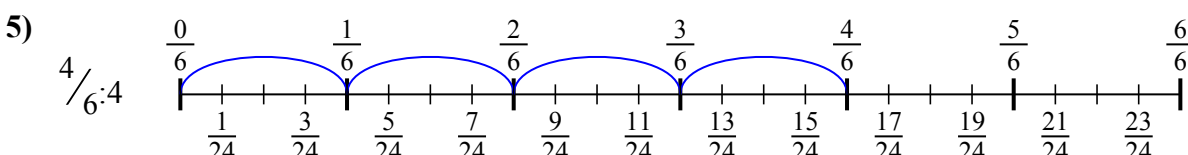
2. $\frac{3}{30}$



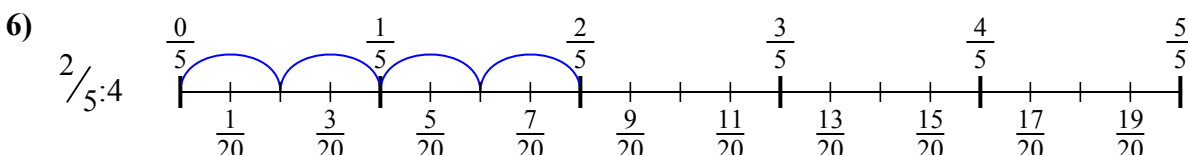
3. $\frac{2}{12}$



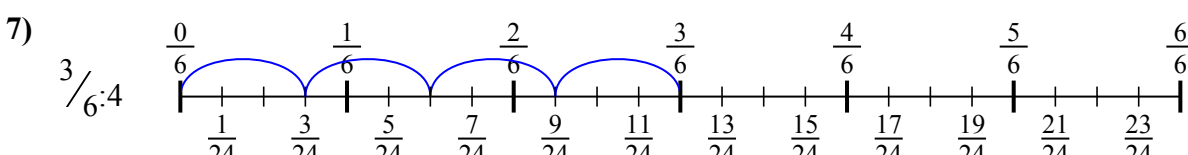
4. $\frac{2}{24}$



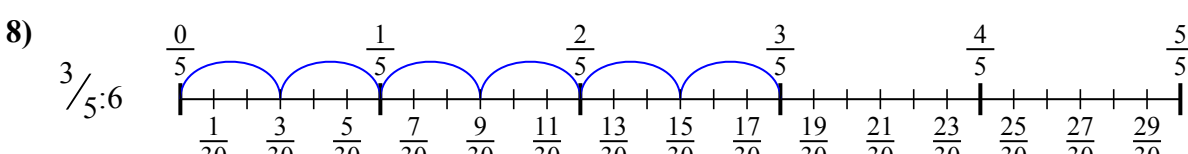
5. $\frac{4}{24}$



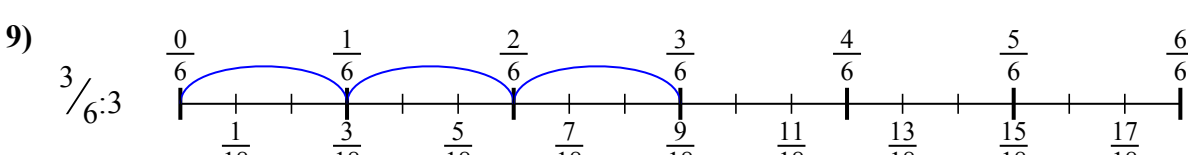
6. $\frac{2}{20}$



7. $\frac{3}{24}$



8. $\frac{3}{30}$



9. $\frac{3}{18}$



Dùng trục số để giải bài tính. Bài đầu tiên được đánh dấu cho bạn.

Câu trả lời

$3/24$

$3/30$

$2/20$

$3/30$

$4/24$

$2/12$

$3/8$

$2/24$

$3/18$

1. _____

2. _____

3. _____

4. _____

5. _____

6. _____

7. _____

8. _____

9. _____

