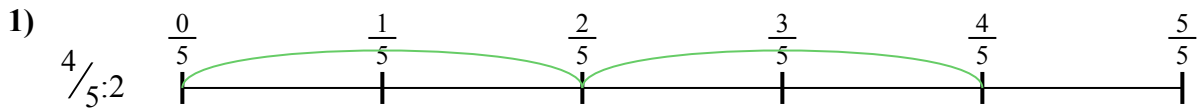





Dùng trục số để giải bài tính. Bài đầu tiên được đánh dấu cho bạn.

Câu trả lời




1. _____

2. _____




3. _____

4. _____



5. _____

6. _____


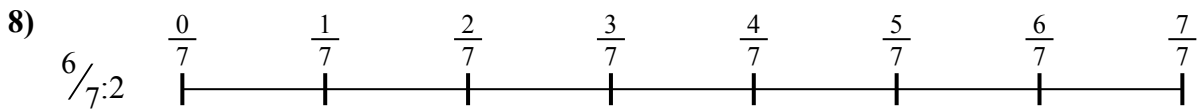

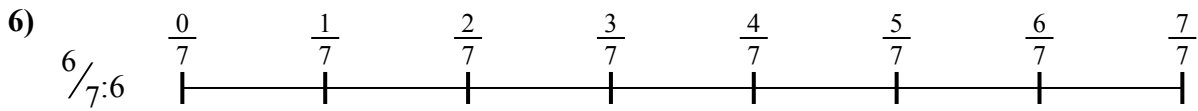


7. _____

8. _____



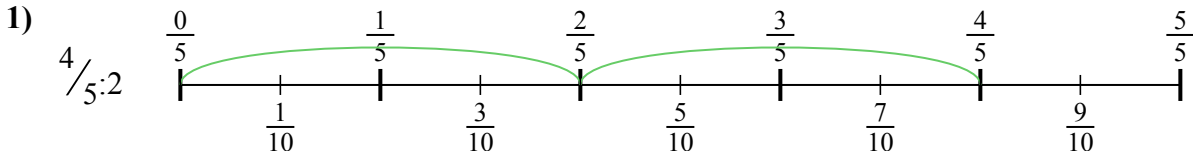
9. _____



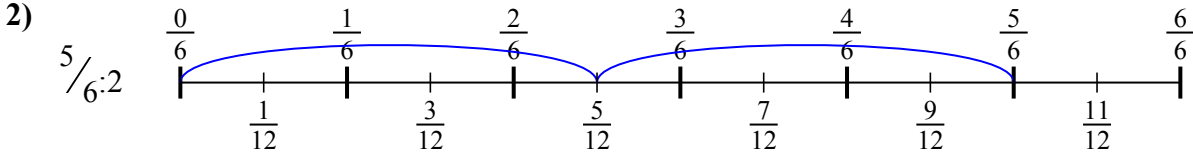


Dùng trục số để giải bài tính. Bài đầu tiên được đánh dấu cho bạn.

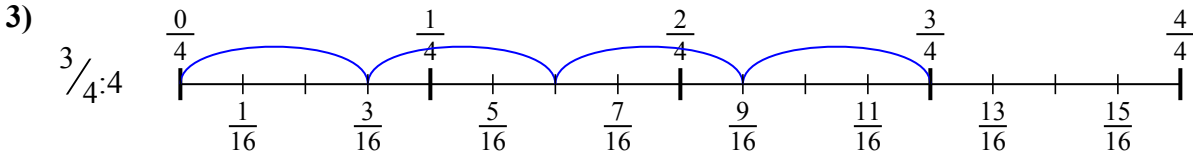
Câu trả lời



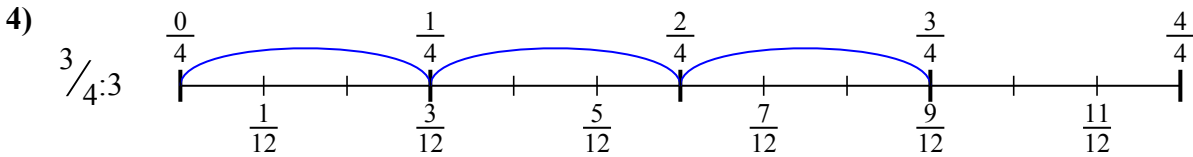
1. $\frac{4}{10}$



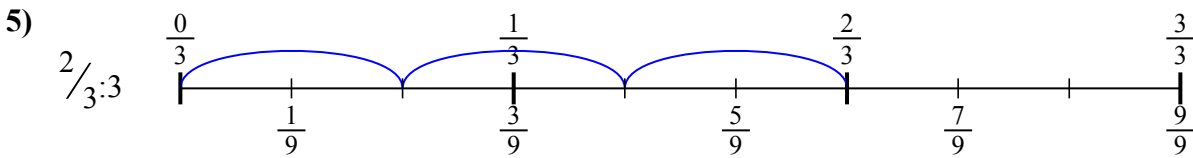
2. $\frac{5}{12}$



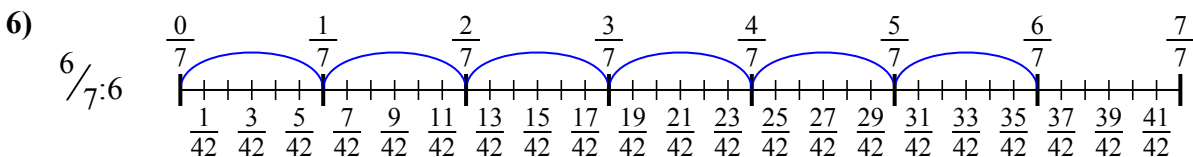
3. $\frac{3}{16}$



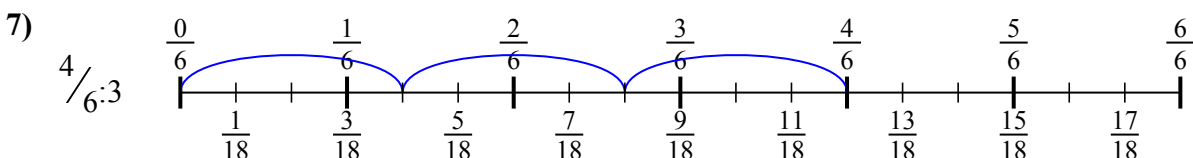
4. $\frac{3}{12}$



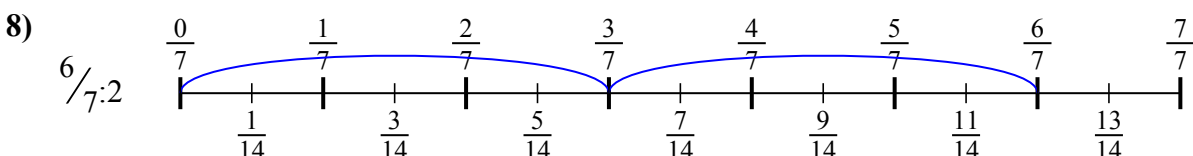
5. $\frac{2}{9}$



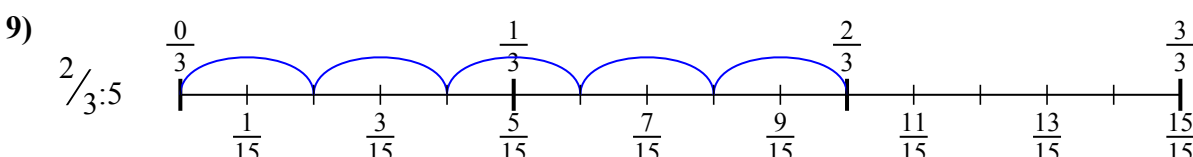
6. $\frac{6}{42}$



7. $\frac{4}{18}$



8. $\frac{6}{14}$



9. $\frac{2}{15}$



Dùng trục số để giải bài tính. Bài đầu tiên được đánh dấu cho bạn.

Câu trả lời

$6/14$

$4/10$

$3/12$

$2/9$

$2/15$

$6/42$

$4/18$

$3/16$

$5/12$

1. _____

2. _____

3. _____

4. _____

5. _____

6. _____

7. _____

8. _____

9. _____

