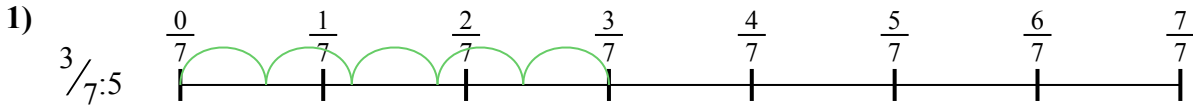





Dùng trục số để giải bài tính. Bài đầu tiên được đánh dấu cho bạn.

Câu trả lời




1. _____

2. _____



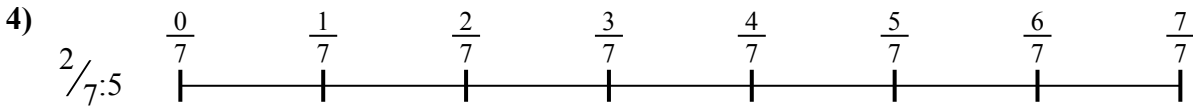
3. _____

4. _____




5. _____

6. _____





7. _____

8. _____



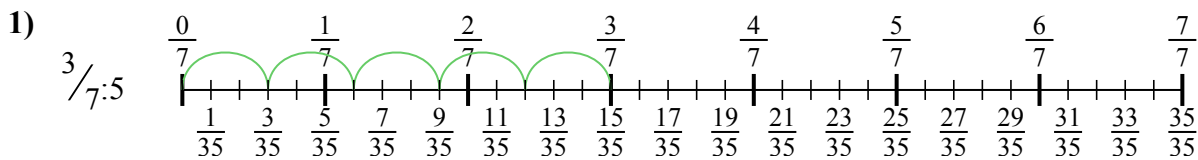
9. _____



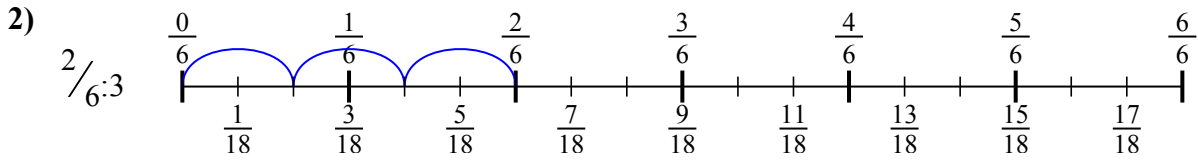


Dùng trục số để giải bài tính. Bài đầu tiên được đánh dấu cho bạn.

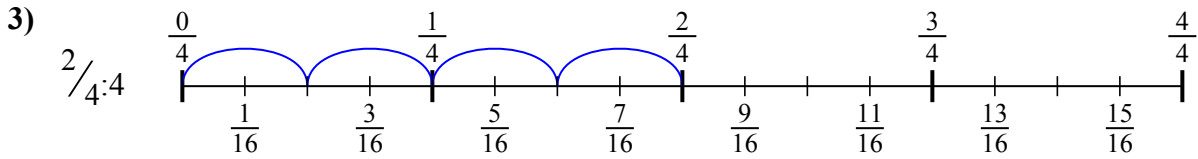
Câu trả lời



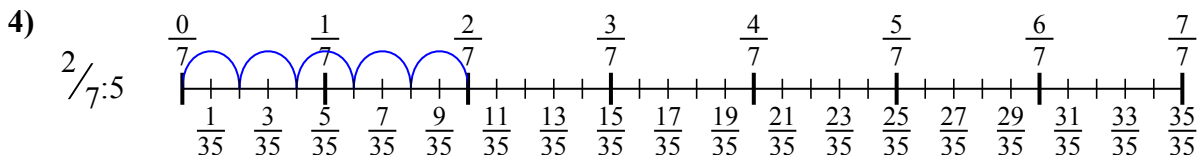
1. $\frac{3}{35}$



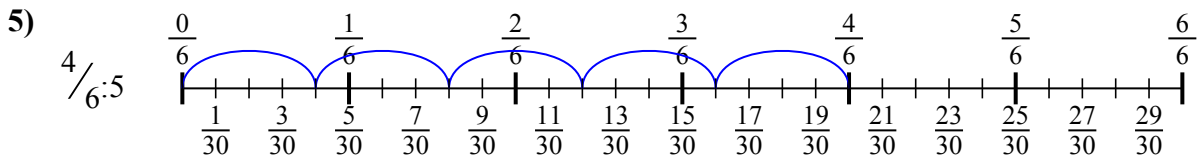
2. $\frac{2}{18}$



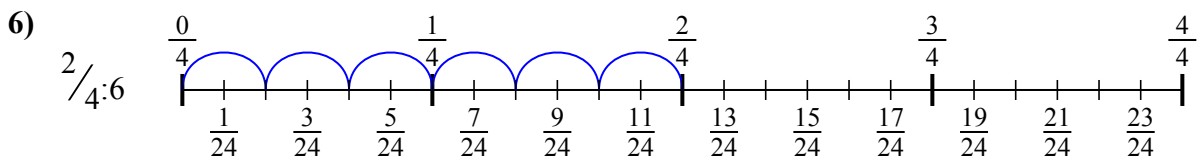
3. $\frac{2}{16}$



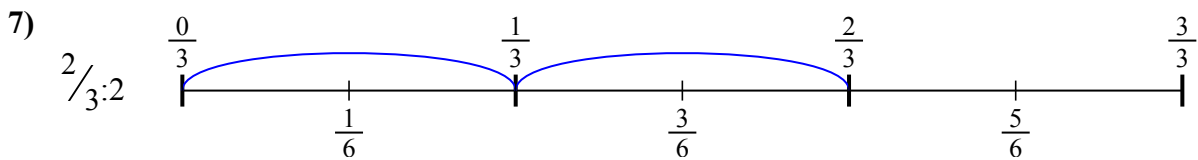
4. $\frac{2}{35}$



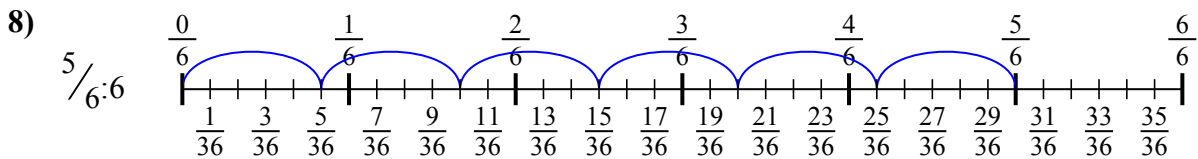
5. $\frac{4}{30}$



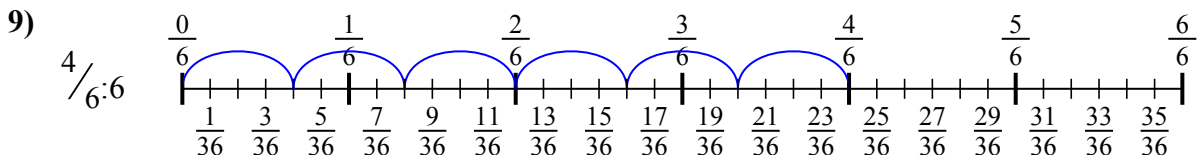
6. $\frac{2}{24}$



7. $\frac{2}{6}$



8. $\frac{5}{36}$



9. $\frac{4}{36}$



Dùng trục số để giải bài tính. Bài đầu tiên được đánh dấu cho bạn.

Câu trả lời

$2/18$

$2/24$

$5/36$

$2/16$

$4/36$

$3/35$

$2/35$

$4/30$

$2/6$

1. _____

2. _____

3. _____

4. _____

5. _____

6. _____

7. _____

8. _____

9. _____

