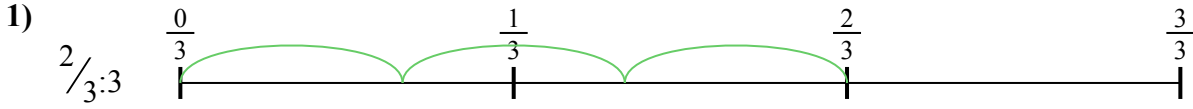





Dùng trục số để giải bài tính. Bài đầu tiên được đánh dấu cho bạn.

Câu trả lời




1. _____

2. _____




3. _____

4. _____



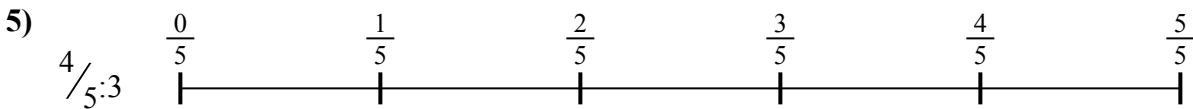
5. _____

6. _____

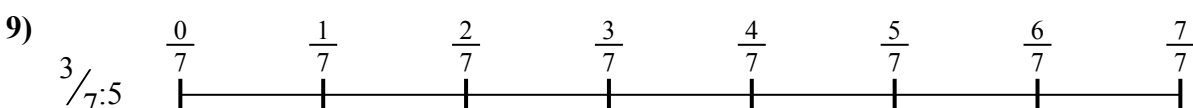
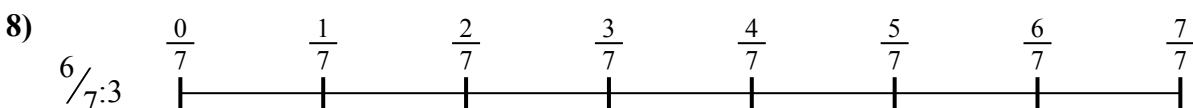
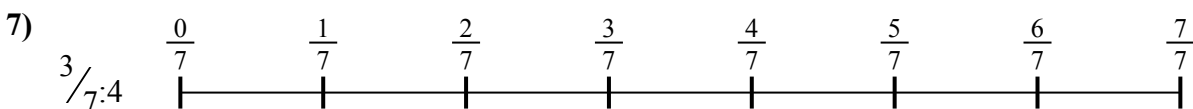


7. _____

8. _____



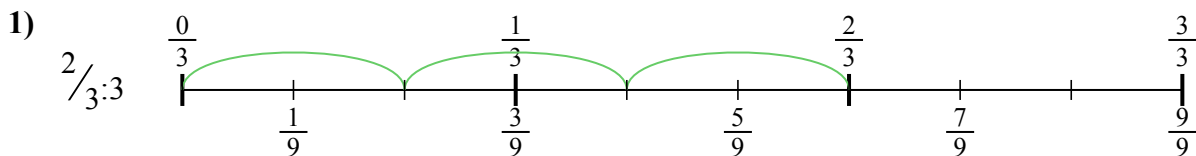
9. _____



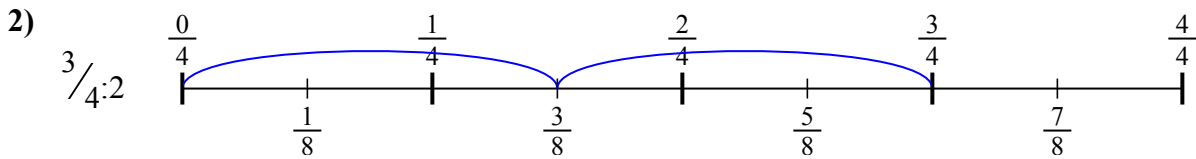


Dùng trục số để giải bài tính. Bài đầu tiên được đánh dấu cho bạn.

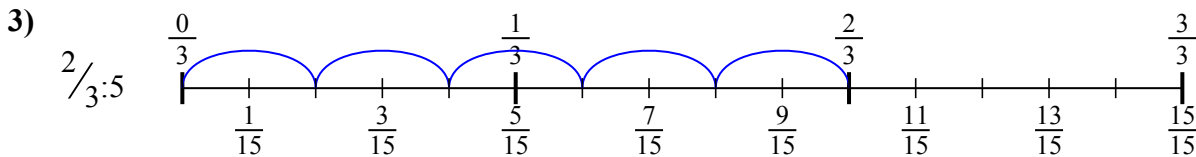
Câu trả lời



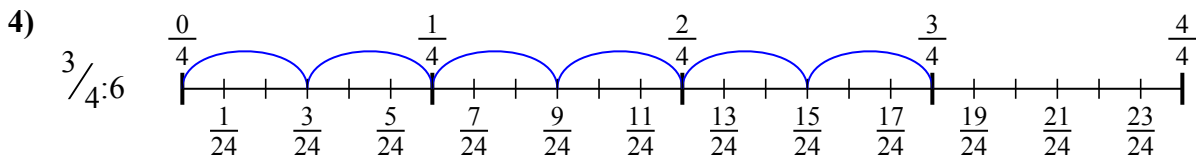
1. $\frac{2}{9}$



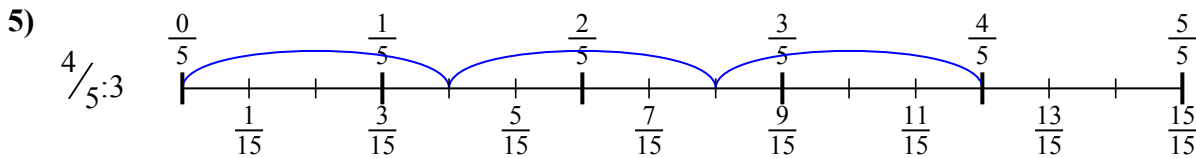
2. $\frac{3}{8}$



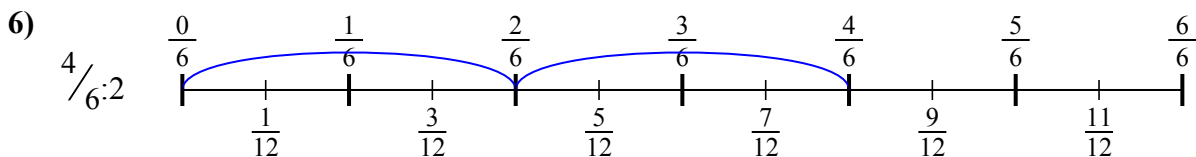
3. $\frac{2}{15}$



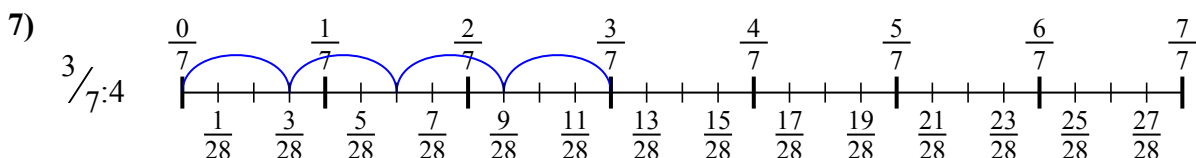
4. $\frac{3}{24}$



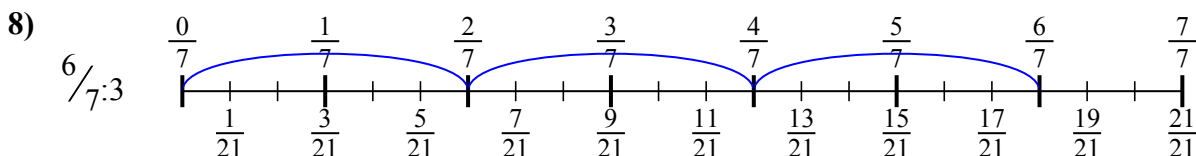
5. $\frac{4}{15}$



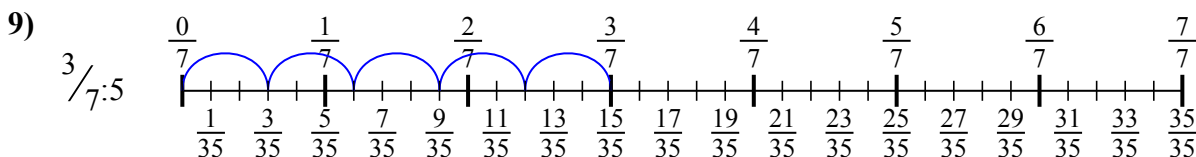
6. $\frac{4}{12}$



7. $\frac{3}{28}$



8. $\frac{6}{21}$



9. $\frac{3}{35}$



Dùng trục số để giải bài tính. Bài đầu tiên được đánh dấu cho bạn.

Câu trả lời

$\frac{3}{24}$

$\frac{2}{15}$

$\frac{3}{28}$

$\frac{2}{9}$

$\frac{6}{21}$

$\frac{4}{12}$

$\frac{3}{8}$

$\frac{3}{35}$

$\frac{4}{15}$

1. _____

2. _____

3. _____

4. _____

5. _____

6. _____

7. _____

8. _____

9. _____

