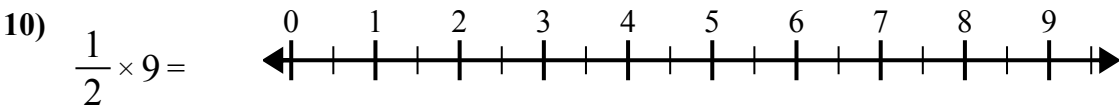
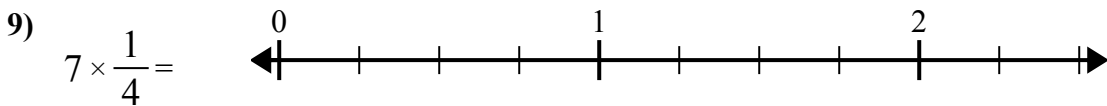
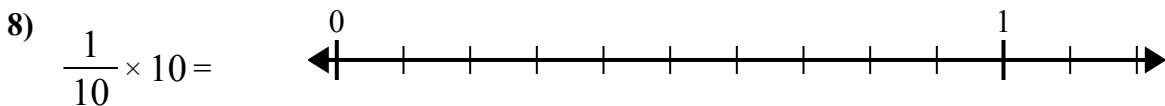
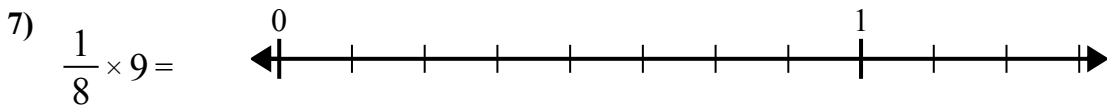
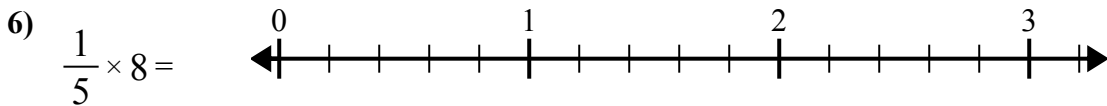
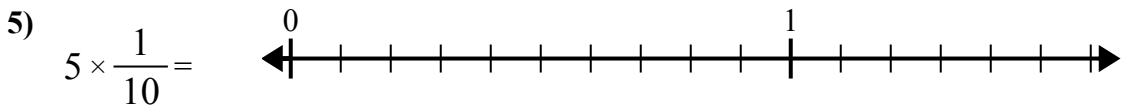
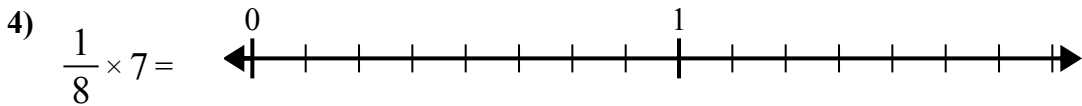
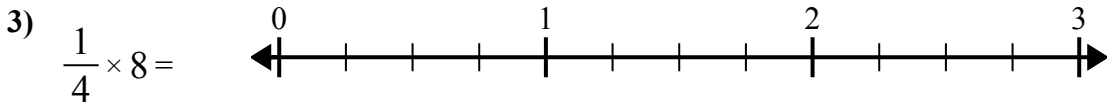
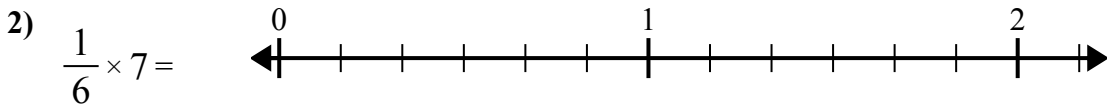
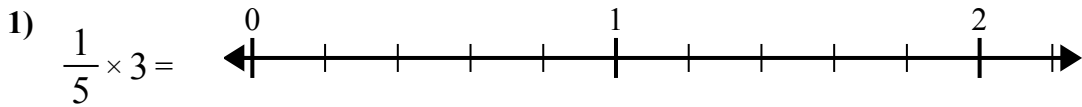




Sử dụng dãy số để giải quyết.

**Câu trả lời**

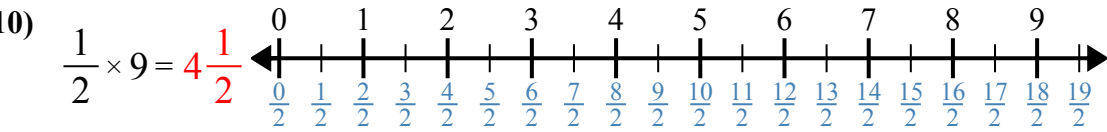
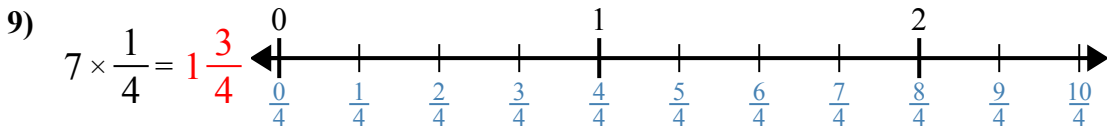
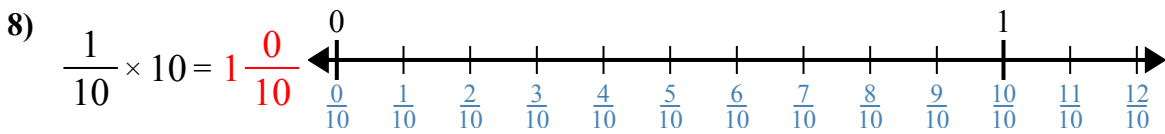
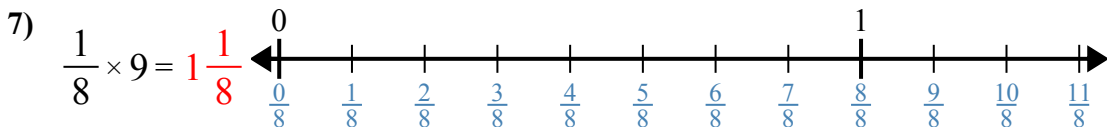
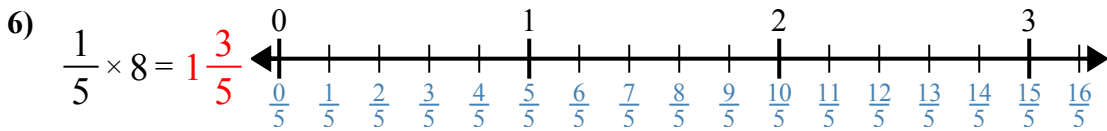
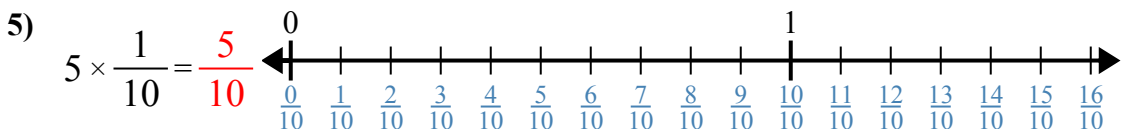
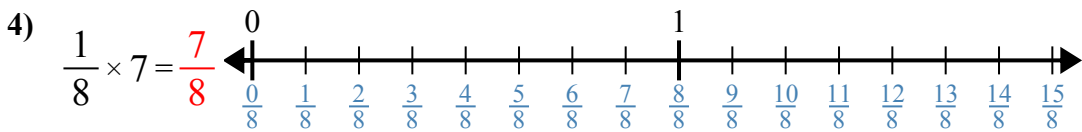
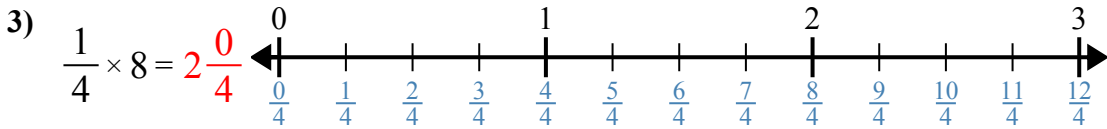
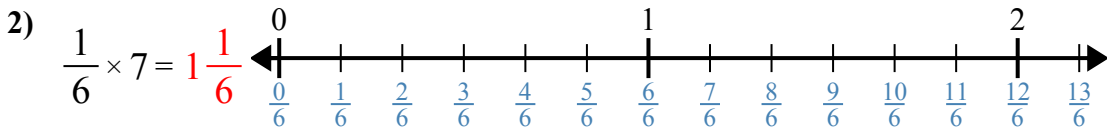
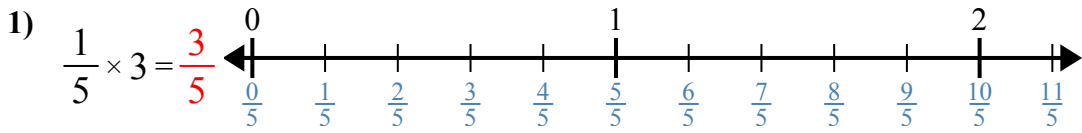


1. \_\_\_\_\_
2. \_\_\_\_\_
3. \_\_\_\_\_
4. \_\_\_\_\_
5. \_\_\_\_\_
6. \_\_\_\_\_
7. \_\_\_\_\_
8. \_\_\_\_\_
9. \_\_\_\_\_
10. \_\_\_\_\_



Sử dụng dãy số để giải quyết.

**Câu trả lời**



1.  $\frac{3}{5}$
2.  $1\frac{1}{6}$
3.  $2\frac{0}{4}$
4.  $\frac{7}{8}$
5.  $\frac{5}{10}$
6.  $1\frac{3}{5}$
7.  $1\frac{1}{8}$
8.  $1\frac{0}{10}$
9.  $1\frac{3}{4}$
10.  $4\frac{1}{2}$



Sử dụng dãy số để giải quyết.

**Câu trả lời**

$1\frac{3}{5}$

$2\frac{0}{4}$

$\frac{7}{8}$

$\frac{3}{5}$

$1\frac{1}{6}$

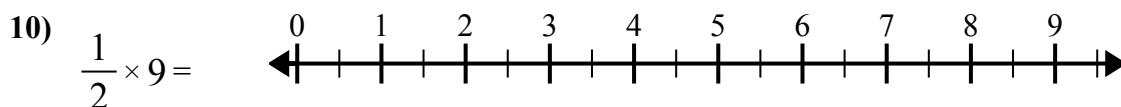
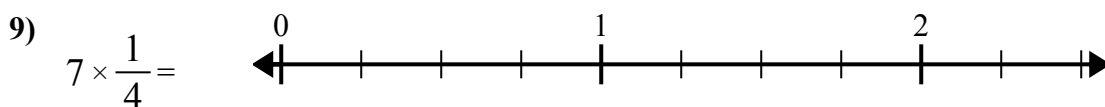
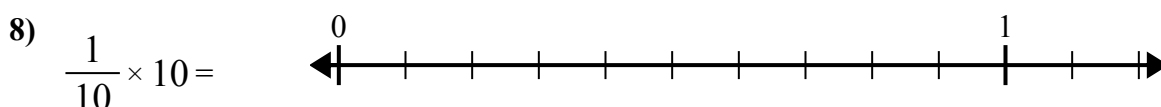
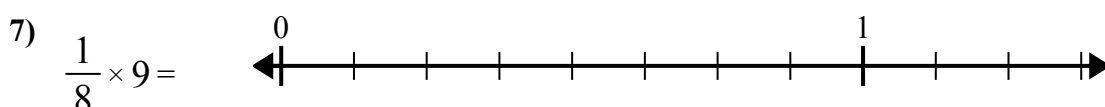
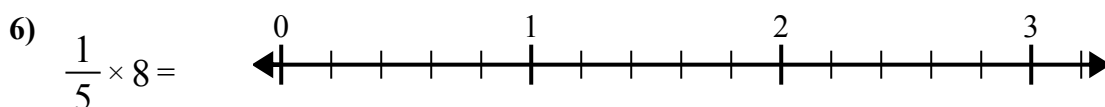
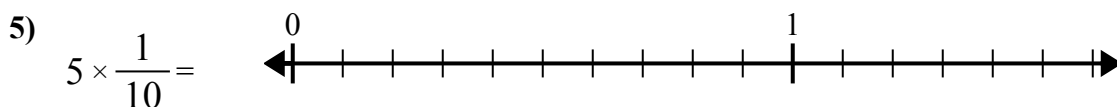
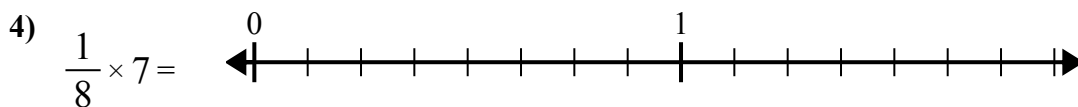
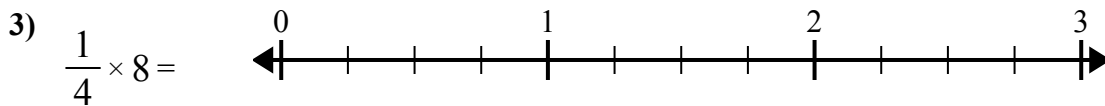
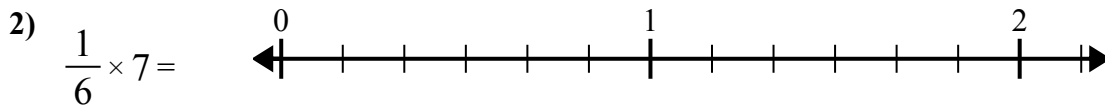
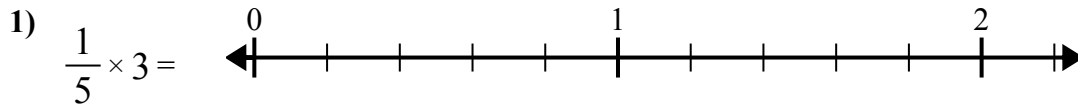
$\frac{5}{10}$

$1\frac{1}{8}$

$1\frac{0}{10}$

$1\frac{3}{4}$

$4\frac{1}{2}$



1. \_\_\_\_\_
2. \_\_\_\_\_
3. \_\_\_\_\_
4. \_\_\_\_\_
5. \_\_\_\_\_
6. \_\_\_\_\_
7. \_\_\_\_\_
8. \_\_\_\_\_
9. \_\_\_\_\_
10. \_\_\_\_\_