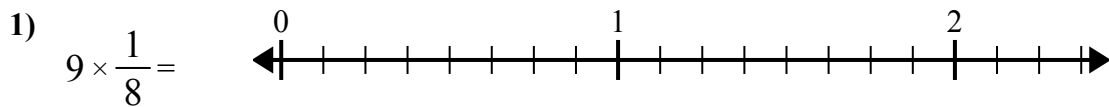


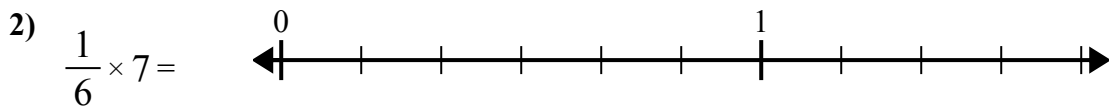


Sử dụng dãy số để giải quyết.

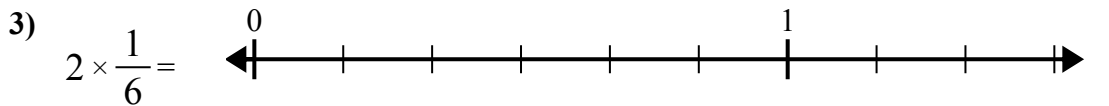
Câu trả lời



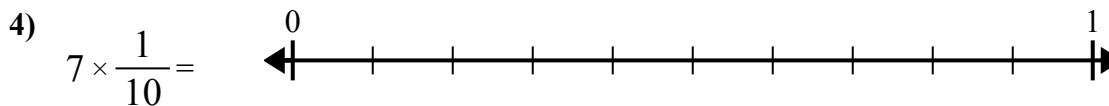
1. _____



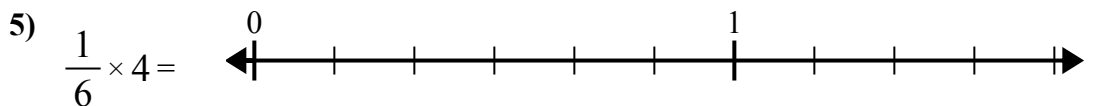
2. _____



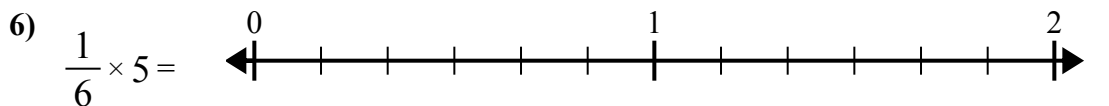
3. _____



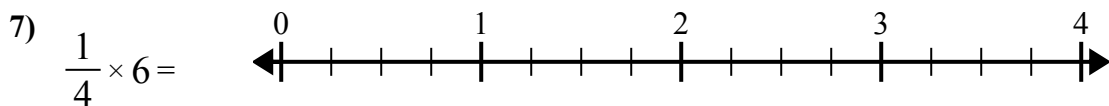
4. _____



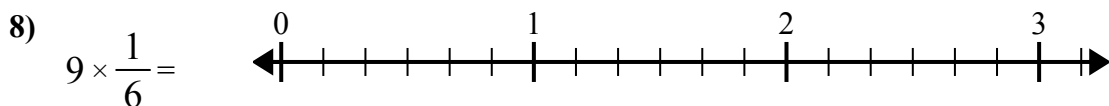
5. _____



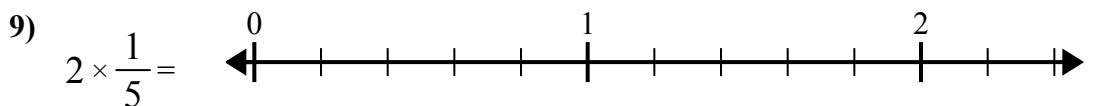
6. _____



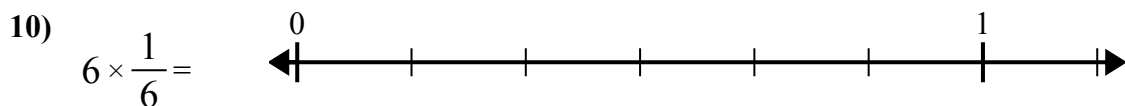
7. _____



8. _____



9. _____

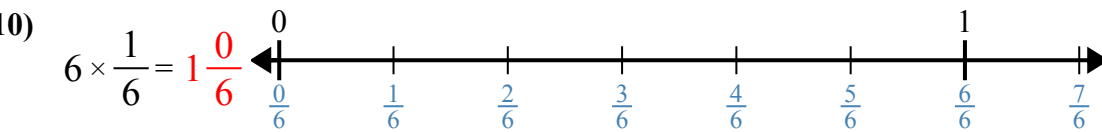
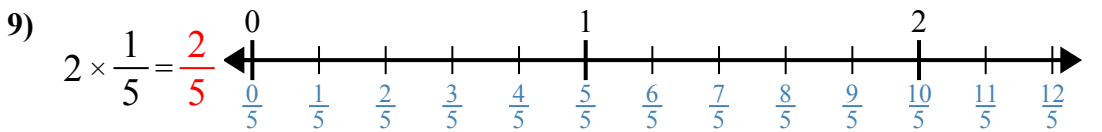
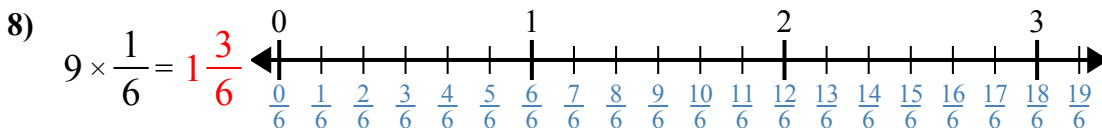
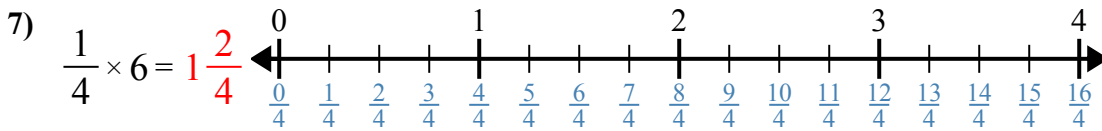
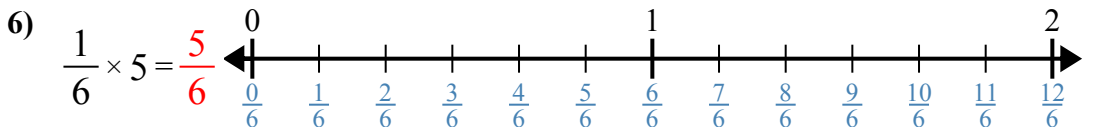
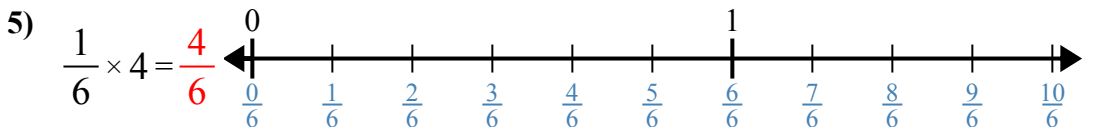
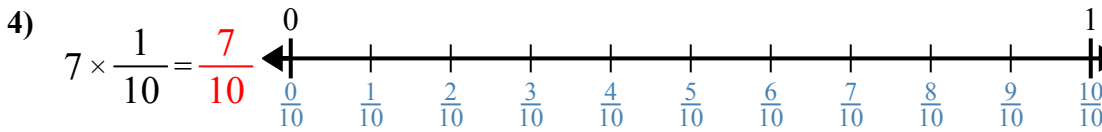
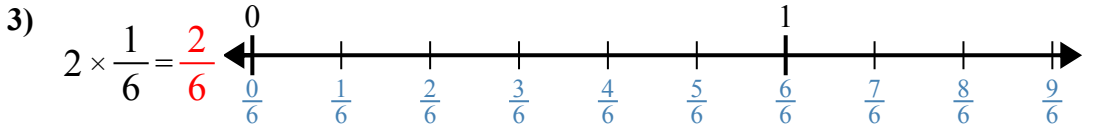
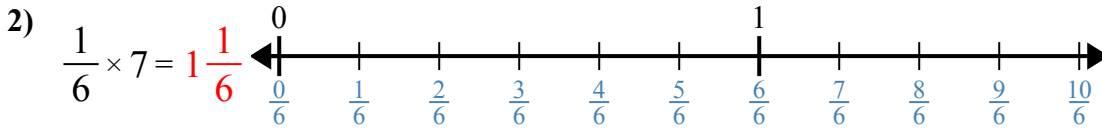
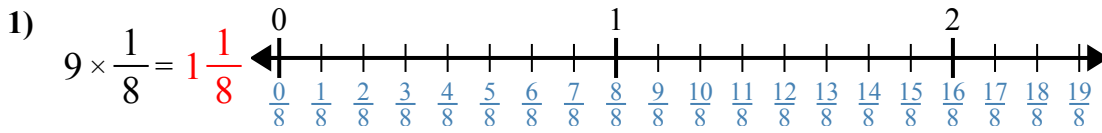


10. _____



Sử dụng dãy số để giải quyết.

Câu trả lời



1. 1 1/8
2. 1 1/6
3. 2/6
4. 7/10
5. 4/6
6. 5/6
7. 1 2/4
8. 1 3/6
9. 2/5
10. 1 0/6



Sử dụng dãy số để giải quyết.

Câu trả lời

$1\frac{2}{4}$

$1\frac{3}{6}$

$\frac{4}{6}$

$1\frac{1}{8}$

$\frac{7}{10}$

$\frac{2}{5}$

$\frac{5}{6}$

$1\frac{1}{6}$

$1\frac{0}{6}$

$\frac{2}{6}$

1. _____

2. _____

3. _____

4. _____

5. _____

6. _____

7. _____

8. _____

9. _____

10. _____

