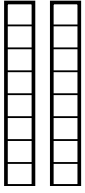


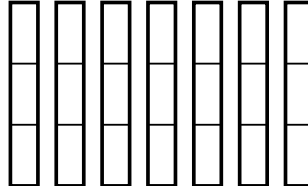


Sử dụng các mô hình trực quan để giải quyết.

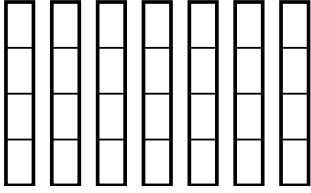
1) $\frac{5}{8} \times 2 =$



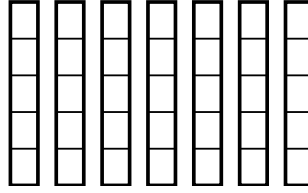
2) $\frac{1}{3} \times 7 =$



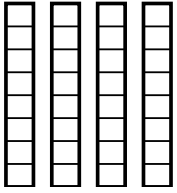
3) $\frac{2}{4} \times 7 =$



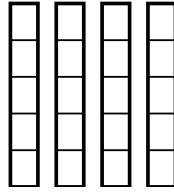
4) $\frac{4}{5} \times 7 =$



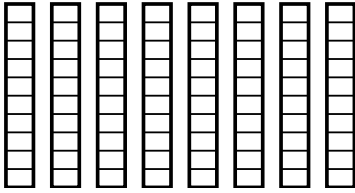
5) $\frac{5}{8} \times 4 =$



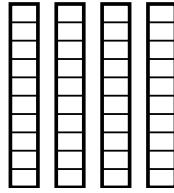
6) $\frac{4}{5} \times 4 =$



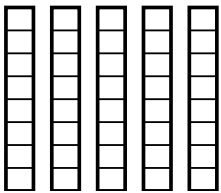
7) $\frac{7}{10} \times 8 =$



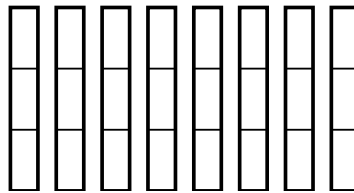
8) $\frac{4}{10} \times 4 =$



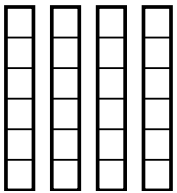
9) $\frac{1}{8} \times 5 =$



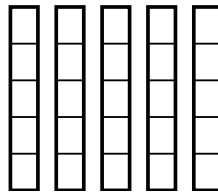
10) $\frac{2}{3} \times 8 =$



11) $\frac{1}{6} \times 4 =$



12) $\frac{4}{5} \times 5 =$

**Câu trả lời**

1. _____

2. _____

3. _____

4. _____

5. _____

6. _____

7. _____

8. _____

9. _____

10. _____

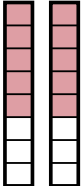
11. _____

12. _____

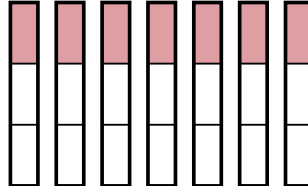


Sử dụng các mô hình trực quan để giải quyết.

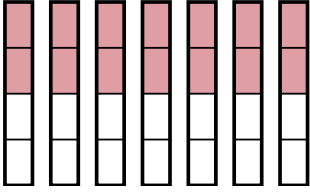
1) $\frac{5}{8} \times 2 =$



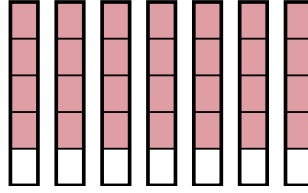
2) $\frac{1}{3} \times 7 =$



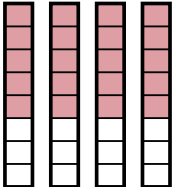
3) $\frac{2}{4} \times 7 =$



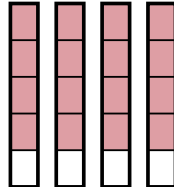
4) $\frac{4}{5} \times 7 =$



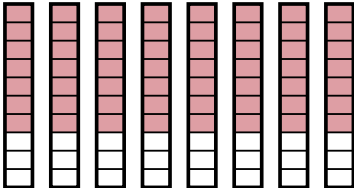
5) $\frac{5}{8} \times 4 =$



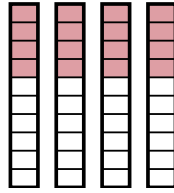
6) $\frac{4}{5} \times 4 =$



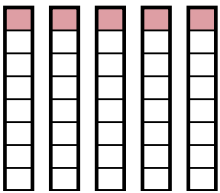
7) $\frac{7}{10} \times 8 =$



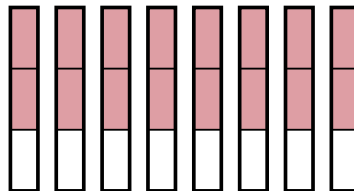
8) $\frac{4}{10} \times 4 =$



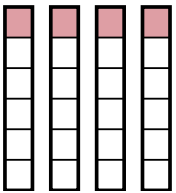
9) $\frac{1}{8} \times 5 =$



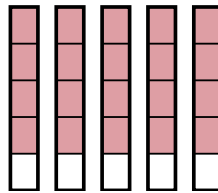
10) $\frac{2}{3} \times 8 =$



11) $\frac{1}{6} \times 4 =$



12) $\frac{4}{5} \times 5 =$

**Câu trả lời**

1. $\frac{10}{8}$

2. $\frac{7}{3}$

3. $\frac{14}{4}$

4. $\frac{28}{5}$

5. $\frac{20}{8}$

6. $\frac{16}{5}$

7. $\frac{56}{10}$

8. $\frac{16}{10}$

9. $\frac{5}{8}$

10. $\frac{16}{3}$

11. $\frac{4}{6}$

12. $\frac{20}{5}$