

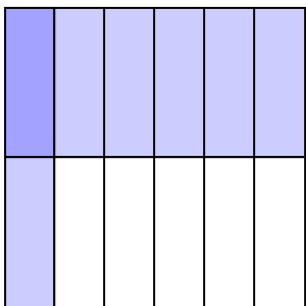




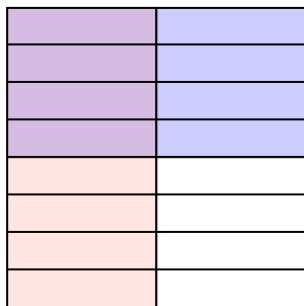
Dùng hộp được cho để cho thấy một ví dụ bằng hình về nhân hai phân số.

Câu trả lời

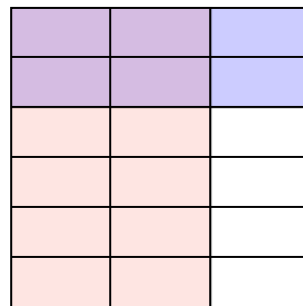
Vd)  $\frac{1}{6} \times \frac{1}{2} =$



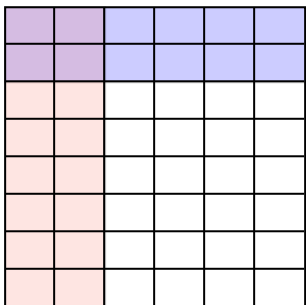
1)  $\frac{1}{2} \times \frac{4}{8} =$



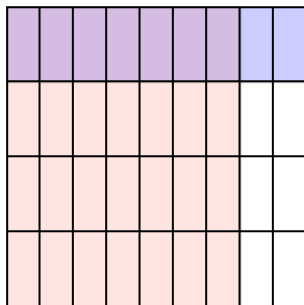
2)  $\frac{2}{3} \times \frac{2}{6} =$



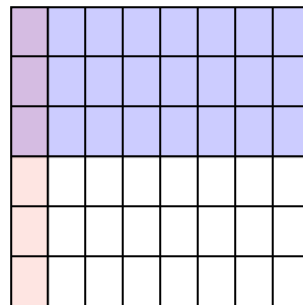
3)  $\frac{2}{6} \times \frac{2}{8} =$



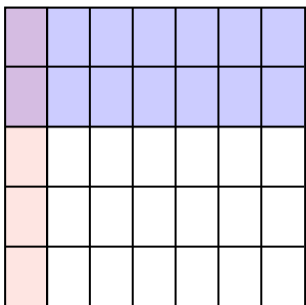
4)  $\frac{7}{9} \times \frac{1}{4} =$



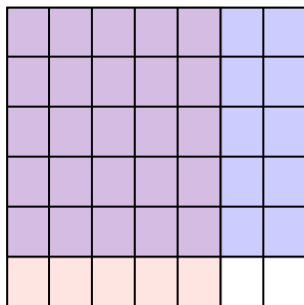
5)  $\frac{1}{8} \times \frac{3}{6} =$



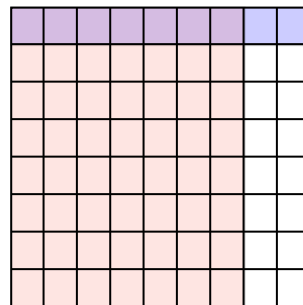
6)  $\frac{1}{7} \times \frac{2}{5} =$




7)  $\frac{5}{7} \times \frac{5}{6} =$



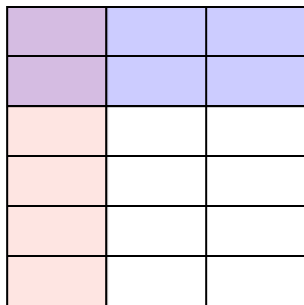
8)  $\frac{7}{9} \times \frac{1}{8} =$




9)  $\frac{3}{5} \times \frac{1}{4} =$



10)  $\frac{1}{3} \times \frac{2}{6} =$



11)  $\frac{1}{2} \times \frac{4}{7} =$



Vd.  $\frac{1}{12}$

1.  $\frac{4}{16}$

2.  $\frac{4}{18}$

3.  $\frac{4}{48}$

4.  $\frac{7}{36}$

5.  $\frac{3}{48}$

6.  $\frac{2}{35}$

7.  $\frac{25}{42}$

8.  $\frac{7}{72}$

9.  $\frac{3}{20}$

10.  $\frac{2}{18}$

11.  $\frac{4}{14}$