



Dùng hộp được cho để cho thấy một ví dụ bằng hình về nhân hai phân số.

Câu trả lời

Vd) $\frac{2}{4} \times \frac{1}{3} =$

1) $\frac{1}{2} \times \frac{3}{7} =$

2) $\frac{5}{9} \times \frac{3}{6} =$

Vd. $\frac{2}{12}$

1. _____

2. _____

3. _____

4. _____

3) $\frac{1}{3} \times \frac{1}{4} =$

4) $\frac{4}{7} \times \frac{2}{8} =$

5) $\frac{1}{2} \times \frac{2}{4} =$

5. _____

6. _____

7. _____

8. _____

9. _____

6) $\frac{7}{8} \times \frac{4}{7} =$

7) $\frac{2}{9} \times \frac{1}{4} =$

8) $\frac{3}{4} \times \frac{5}{8} =$

10. _____

11. _____

9) $\frac{2}{7} \times \frac{1}{2} =$

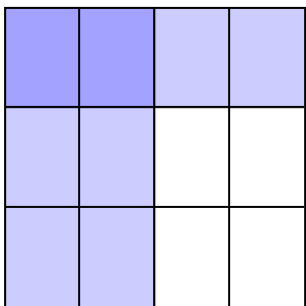
10) $\frac{1}{5} \times \frac{2}{5} =$

11) $\frac{2}{9} \times \frac{2}{5} =$

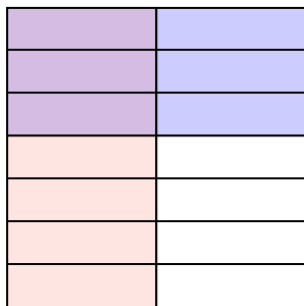


Dùng hộp được cho để cho thấy một ví dụ bằng hình về nhân hai phân số.

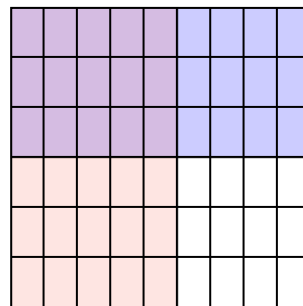
Vd) $\frac{2}{4} \times \frac{1}{3} =$




1) $\frac{1}{2} \times \frac{3}{7} =$



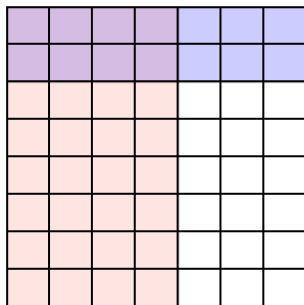
2) $\frac{5}{9} \times \frac{3}{6} =$



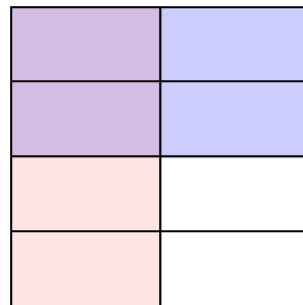
3) $\frac{1}{3} \times \frac{1}{4} =$



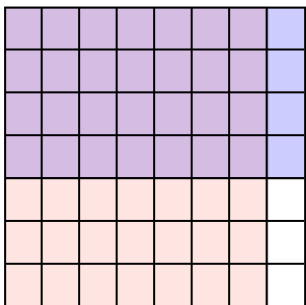
4) $\frac{4}{7} \times \frac{2}{8} =$



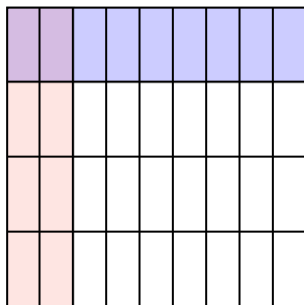
5) $\frac{1}{2} \times \frac{2}{4} =$



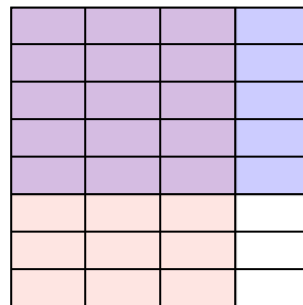
6) $\frac{7}{8} \times \frac{4}{7} =$



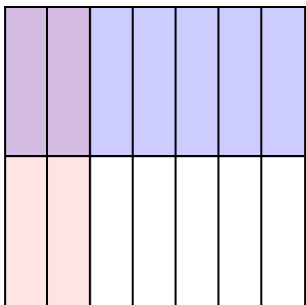
7) $\frac{2}{9} \times \frac{1}{4} =$



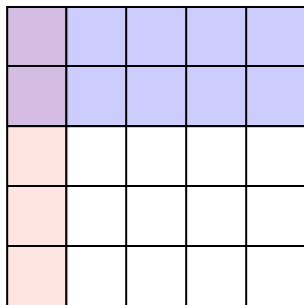
8) $\frac{3}{4} \times \frac{5}{8} =$



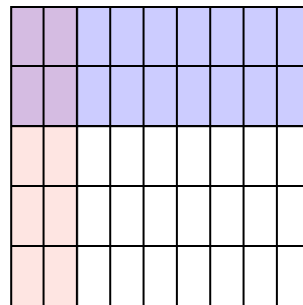
9) $\frac{2}{7} \times \frac{1}{2} =$



10) $\frac{1}{5} \times \frac{2}{5} =$



11) $\frac{2}{9} \times \frac{2}{5} =$



Câu trả lời

Vd. $\frac{2}{12}$

1. $\frac{3}{14}$

2. $\frac{15}{54}$

3. $\frac{1}{12}$

4. $\frac{8}{56}$

5. $\frac{2}{8}$

6. $\frac{28}{56}$

7. $\frac{2}{36}$

8. $\frac{15}{32}$

9. $\frac{2}{14}$

10. $\frac{2}{25}$

11. $\frac{4}{45}$